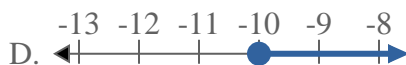
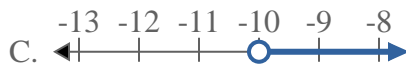
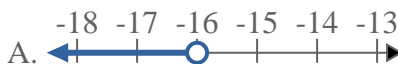

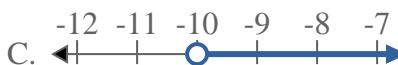
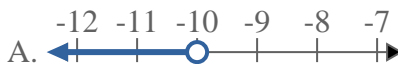
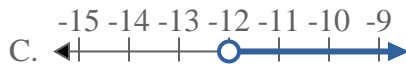
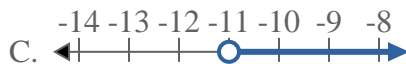
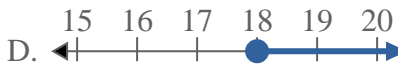
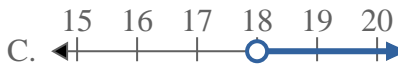


**Risolvi ogni problema.****Risposte**1) Quale opzione rappresenta correttamente $X \leq -10$ 2) Quale opzione rappresenta correttamente $X \geq -16$ 3) Quale opzione rappresenta correttamente $X \leq 11$ 4) Quale opzione rappresenta correttamente $X \geq -10$ 5) Quale opzione rappresenta correttamente $X \geq -12$ 6) Quale opzione rappresenta correttamente $X < 16$ 7) Quale opzione rappresenta correttamente $X \geq -11$ 8) Quale opzione rappresenta correttamente $X < 18$ 

1. _____

2. _____

3. _____

4. _____

5. _____

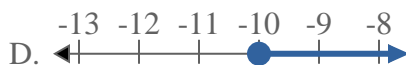
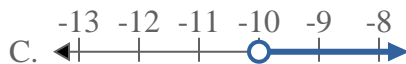
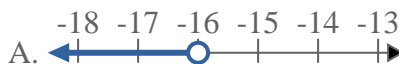

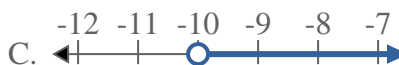
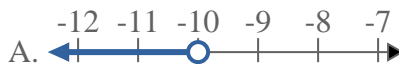
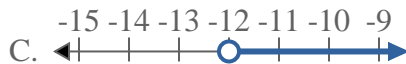
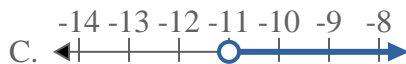
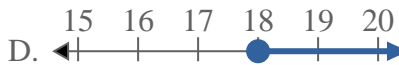
6. _____

7. _____

8. _____



Risolvi ogni problema.

Risposte1) Quale opzione rappresenta correttamente $X \leq -10$ 2) Quale opzione rappresenta correttamente $X \geq -16$ 3) Quale opzione rappresenta correttamente $X \leq 11$ 4) Quale opzione rappresenta correttamente $X \geq -10$ 5) Quale opzione rappresenta correttamente $X \geq -12$ 6) Quale opzione rappresenta correttamente $X < 16$ 7) Quale opzione rappresenta correttamente $X \geq -11$ 8) Quale opzione rappresenta correttamente $X < 18$ 1. **B** 2. **D** 3. **B** 4. **D** 5. **D** 6. **A** 7. **D** 8. **A**