



Usa la linea numerata per arrotondare ogni numero al centinaio più vicino.

Es)

4.410



Es. **4.400**

1)

853



1. _____

2)

783



2. _____

3)

9.697



3. _____

4)

8.980



4. _____

5)

569



5. _____

6)

9.924



6. _____

7)

99.310



7. _____

8)

90.005



8. _____

9)

17.192



9. _____

10)

60.453

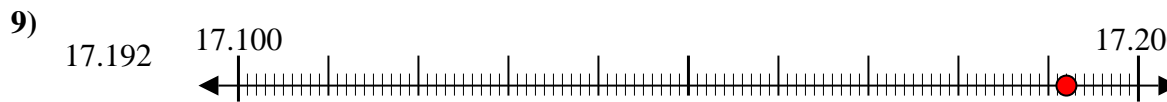
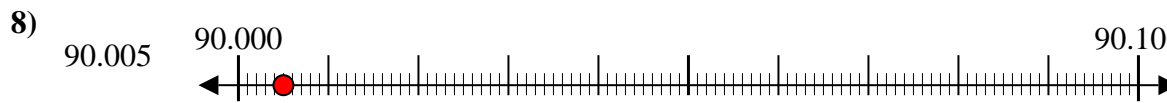
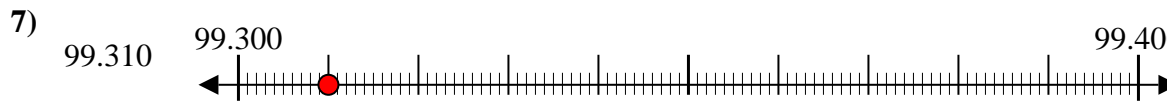
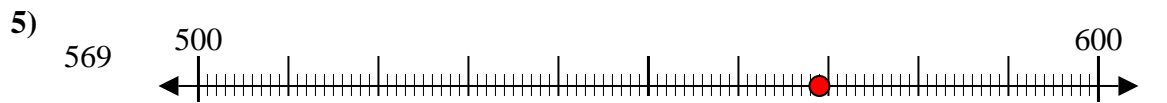
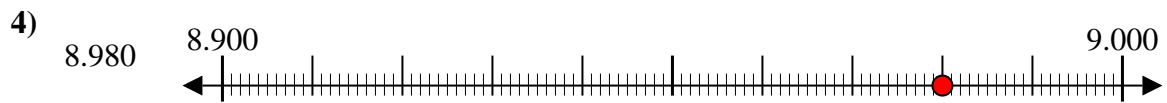
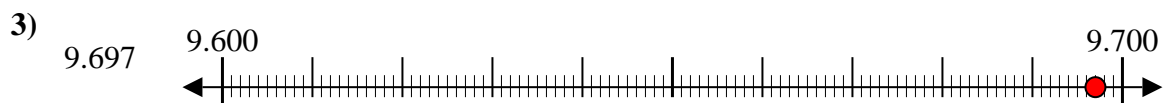
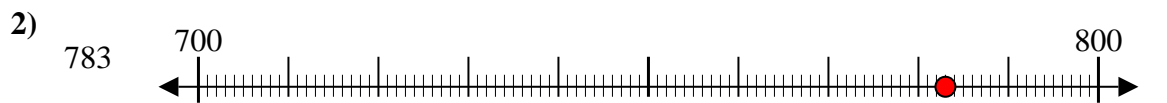
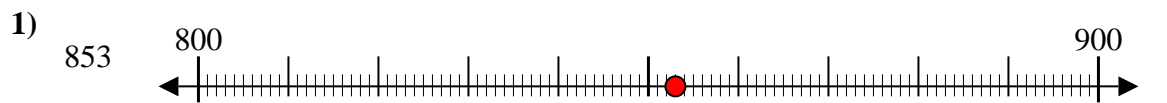


10. _____

Risposte



Usa la linea numerata per arrotondare ogni numero al centinaio più vicino.



Risposte

Es. 4.400

1. 900

2. 800

3. 9.700

4. 9.000

5. 600

6. 9.900

7. 99.300

8. 90.000

9. 17.200

10. 60.500