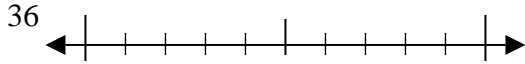


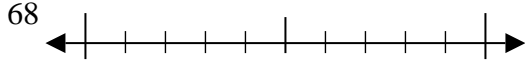


Usa la linea numerata per arrotondare alla decina più vicina.

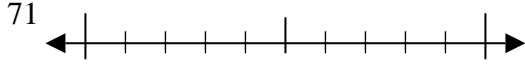
Es)



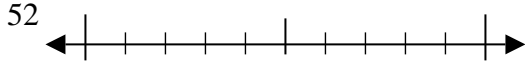
1)



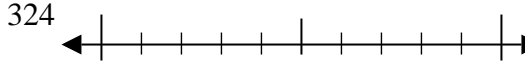
2)



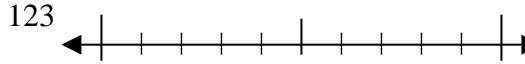
3)



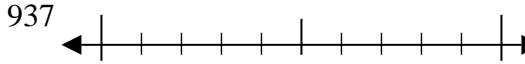
4)



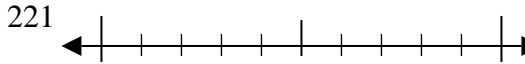
5)



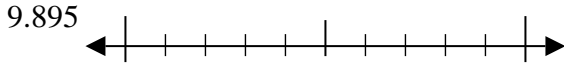
6)



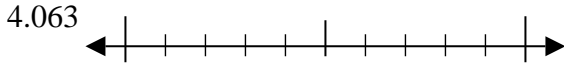
7)



8)



9)



Risposte

Es. 40

1. _____

2. _____

3. _____

4. _____

5. _____

6. _____

7. _____

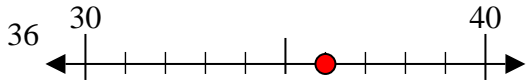
8. _____

9. _____

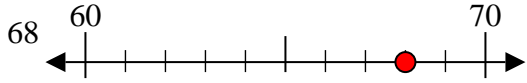


Usa la linea numerata per arrotondare alla decina più vicina.

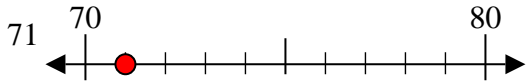
Es)



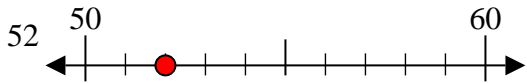
1)



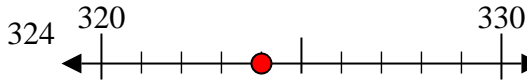
2)



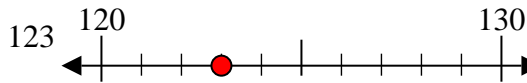
3)



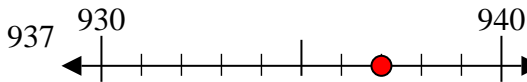
4)



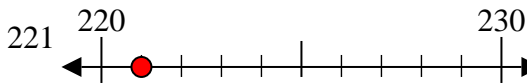
5)



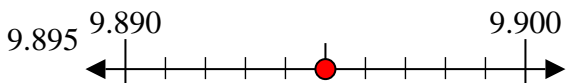
6)



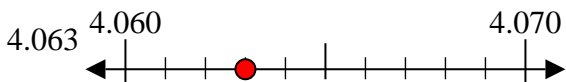
7)



8)



9)



Risposte

Es. 40

1. 70

2. 70

3. 50

4. 320

5. 120

6. 940

7. 220

8. 9900

9. 4060