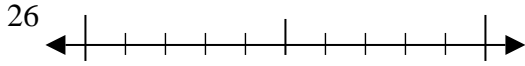


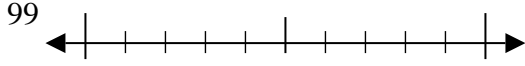


Usa la linea numerata per arrotondare alla decina più vicina.

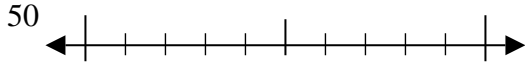
Es)



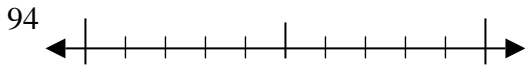
1)



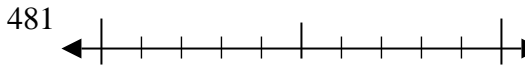
2)



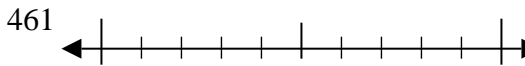
3)



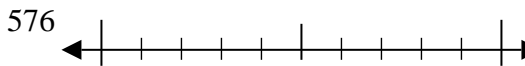
4)



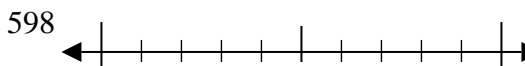
5)



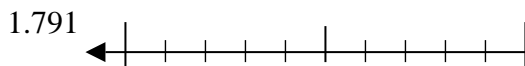
6)



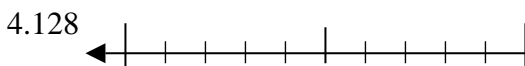
7)



8)



9)



Risposte

Es. 30

1. _____

2. _____

3. _____

4. _____

5. _____

6. _____

7. _____

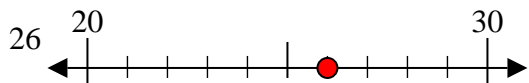
8. _____

9. _____

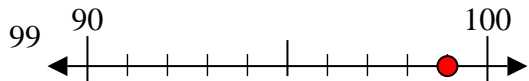


Usa la linea numerata per arrotondare alla decina più vicina.

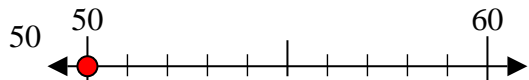
Es)



1)



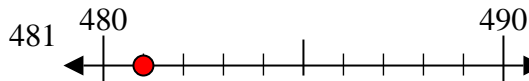
2)



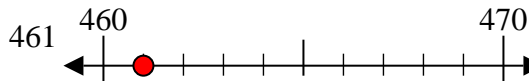
3)



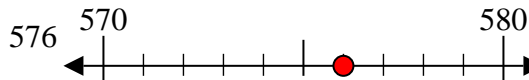
4)



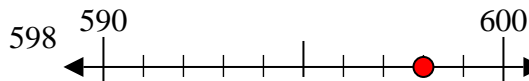
5)



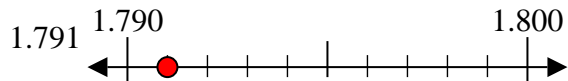
6)



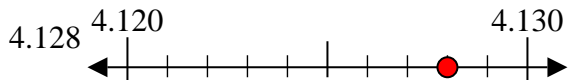
7)



8)



9)

**Risposte**Es. 301. 1002. 503. 904. 4805. 4606. 5807. 6008. 17909. 4130