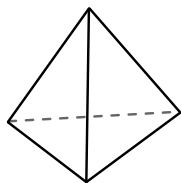




Usa il diagramma per identificare le facce, i vertici e le superfici delle forme

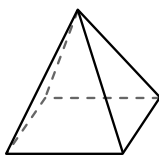
Risposte

1)



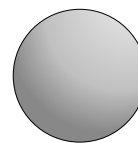
piramide triangolare
 facce: _____
 vertici: _____
 spigoli: _____

2)



piramide rettangolare
 facce: _____
 vertici: _____
 spigoli: _____

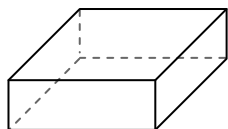
3)



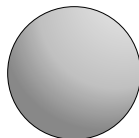
sfera
 facce: _____
 vertici: _____
 spigoli: _____

1. _____
2. _____
3. _____
4. _____
5. _____
6. _____

4)



prisma rettangolare

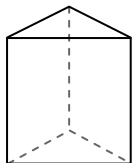


sfera

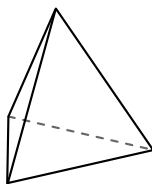
Quale forma ha più facce?

- A. prisma rettangolare
- B. sfera
- C. Entrambi hanno lo stesso numero di facce.

5)



prisma triangolare

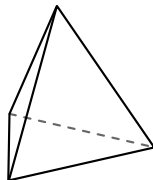


piramide triangolare

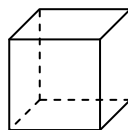
Quale forma ha più vertici?

- A. prisma triangolare
- B. piramide triangolare
- C. Entrambi hanno lo stesso numero di vertici.

6)



piramide triangolare



cube

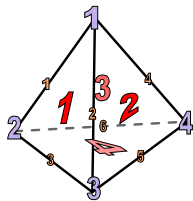
Quale forma ha più spigoli?

- A. piramide triangolare
- B. cube
- C. Entrambi hanno lo stesso numero di spigoli.



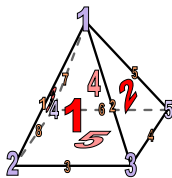
Usa il diagramma per identificare le facce, i vertici e le superfici delle forme

1)




piramide triangolare
 facce: 4
 vertici: 4
 spigoli: 6

2)



piramide rettangolare
 facce: 5
 vertici: 5
 spigoli: 8

3)



sfera
 facce: 1
 vertici: 0
 spigoli: 0

Risposte

1. 4, 4, 6

2. 5, 5, 8

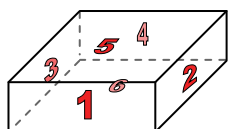
3. 1, 0, 0

4. A


5. A

6. B

4)



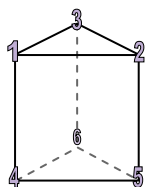
prisma rettangolare



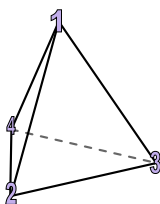
sfera

Quale forma ha più facce?
 A. prisma rettangolare
 B. sfera
 C. Entrambi hanno lo stesso numero di facce.

5)



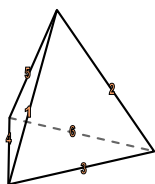
prisma triangolare



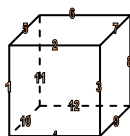
piramide triangolare

Quale forma ha più vertici?
 A. prisma triangolare
 B. piramide triangolare
 C. Entrambi hanno lo stesso numero di vertici.

6)



piramide triangolare



cube

Quale forma ha più spigoli?
 A. piramide triangolare
 B. cube
 C. Entrambi hanno lo stesso numero di spigoli.