




Usa il diagramma per identificare le facce, i vertici e le superfici delle forme

**Risposte**

1)



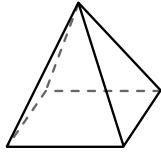
sfera

facce: \_\_\_\_\_

vertici: \_\_\_\_\_

spigoli: \_\_\_\_\_

2)



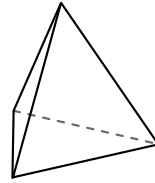
piramide rettangolare

facce: \_\_\_\_\_

vertici: \_\_\_\_\_

spigoli: \_\_\_\_\_

3)



piramide triangolare

facce: \_\_\_\_\_

vertici: \_\_\_\_\_

spigoli: \_\_\_\_\_

1. \_\_\_\_\_

2. \_\_\_\_\_

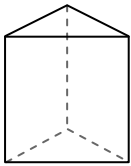
3. \_\_\_\_\_

4. \_\_\_\_\_


5. \_\_\_\_\_

6. \_\_\_\_\_

4)



prisma triangolare



sfera

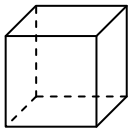
Quale forma ha più facce?

A.prisma triangolare

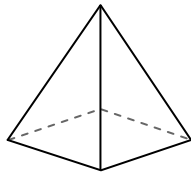
B.sfera

C.Entrambi hanno lo stesso numero di facce.

5)



cube



piramide rettangolare

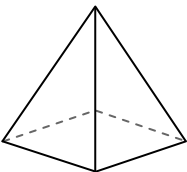
Quale forma ha più vertici?

A.cube

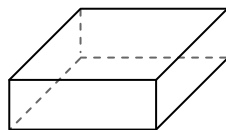
B.piramide rettangolare

C.Entrambi hanno lo stesso numero di vertici.

6)



piramide rettangolare



prisma rettangolare

Quale forma ha più spigoli?

A.piramide rettangolare


B.prisma rettangolare

C.Entrambi hanno lo stesso numero di spigoli.



Usa il diagramma per identificare le facce, i vertici e le superfici delle forme

1)



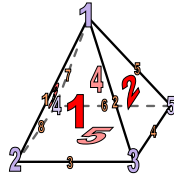
sfera

facce: 1

vertici: 0

spigoli: 0

2)



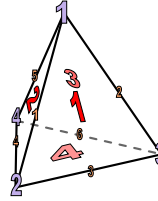
piramide rettangolare

facce: 5

vertici: 5

spigoli: 8

3)




piramide triangolare

facce: 4


vertici: 4

spigoli: 6

4)



prisma triangolare



sfera

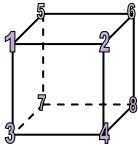
Quale forma ha più facce?

A. prisma triangolare

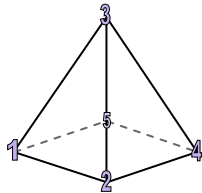
B. sfera

C. Entrambi hanno lo stesso numero di facce.

5)



cube



piramide rettangolare

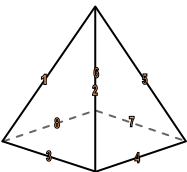
Quale forma ha più vertici?

A. cube

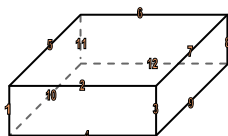
B. piramide rettangolare

C. Entrambi hanno lo stesso numero di vertici.

6)



piramide rettangolare



prisma rettangolare

Quale forma ha più spigoli?

A. piramide rettangolare

B. prisma rettangolare

C. Entrambi hanno lo stesso numero di spigoli.

**Risposte**

1. 1, 0, 0

2. 5, 5, 8

3. 4, 4, 6

4. A

5. A

6. B