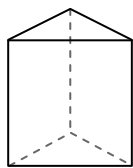




Usa il diagramma per identificare le facce, i vertici e le superfici delle forme

Risposte

1)



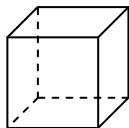
prisma triangolare

facce: _____

vertici: _____

spigoli: _____

2)



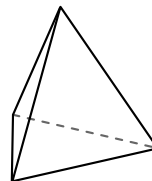
cube

facce: _____

vertici: _____

spigoli: _____

3)



piramide triangolare

facce: _____

vertici: _____

spigoli: _____

1. _____

2. _____


3. _____

4. _____

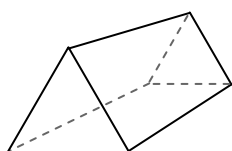
5. _____

6. _____

4)



sfera



prisma triangolare

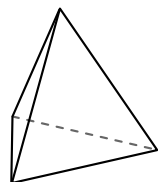
Quale forma ha più facce?

A.sfera


B.prisma triangolare

C.Entrambi hanno lo stesso numero di facce.

5)



piramide triangolare



sfera


Quale forma ha più vertici?

A.piramide triangolare

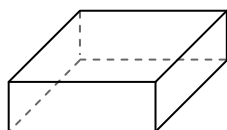
B.sfera

C.Entrambi hanno lo stesso numero di vertici.

6)



sfera



prisma rettangolare

Quale forma ha più spigoli?

A.sfera

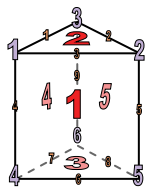
B.prisma rettangolare

C.Entrambi hanno lo stesso numero di spigoli.



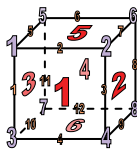
Usa il diagramma per identificare le facce, i vertici e le superfici delle forme

1)



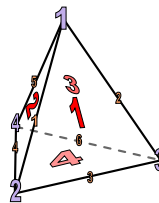
prisma triangolare
 facce: 5
 vertici: 6
 spigoli: 9

2)




cube
 facce: 6
 vertici: 8
 spigoli: 12

3)

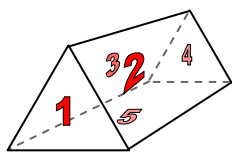


piramide triangolare
 facce: 4
 vertici: 4
 spigoli: 6

4)



sfera

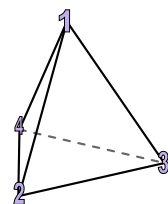


prisma triangolare


Quale forma ha più facce?

- A.sfera
- B.prisma triangolare
- C.Entrambi hanno lo stesso numero di facce.

5)



piramide triangolare




sfera

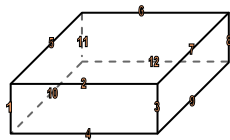
Quale forma ha più vertici?

- A.piramide triangolare
- B.sfera
- C.Entrambi hanno lo stesso numero di vertici.

6)



sfera



prisma rettangolare

Quale forma ha più spigoli?

- A.sfera
- B.prisma rettangolare
- C.Entrambi hanno lo stesso numero di spigoli.

Risposte

1. 5, 6, 9

2. 6, 8, 12

3. 4, 4, 6

4. B

5. A

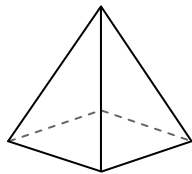
6. B



Usa il diagramma per identificare le facce, i vertici e le superfici delle forme

Risposte

1)




piramide rettangolare

facce: _____

vertici: _____

spigoli: _____

2)



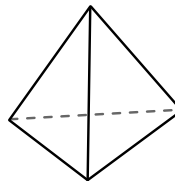
sfera

facce: _____

vertici: _____

spigoli: _____

3)



piramide triangolare

facce: _____

vertici: _____

spigoli: _____

1. _____

2. _____

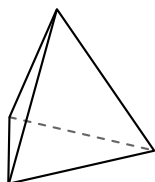
3. _____

4. _____

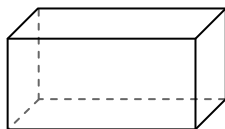
5. _____

6. _____

4)



piramide triangolare



prisma rettangolare

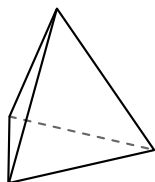
Quale forma ha più facce?

A.piramide triangolare

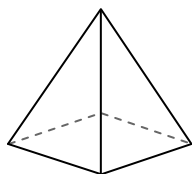
B.prisma rettangolare

C.Entrambi hanno lo stesso numero di facce.

5)



piramide triangolare



piramide rettangolare

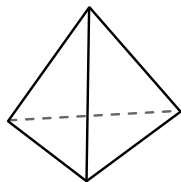
Quale forma ha più vertici?

A.piramide triangolare

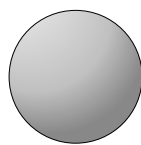
B.piramide rettangolare

C.Entrambi hanno lo stesso numero di vertici.

6)



piramide triangolare



sfera

Quale forma ha più spigoli?

A.piramide triangolare

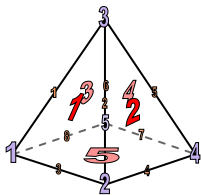
B.sfera

C.Entrambi hanno lo stesso numero di spigoli.



Usa il diagramma per identificare le facce, i vertici e le superfici delle forme


1)



piramide rettangolare

facce: 5
 vertici: 5
 spigoli: 8

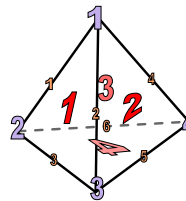
2)



sfera

facce: 1
 vertici: 0
 spigoli: 0

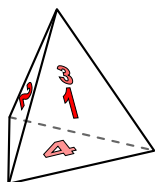
3)



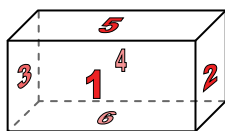
piramide triangolare

facce: 4
 vertici: 4
 spigoli: 6

4)



piramide triangolare

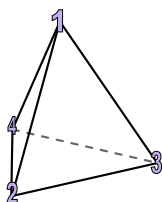


prisma rettangolare

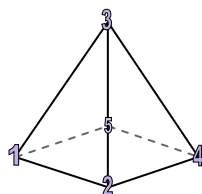
Quale forma ha più facce?

- A.piramide triangolare
- B.prisma rettangolare
- C.Entrambi hanno lo stesso numero di facce.

5)



piramide triangolare

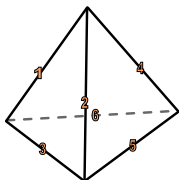


piramide rettangolare


Quale forma ha più vertici?

- A.piramide triangolare
- B.piramide rettangolare
- C.Entrambi hanno lo stesso numero di vertici.

6)



piramide triangolare



sfera

Quale forma ha più spigoli?

- A.piramide triangolare
- B.sfera
- C.Entrambi hanno lo stesso numero di spigoli.

Risposte

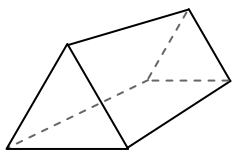
- 1. 5, 5, 8
- 2. 1, 0, 0
- 3. 4, 4, 6
- 4. B
- 5. B
- 6. A



Usa il diagramma per identificare le facce, i vertici e le superfici delle forme

Risposte

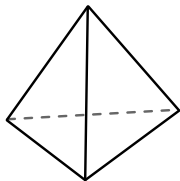
1)



prisma triangolare

facce: _____
 vertici: _____
 spigoli: _____

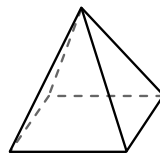
2)



piramide triangolare

facce: _____
 vertici: _____
 spigoli: _____

3)




piramide rettangolare

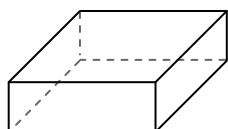
facce: _____
 vertici: _____
 spigoli: _____

1. _____
2. _____
3. _____
4. _____
5. _____
6. _____

4)



sfera

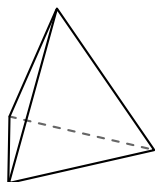


prisma rettangolare

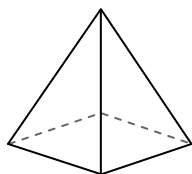
Quale forma ha più facce?

- A.sfera
- B.prisma rettangolare
- C.Entrambi hanno lo stesso numero di facce.

5)



piramide triangolare

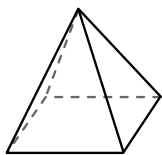


piramide rettangolare

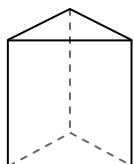
Quale forma ha più vertici?

- A.piramide triangolare
- B.piramide rettangolare
- C.Entrambi hanno lo stesso numero di vertici.

6)



piramide rettangolare



prisma triangolare

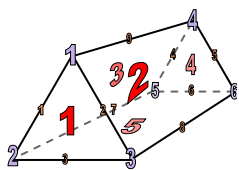
Quale forma ha più spigoli?

- A.piramide rettangolare
- B.prisma triangolare
- C.Entrambi hanno lo stesso numero di spigoli.



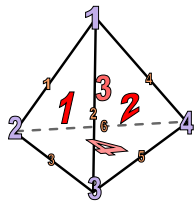
Usa il diagramma per identificare le facce, i vertici e le superfici delle forme

1)



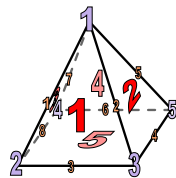
prisma triangolare
 facce: 5
 vertici: 6
 spigoli: 9

2)




piramide triangolare
 facce: 4
 vertici: 4
 spigoli: 6

3)

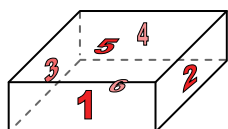


piramide rettangolare
 facce: 5
 vertici: 5
 spigoli: 8

4)



sfera

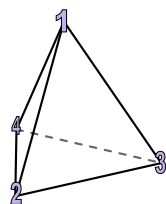


prisma rettangolare

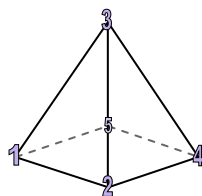
Quale forma ha più facce?

- A.sfera
- B.prisma rettangolare
- C.Entrambi hanno lo stesso numero di facce.

5)



piramide triangolare

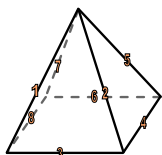


piramide rettangolare

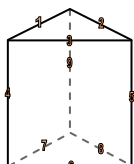
Quale forma ha più vertici?

- A.piramide triangolare
- B.piramide rettangolare
- C.Entrambi hanno lo stesso numero di vertici.

6)



piramide rettangolare



prisma triangolare

Quale forma ha più spigoli?

- A.piramide rettangolare
- B.prisma triangolare
- C.Entrambi hanno lo stesso numero di spigoli.

Risposte

1. 5, 6, 9

2. 4, 4, 6

3. 5, 5, 8

4. B

5. B

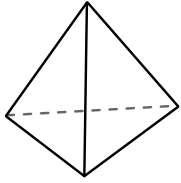
6. B



Usa il diagramma per identificare le facce, i vertici e le superfici delle forme

Risposte

1)



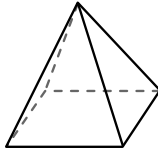
piramide triangolare

facce: _____

vertici: _____

spigoli: _____

2)



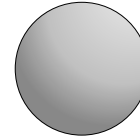
piramide rettangolare

facce: _____

vertici: _____

spigoli: _____

3)



sfera

facce: _____

vertici: _____

spigoli: _____

1. _____

2. _____

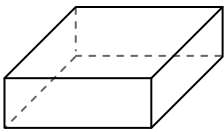
3. _____

4. _____

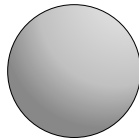
5. _____

6. _____

4)



prisma rettangolare



sfera

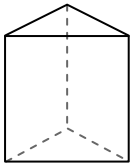
Quale forma ha più facce?

A. prisma rettangolare

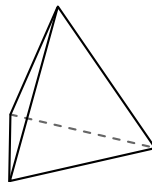
B. sfera

C. Entrambi hanno lo stesso numero di facce.

5)



prisma triangolare



piramide triangolare

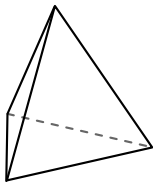
Quale forma ha più vertici?

A. prisma triangolare

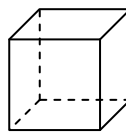
B. piramide triangolare

C. Entrambi hanno lo stesso numero di vertici.

6)



piramide triangolare



cube

Quale forma ha più spigoli?

A. piramide triangolare

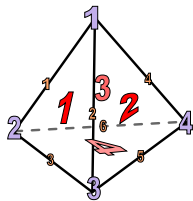
B. cube

C. Entrambi hanno lo stesso numero di spigoli.



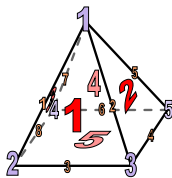
Usa il diagramma per identificare le facce, i vertici e le superfici delle forme

1)




piramide triangolare
 facce: 4
 vertici: 4
 spigoli: 6

2)



piramide rettangolare
 facce: 5
 vertici: 5
 spigoli: 8

3)



sfera
 facce: 1
 vertici: 0
 spigoli: 0

Risposte

1. 4, 4, 6

2. 5, 5, 8

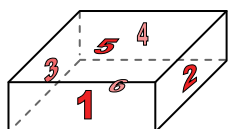
3. 1, 0, 0

4. A


5. A

6. B

4)



prisma rettangolare

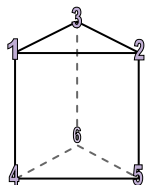


sfera

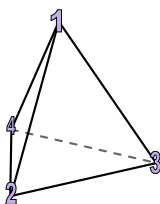
Quale forma ha più facce?

- A. prisma rettangolare
- B. sfera
- C. Entrambi hanno lo stesso numero di facce.

5)



prisma triangolare

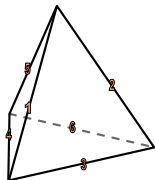


piramide triangolare

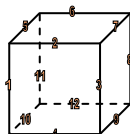
Quale forma ha più vertici?

- A. prisma triangolare
- B. piramide triangolare
- C. Entrambi hanno lo stesso numero di vertici.

6)



piramide triangolare



cube

Quale forma ha più spigoli?

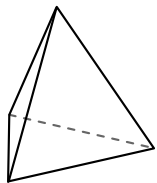
- A. piramide triangolare
- B. cube
- C. Entrambi hanno lo stesso numero di spigoli.



Usa il diagramma per identificare le facce, i vertici e le superfici delle forme

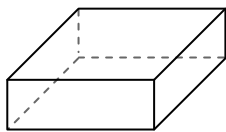
Risposte

1)



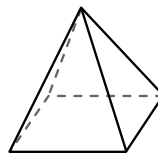
piramide triangolare
 facce: _____
 vertici: _____
 spigoli: _____

2)



prisma rettangolare
 facce: _____
 vertici: _____
 spigoli: _____

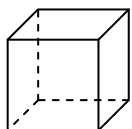
3)



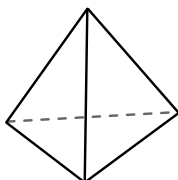
piramide rettangolare
 facce: _____
 vertici: _____
 spigoli: _____

1. _____
2. _____
3. _____
4. _____
5. _____
6. _____

4)




cube



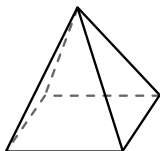
piramide triangolare

Quale forma ha più facce?
 A.cube
 B.piramide triangolare
 C.Entrambi hanno lo stesso numero di facce.

5)



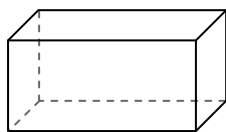
sfera




piramide rettangolare

Quale forma ha più vertici?
 A.sfera
 B.piramide rettangolare
 C.Entrambi hanno lo stesso numero di vertici.

6)



prisma rettangolare



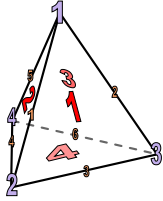
sfera

Quale forma ha più spigoli?
 A.prisma rettangolare
 B.sfera
 C.Entrambi hanno lo stesso numero di spigoli.



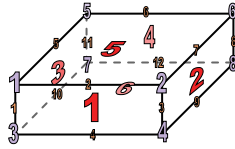
Usa il diagramma per identificare le facce, i vertici e le superfici delle forme

1)



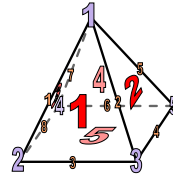
piramide triangolare
 facce: 4
 vertici: 4
 spigoli: 6

2)



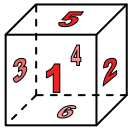
prisma rettangolare
 facce: 6
 vertici: 8
 spigoli: 12

3)

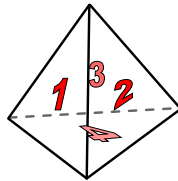


piramide rettangolare
 facce: 5
 vertici: 5
 spigoli: 8

4)



cube




piramide triangolare

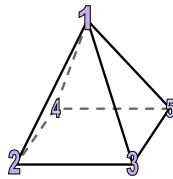
Quale forma ha più facce?

- A.cube
- B.piramide triangolare
- C.Entrambi hanno lo stesso numero di facce.

5)



sfera

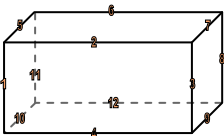


piramide rettangolare


Quale forma ha più vertici?

- A.sfera
- B.piramide rettangolare
- C.Entrambi hanno lo stesso numero di vertici.

6)



prisma rettangolare



sfera

Quale forma ha più spigoli?

- A.prisma rettangolare
- B.sfera
- C.Entrambi hanno lo stesso numero di spigoli.

Risposte

1. 4, 4, 6

2. 6, 8, 12

3. 5, 5, 8

4. A

5. B


6. A



Usa il diagramma per identificare le facce, i vertici e le superfici delle forme

Risposte

1)



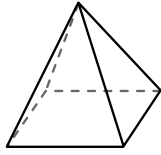
sfera

facce: _____

vertici: _____

spigoli: _____

2)



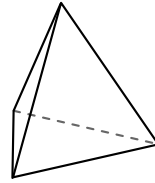
piramide rettangolare

facce: _____

vertici: _____

spigoli: _____

3)



piramide triangolare

facce: _____

vertici: _____

spigoli: _____

1. _____

2. _____

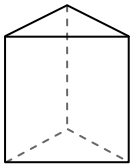
3. _____

4. _____


5. _____

6. _____

4)



prisma triangolare



sfera

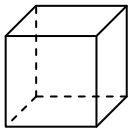
Quale forma ha più facce?

A.prisma triangolare

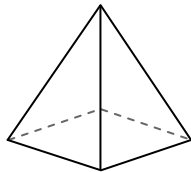
B.sfera

C.Entrambi hanno lo stesso numero di facce.

5)



cube



piramide rettangolare

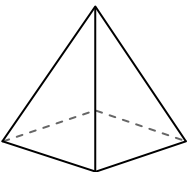
Quale forma ha più vertici?

A.cube

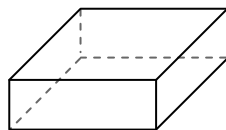
B.piramide rettangolare

C.Entrambi hanno lo stesso numero di vertici.

6)



piramide rettangolare



prisma rettangolare

Quale forma ha più spigoli?

A.piramide rettangolare


B.prisma rettangolare

C.Entrambi hanno lo stesso numero di spigoli.



Usa il diagramma per identificare le facce, i vertici e le superfici delle forme

1)



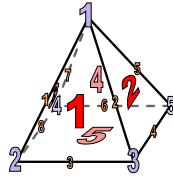
sfera

facce: 1

vertici: 0

spigoli: 0

2)



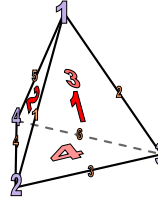
piramide rettangolare

facce: 5

vertici: 5

spigoli: 8

3)




piramide triangolare

facce: 4

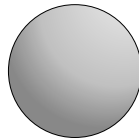
vertici: 4

spigoli: 6

4)



prisma triangolare



sfera

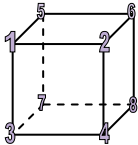
Quale forma ha più facce?

A. prisma triangolare

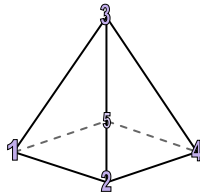
B. sfera

C. Entrambi hanno lo stesso numero di facce.

5)



cube



piramide rettangolare

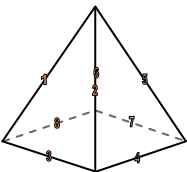
Quale forma ha più vertici?

A. cube

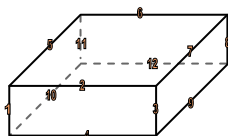
B. piramide rettangolare

C. Entrambi hanno lo stesso numero di vertici.

6)



piramide rettangolare



prisma rettangolare

Quale forma ha più spigoli?

A. piramide rettangolare

B. prisma rettangolare

C. Entrambi hanno lo stesso numero di spigoli.

Risposte

1. 1, 0, 0

2. 5, 5, 8

3. 4, 4, 6

4. A

5. A


6. B



Usa il diagramma per identificare le facce, i vertici e le superfici delle forme

Risposte

1)



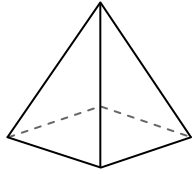
sfera

facce: _____

vertici: _____

spigoli: _____

2)



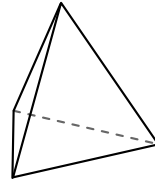
piramide rettangolare

facce: _____

vertici: _____

spigoli: _____

3)



piramide triangolare

facce: _____

vertici: _____

spigoli: _____

1. _____

2. _____

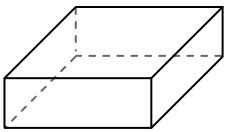
3. _____

4. _____


5. _____

6. _____

4)



prisma rettangolare



sfera

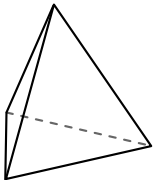
Quale forma ha più facce?

A. prisma rettangolare

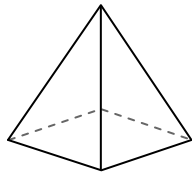
B. sfera

C. Entrambi hanno lo stesso numero di facce.

5)



piramide triangolare



piramide rettangolare

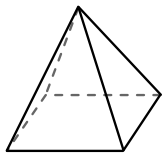
Quale forma ha più vertici?

A. piramide triangolare

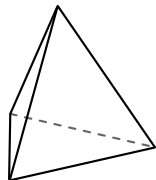
B. piramide rettangolare

C. Entrambi hanno lo stesso numero di vertici.

6)



piramide rettangolare



piramide triangolare

Quale forma ha più spigoli?

A. piramide rettangolare


B. piramide triangolare

C. Entrambi hanno lo stesso numero di spigoli.



Usa il diagramma per identificare le facce, i vertici e le superfici delle forme

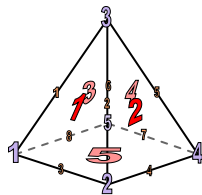
1)



sfera

facce: 1
 vertici: 0
 spigoli: 0

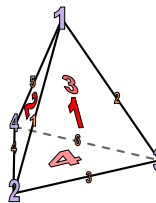
2)



piramide rettangolare

facce: 5
 vertici: 5
 spigoli: 8

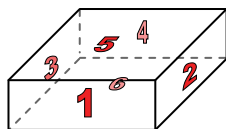
3)



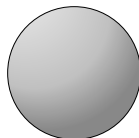
piramide triangolare

facce: 4
 vertici: 4
 spigoli: 6

4)



prisma rettangolare

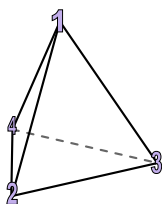


sfera

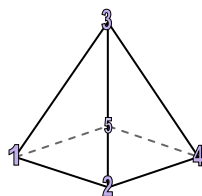
Quale forma ha più facce?

- A. prisma rettangolare
- B. sfera
- C. Entrambi hanno lo stesso numero di facce.

5)



piramide triangolare

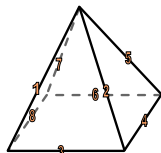


piramide rettangolare

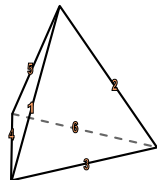
Quale forma ha più vertici?

- A. piramide triangolare
- B. piramide rettangolare
- C. Entrambi hanno lo stesso numero di vertici.

6)



piramide rettangolare



piramide triangolare

Quale forma ha più spigoli?

- A. piramide rettangolare
- B. piramide triangolare
- C. Entrambi hanno lo stesso numero di spigoli.

Risposte

1. 1, 0, 0

2. 5, 5, 8

3. 4, 4, 6

4. A

5. B

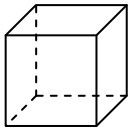
6. A



Usa il diagramma per identificare le facce, i vertici e le superfici delle forme

Risposte

1)



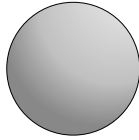
cube

facce: _____

vertici: _____

spigoli: _____

2)



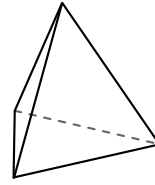
sfera

facce: _____

vertici: _____

spigoli: _____

3)



piramide triangolare

facce: _____

vertici: _____

spigoli: _____

1. _____

2. _____


3. _____

4. _____

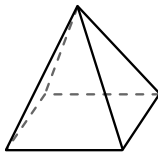
5. _____

6. _____

4)



sfera



piramide rettangolare

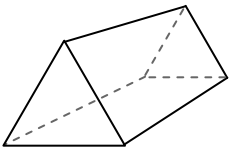
Quale forma ha più facce?

A.sfera

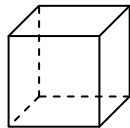
B.piramide rettangolare

C.Entrambi hanno lo stesso numero di facce.

5)



prisma triangolare



cube

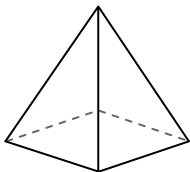
Quale forma ha più vertici?

A.prisma triangolare

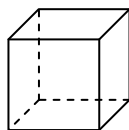
B.cube

C.Entrambi hanno lo stesso numero di vertici.

6)



piramide rettangolare



cube

Quale forma ha più spigoli?

A.piramide rettangolare

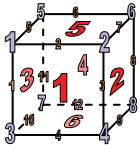
B.cube

C.Entrambi hanno lo stesso numero di spigoli.



Usa il diagramma per identificare le facce, i vertici e le superfici delle forme

1)



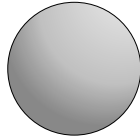
cube

facce: 6

vertici: 8

spigoli: 12

2)



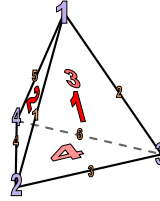
sfera

facce: 1

vertici: 0

spigoli: 0

3)




piramide triangolare

facce: 4

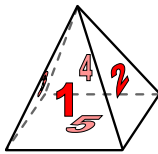
vertici: 4

spigoli: 6

4)



sfera



piramide rettangolare

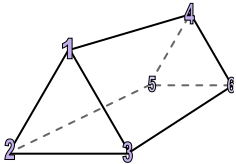
Quale forma ha più facce?

A.sfera

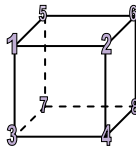
B.piramide rettangolare

C.Entrambi hanno lo stesso numero di facce.

5)



prisma triangolare



cube

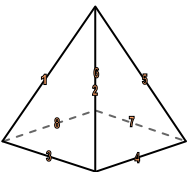
Quale forma ha più vertici?

A.prisma triangolare

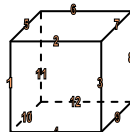
B.cube

C.Entrambi hanno lo stesso numero di vertici.

6)



piramide rettangolare



cube

Quale forma ha più spigoli?

A.piramide rettangolare

B.cube

C.Entrambi hanno lo stesso numero di spigoli.

Risposte

1. 6, 8, 12

2. 1, 0, 0

3. 4, 4, 6

4. B

5. B


6. B



Usa il diagramma per identificare le facce, i vertici e le superfici delle forme

Risposte

1)



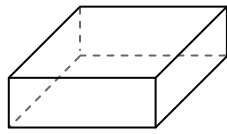
sfera

facce: _____

vertici: _____

spigoli: _____

2)



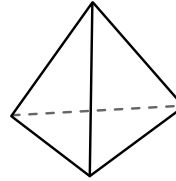
prisma rettangolare

facce: _____

vertici: _____

spigoli: _____

3)



piramide triangolare

facce: _____

vertici: _____

spigoli: _____

1. _____

2. _____

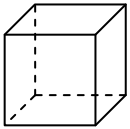
3. _____

4. _____

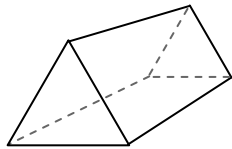
5. _____

6. _____

4)



cube



prisma triangolare

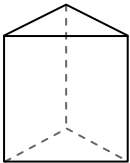
Quale forma ha più facce?

A.cube

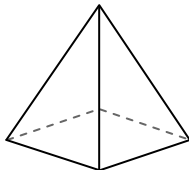
B.prisma triangolare

C.Entrambi hanno lo stesso numero di facce.

5)



prisma triangolare



piramide rettangolare

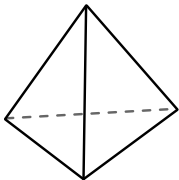
Quale forma ha più vertici?

A.prisma triangolare

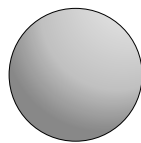
B.piramide rettangolare

C.Entrambi hanno lo stesso numero di vertici.

6)



piramide triangolare



sfera

Quale forma ha più spigoli?

A.piramide triangolare


B.sfera

C.Entrambi hanno lo stesso numero di spigoli.



Usa il diagramma per identificare le facce, i vertici e le superfici delle forme

1)



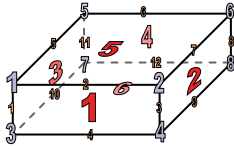
sfera

facce: 1

vertici: 0

spigoli: 0

2)



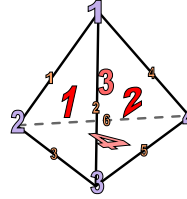
prisma rettangolare

facce: 6

vertici: 8

spigoli: 12

3)



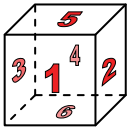
piramide triangolare

facce: 4

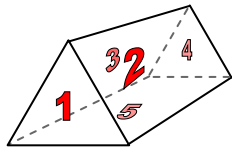
vertici: 4

spigoli: 6

4)



cube



prisma triangolare

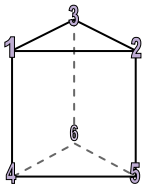
Quale forma ha più facce?

A.cube

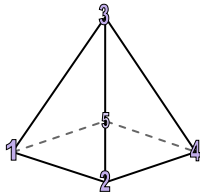
B.prisma triangolare

C.Entrambi hanno lo stesso numero di facce.

5)



prisma triangolare



piramide rettangolare

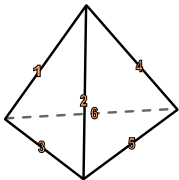
Quale forma ha più vertici?

A.prisma triangolare

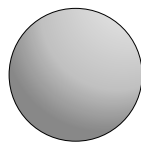
B.piramide rettangolare

C.Entrambi hanno lo stesso numero di vertici.

6)



piramide triangolare



sfera

Quale forma ha più spigoli?

A.piramide triangolare

B.sfera

C.Entrambi hanno lo stesso numero di spigoli.

Risposte

1. 1, 0, 0

2. 6, 8, 12

3. 4, 4, 6

4. A

5. A

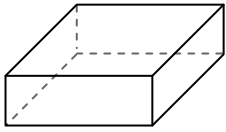
6. A



Usa il diagramma per identificare le facce, i vertici e le superfici delle forme

Risposte

1)



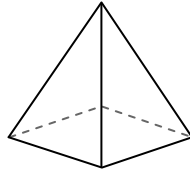
prisma rettangolare

facce: _____

vertici: _____

spigoli: _____

2)



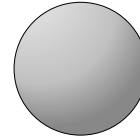
piramide rettangolare

facce: _____

vertici: _____

spigoli: _____

3)



sfera

facce: _____

vertici: _____

spigoli: _____

1. _____

2. _____

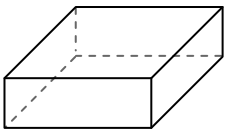
3. _____

4. _____

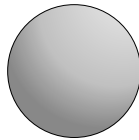
5. _____

6. _____

4)



prisma rettangolare



sfera

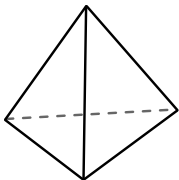
Quale forma ha più facce?

A.prisma rettangolare

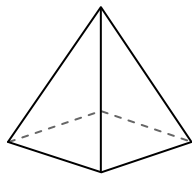
B.sfera

C.Entrambi hanno lo stesso numero di facce.

5)



piramide triangolare



piramide rettangolare

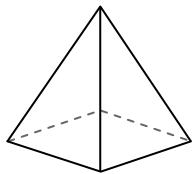
Quale forma ha più vertici?

A.piramide triangolare

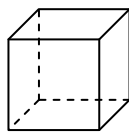
B.piramide rettangolare

C.Entrambi hanno lo stesso numero di vertici.

6)



piramide rettangolare



cube

Quale forma ha più spigoli?

A.piramide rettangolare

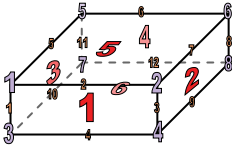
B.cube

C.Entrambi hanno lo stesso numero di spigoli.



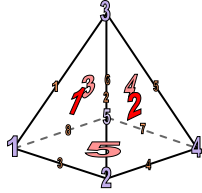
Usa il diagramma per identificare le facce, i vertici e le superfici delle forme

1)




prisma rettangolare
 facce: 6
 vertici: 8
 spigoli: 12

2)



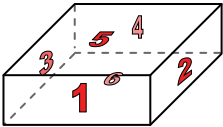
piramide rettangolare
 facce: 5
 vertici: 5
 spigoli: 8

3)

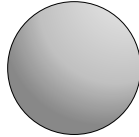


sfera
 facce: 1
 vertici: 0
 spigoli: 0

4)



prisma rettangolare

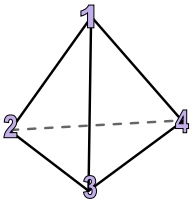


sfera

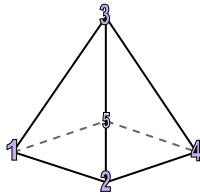
Quale forma ha più facce?

- A. prisma rettangolare
- B. sfera
- C. Entrambi hanno lo stesso numero di facce.

5)



piramide triangolare

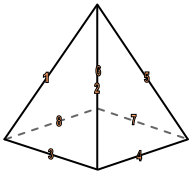


piramide rettangolare

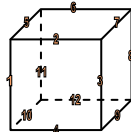
Quale forma ha più vertici?

- A. piramide triangolare
- B. piramide rettangolare
- C. Entrambi hanno lo stesso numero di vertici.

6)



piramide rettangolare



cube

Quale forma ha più spigoli?

- A. piramide rettangolare
- B. cube
- C. Entrambi hanno lo stesso numero di spigoli.

Risposte

1. 6, 8, 12

2. 5, 5, 8

3. 1, 0, 0

4. A

5. B

6. B