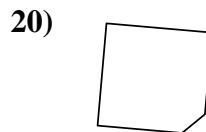
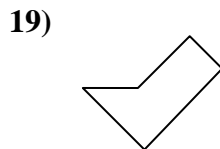
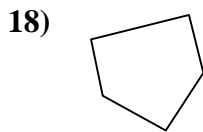
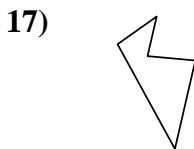
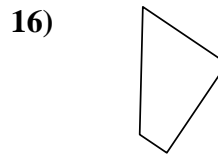
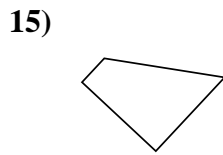
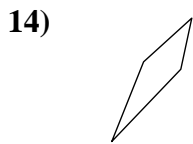
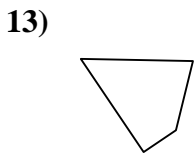
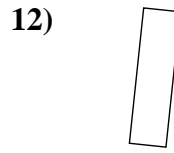
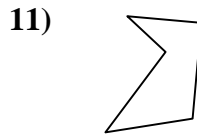
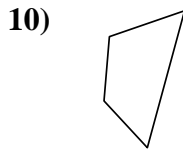
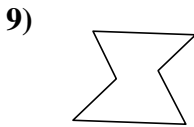
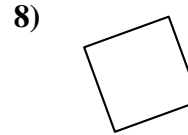
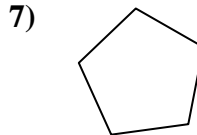
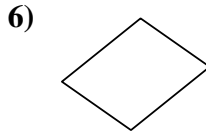
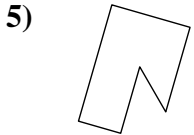
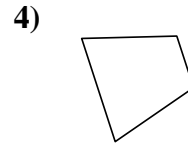
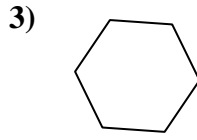
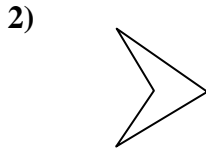
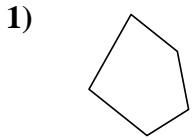




Determina se le forme mostrate sono quadrilateri (si) oppure no (no).

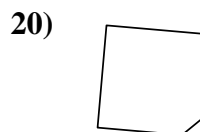
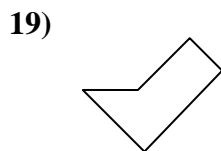
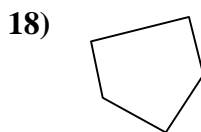
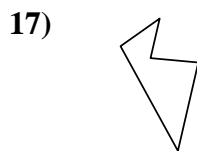
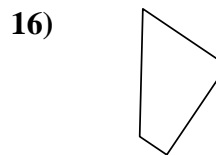
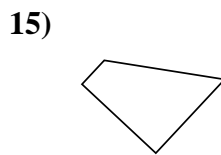
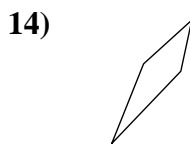
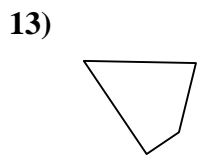
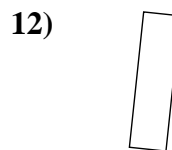
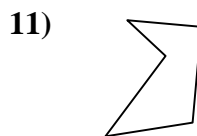
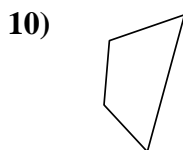
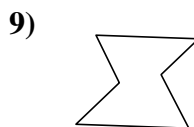
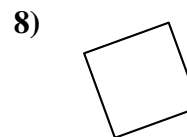
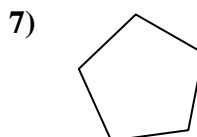
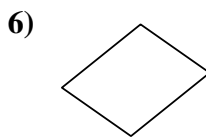
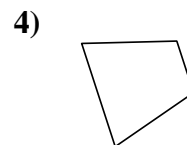
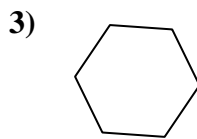
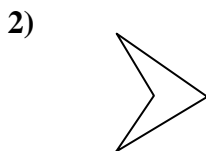
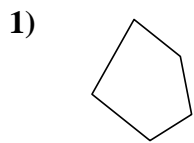
Risposte



- 1. _____
- 2. _____
- 3. _____
- 4. _____
- 5. _____
- 6. _____
- 7. _____
- 8. _____
- 9. _____
- 10. _____
- 11. _____
- 12. _____
- 13. _____
- 14. _____
- 15. _____
- 16. _____
- 17. _____
- 18. _____
- 19. _____
- 20. _____



Determina se le forme mostrate sono quadrilateri (si) oppure no (no).



Risposte

1. **no**

2. **si**

3. **no**

4. **si**

5. **no**

6. **si**

7. **no**

8. **si**

9. **no**

10. **si**

11. **no**

12. **si**

13. **si**

14. **si**

15. **si**

16. **si**

17. **no**

18. **no**

19. **no**

20. **no**