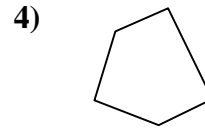
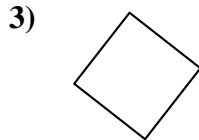
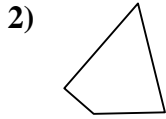
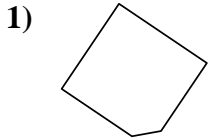




Determina se le forme mostrate sono quadrilateri (si) oppure no (no).

**Risposte**

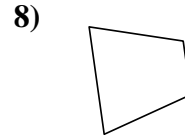
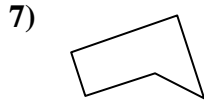
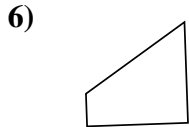
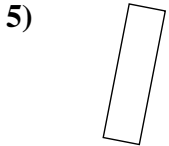


1. \_\_\_\_\_

2. \_\_\_\_\_

3. \_\_\_\_\_

4. \_\_\_\_\_

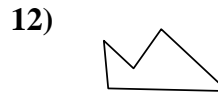
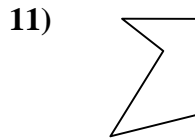
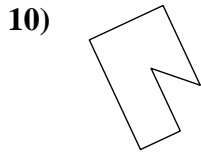
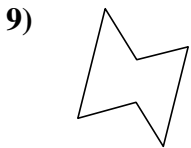


5. \_\_\_\_\_

6. \_\_\_\_\_

7. \_\_\_\_\_

8. \_\_\_\_\_

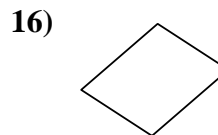
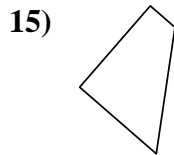
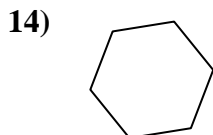
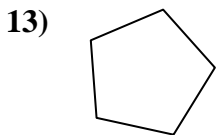


9. \_\_\_\_\_

10. \_\_\_\_\_

11. \_\_\_\_\_

12. \_\_\_\_\_

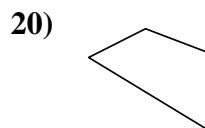
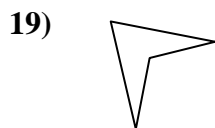
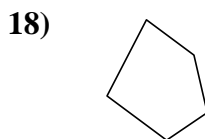
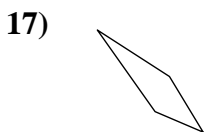


13. \_\_\_\_\_

14. \_\_\_\_\_

15. \_\_\_\_\_

16. \_\_\_\_\_



17. \_\_\_\_\_

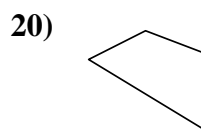
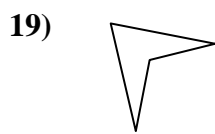
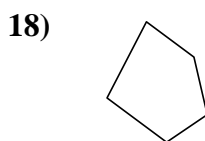
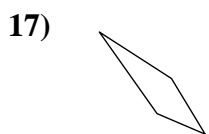
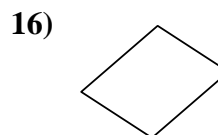
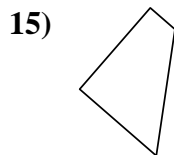
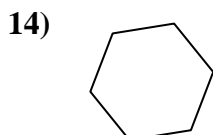
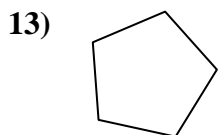
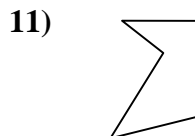
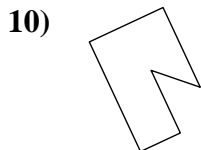
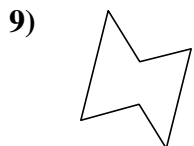
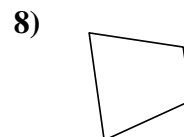
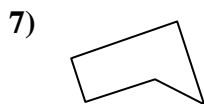
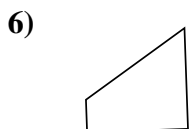
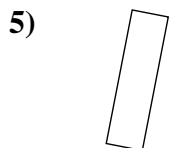
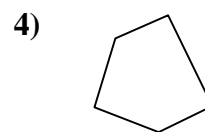
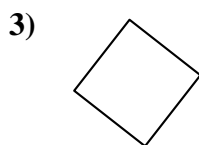
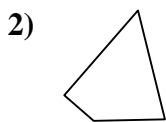
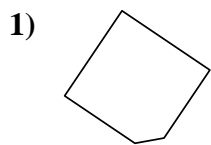
18. \_\_\_\_\_

19. \_\_\_\_\_

20. \_\_\_\_\_



Determina se le forme mostrate sono quadrilateri (si) oppure no (no).



**Risposte**

1. no

2. si

3. si

4. no

5. si

6. si

7. no

8. si

9. no

10. no

11. no

12. no

13. no

14. no

15. si

16. si

17. si

18. no

19. si

20. si