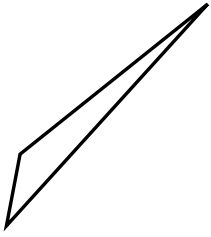




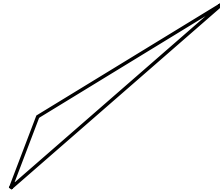
Determina se i triangoli mostrati sono rettangoli oppure no.

Risposte

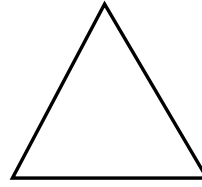
1)



2)



3)



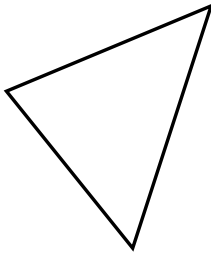
1. _____

2. _____

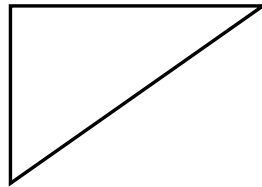
3. _____

4. _____


4)



5)



6)




5. _____

6. _____

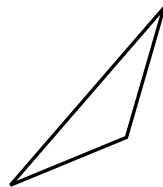
7. _____

8. _____


7)



8)



9)



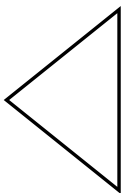
9. _____

10. _____

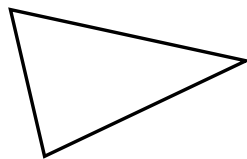
11. _____

12. _____

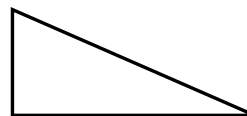
10)



11)



12)

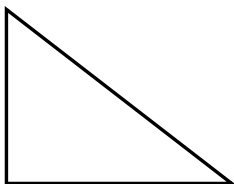


13. _____

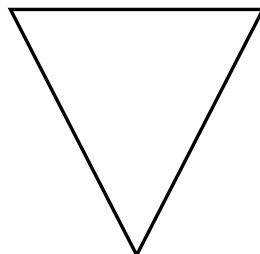
14. _____

15. _____

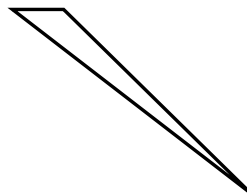
13)



14)



15)

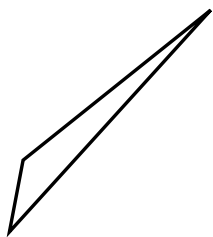




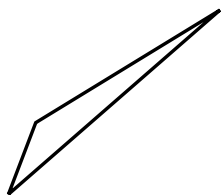
Determina se i triangoli mostrati sono rettangoli oppure no.

Risposte

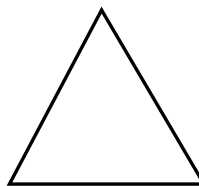
1)



2)

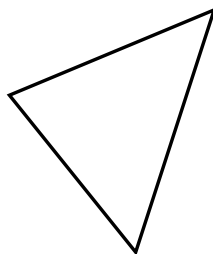


3)

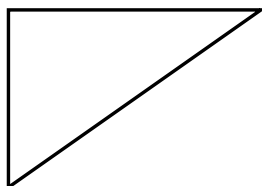


1. **no**


4)



5)



6)



2. **no**

3. **no**

4. **no**


5. **si**

6. **si**

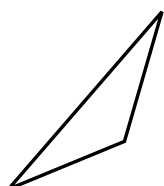
7. **no**

8. **no**


7)



8)



9)



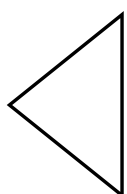
9. **si**

10. **no**

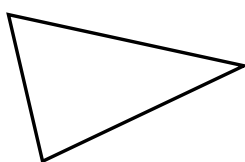
11. **no**

12. **si**

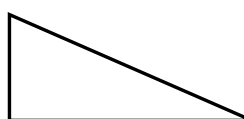
10)



11)



12)

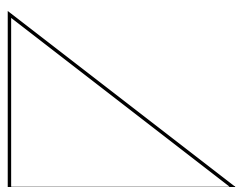


13. **si**

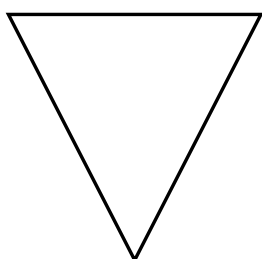
14. **no**

15. **no**

13)



14)



15)

