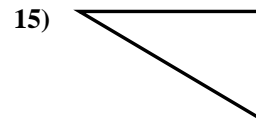
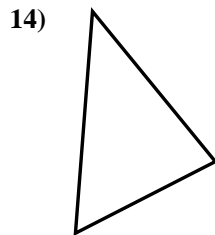
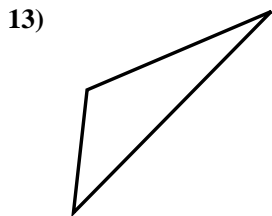
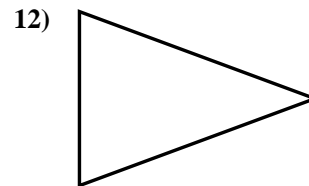
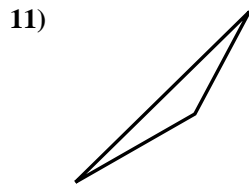
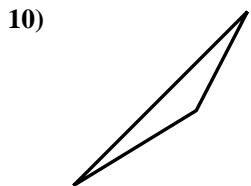
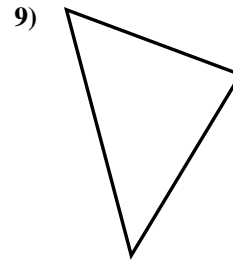
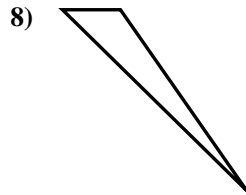
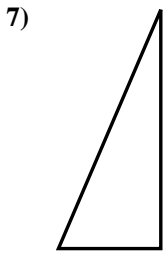
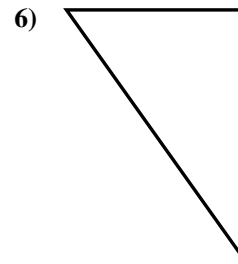
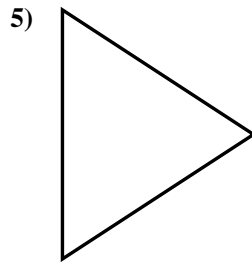
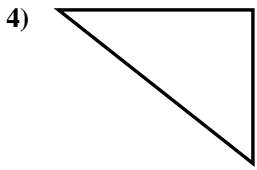
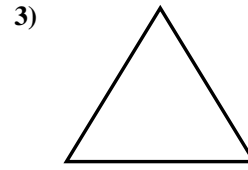
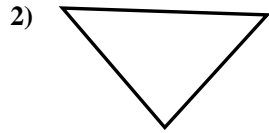
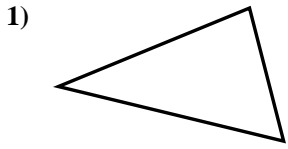




Determina se i triangoli mostrati sono rettangoli oppure no.

**Risposte**

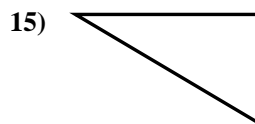
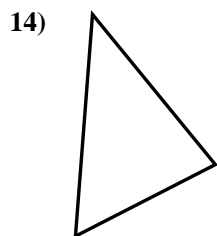
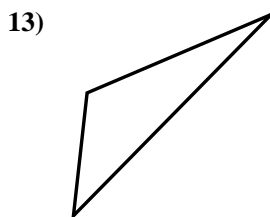
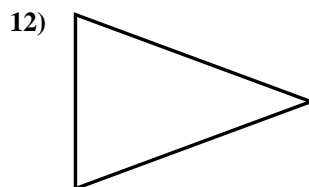
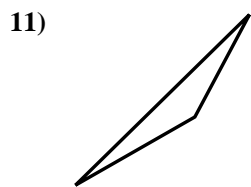
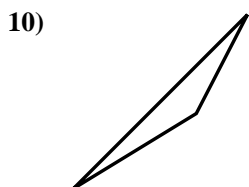
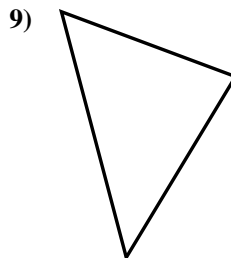
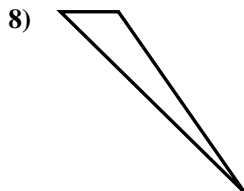
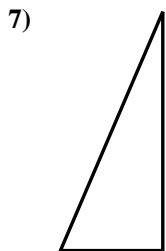
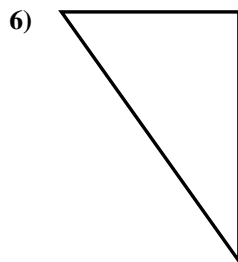
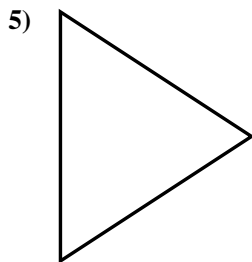
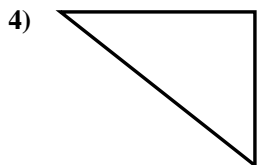
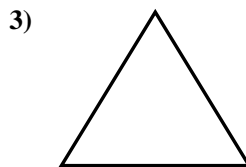
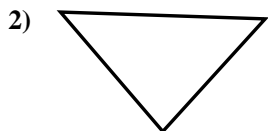
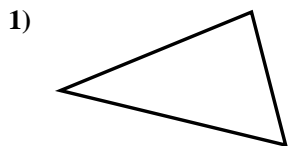


- 1. \_\_\_\_\_
- 2. \_\_\_\_\_
- 3. \_\_\_\_\_
- 4. \_\_\_\_\_
- 5. \_\_\_\_\_
- 6. \_\_\_\_\_
- 7. \_\_\_\_\_
- 8. \_\_\_\_\_
- 9. \_\_\_\_\_
- 10. \_\_\_\_\_
- 11. \_\_\_\_\_
- 12. \_\_\_\_\_
- 13. \_\_\_\_\_
- 14. \_\_\_\_\_
- 15. \_\_\_\_\_



Determina se i triangoli mostrati sono rettangoli oppure no.

**Risposte**



1. no

2. no

3. no

4. si

5. no

6. si

7. si

8. no

9. no

10. no

11. no

12. no

13. no

14. no

15. si