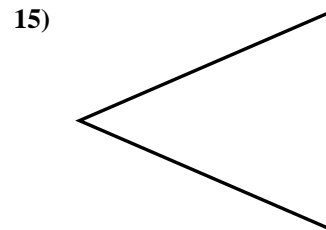
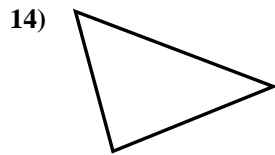
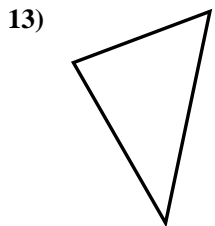
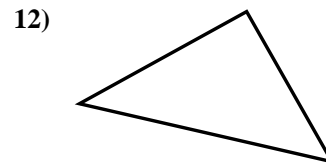
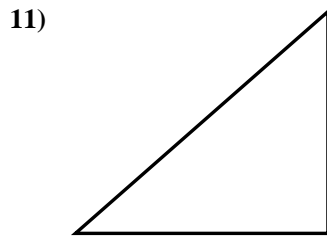
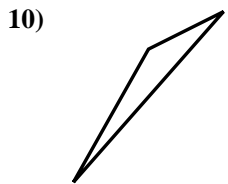
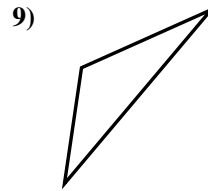
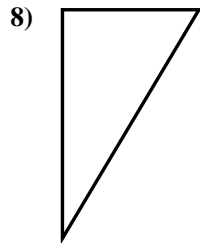
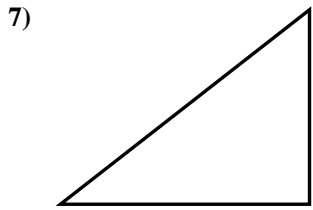
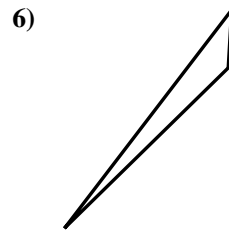
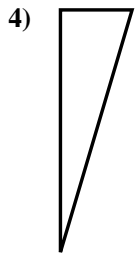
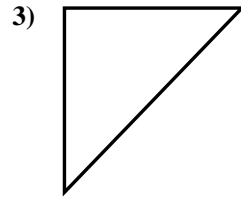
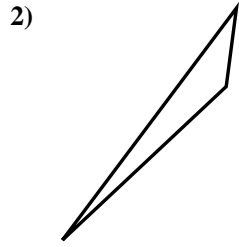
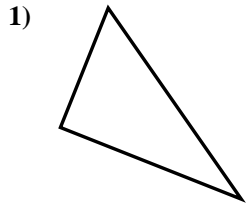




Determina se i triangoli mostrati sono rettangoli oppure no.

Risposte

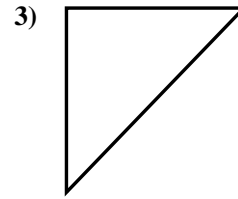
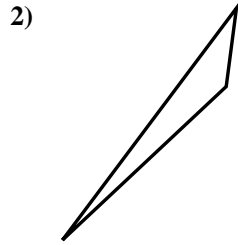
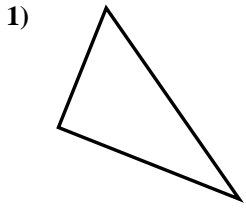


- 1. _____
- 2. _____
- 3. _____
- 4. _____
- 5. _____
- 6. _____
- 7. _____
- 8. _____
- 9. _____
- 10. _____
- 11. _____
- 12. _____
- 13. _____
- 14. _____
- 15. _____

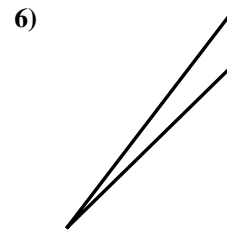
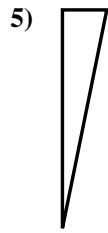
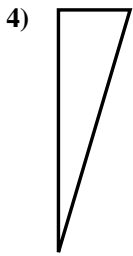


Determina se i triangoli mostrati sono rettangoli oppure no.

Risposte



1. si



2. no

3. si

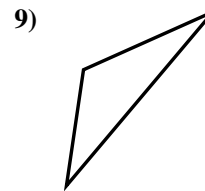
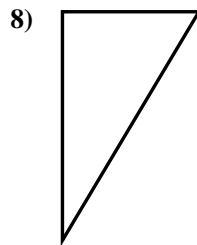
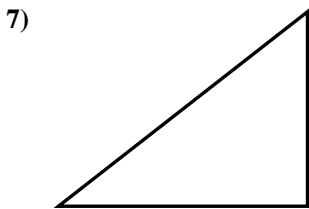
4. si

5. si

6. no

7. si

8. si

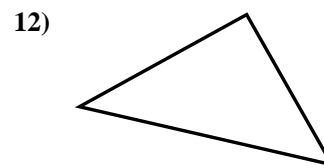
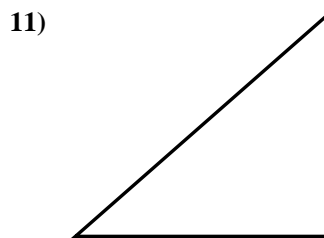
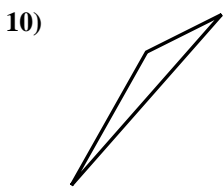


9. no

10. no

11. si

12. si



13. no

14. no

15. no

