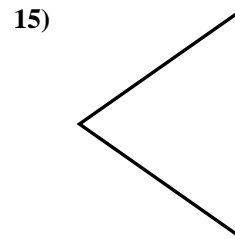
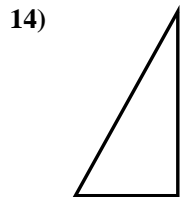
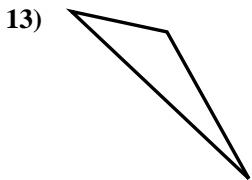
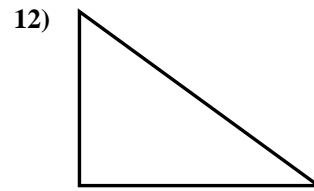
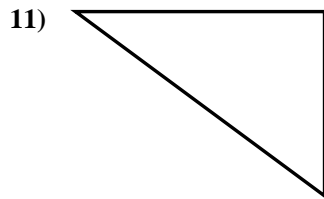
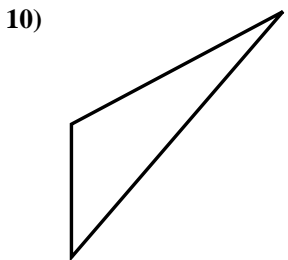
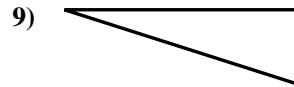
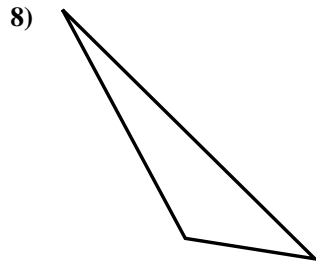
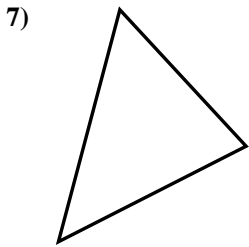
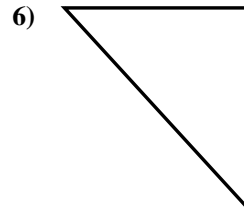
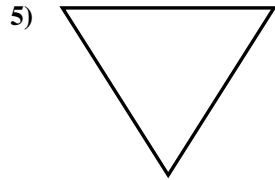
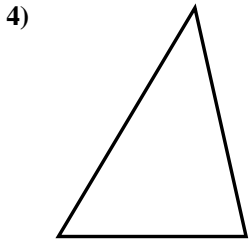
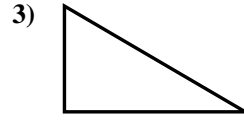
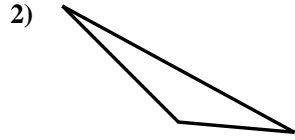
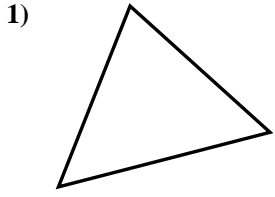




Determina se i triangoli mostrati sono rettangoli oppure no.

Risposte

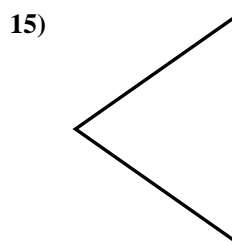
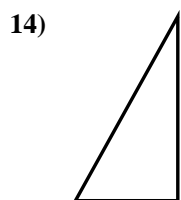
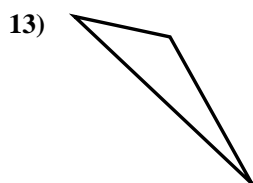
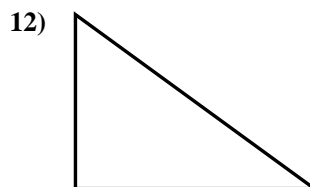
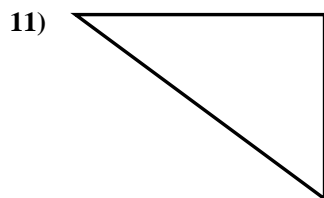
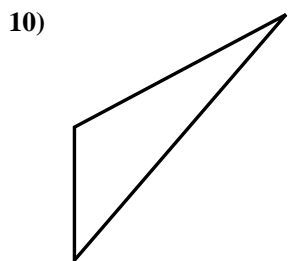
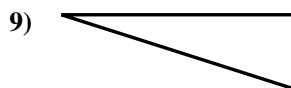
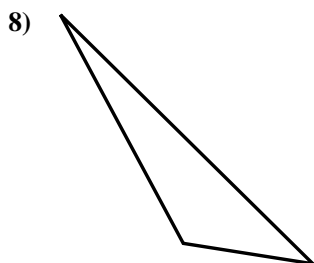
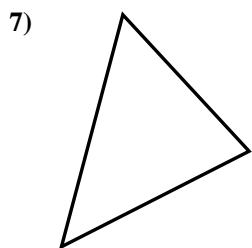
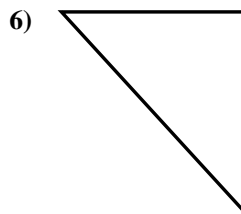
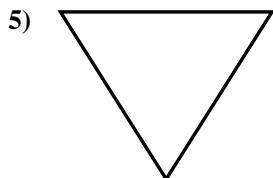
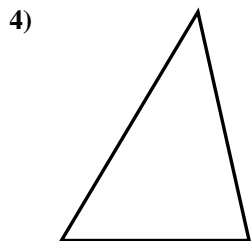
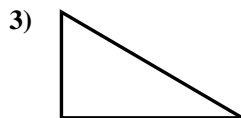
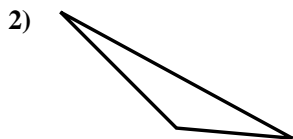
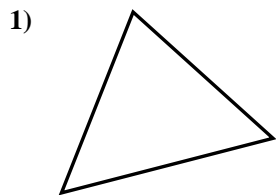


- 1. _____
- 2. _____
- 3. _____
- 4. _____
- 5. _____
- 6. _____
- 7. _____
- 8. _____
- 9. _____
- 10. _____
- 11. _____
- 12. _____
- 13. _____
- 14. _____
- 15. _____



Determina se i triangoli mostrati sono rettangoli oppure no.

Risposte



1. no

2. no

3. si

4. no

5. no

6. si

7. no

8. no

9. si

10. no

11. si

12. si

13. no

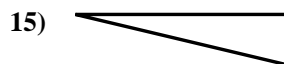
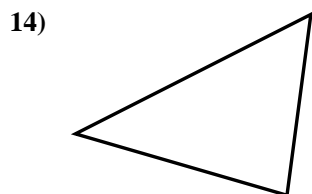
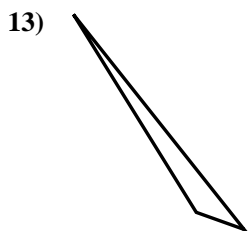
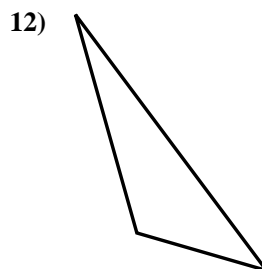
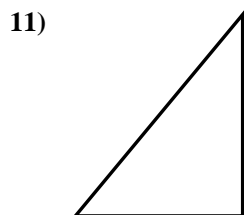
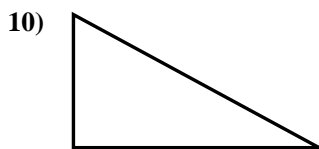
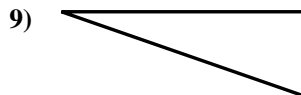
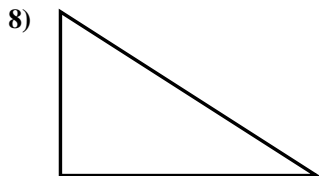
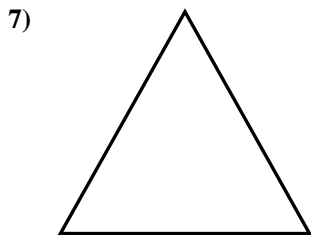
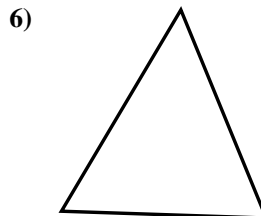

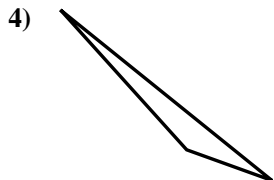
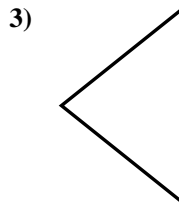
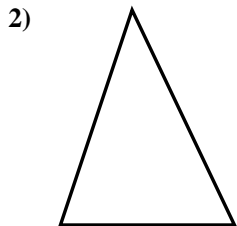
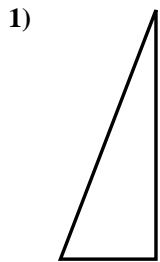
14. si

15. no



Determina se i triangoli mostrati sono rettangoli oppure no.

Risposte

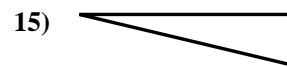
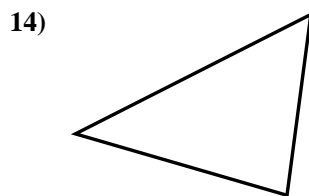
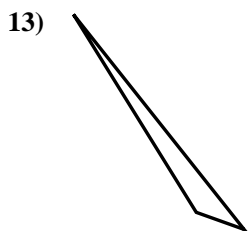
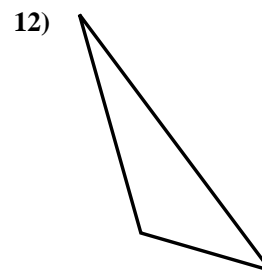
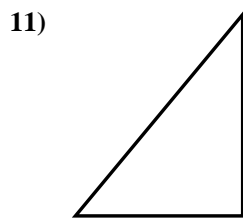
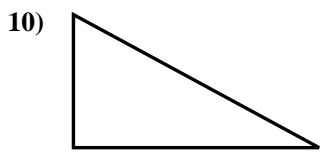
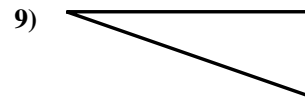
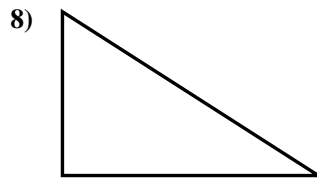
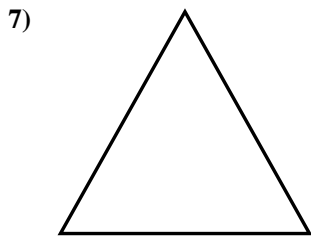
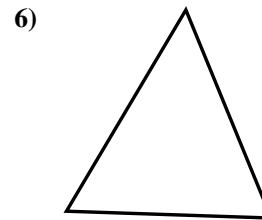
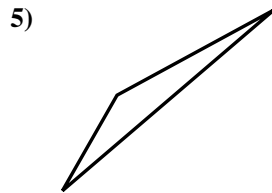

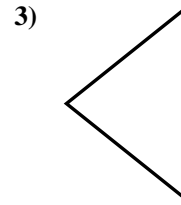
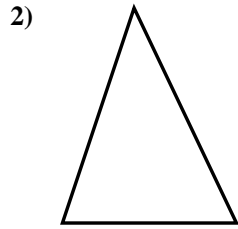
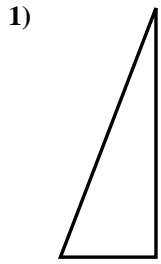


- 1. _____
- 2. _____
- 3. _____
- 4. _____
- 5. _____
- 6. _____
- 7. _____
- 8. _____
- 9. _____
- 10. _____
- 11. _____
- 12. _____
- 13. _____
- 14. _____
- 15. _____



Determina se i triangoli mostrati sono rettangoli oppure no.

Risposte



1. si

2. no

3. no

4. no

5. no

6. no

7. no

8. si

9. si

10. si

11. si

12. no

13. no

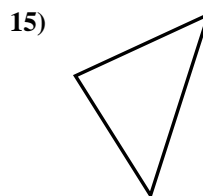

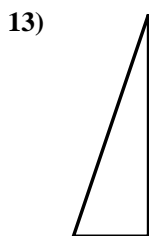
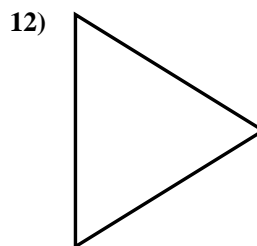
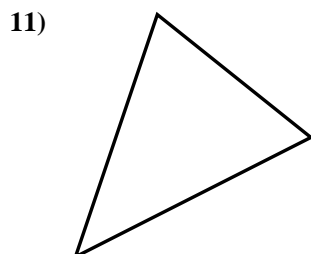
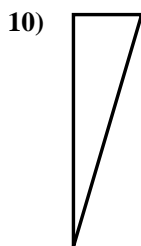
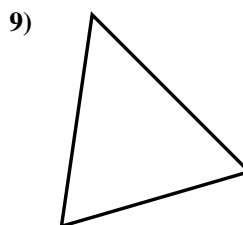
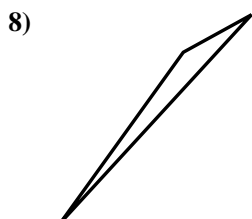
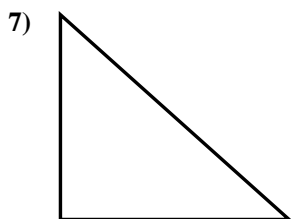
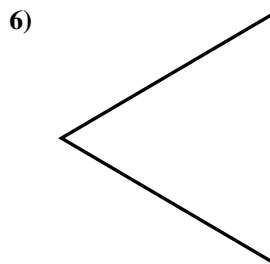
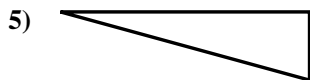
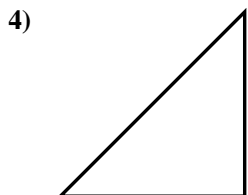
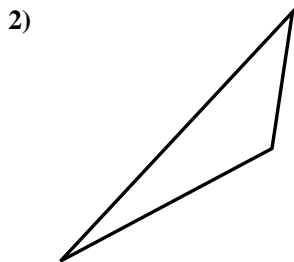
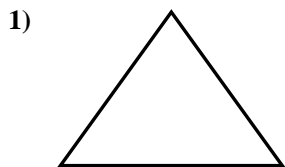
14. no

15. si



Determina se i triangoli mostrati sono rettangoli oppure no.

Risposte

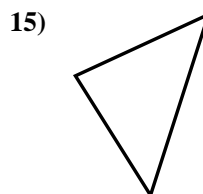

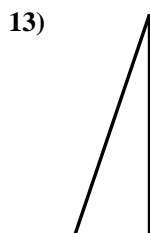
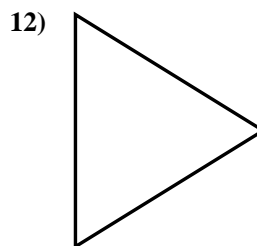
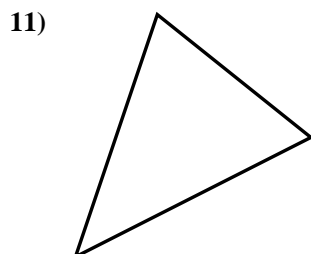
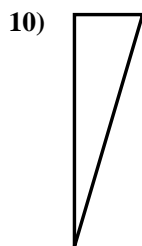
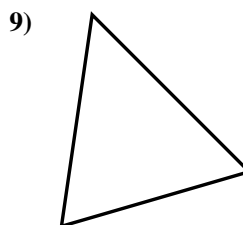
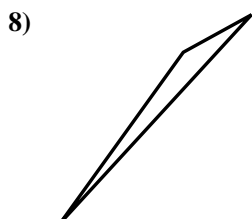
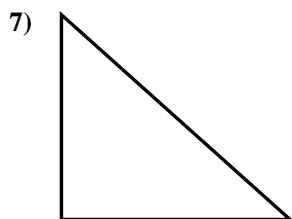
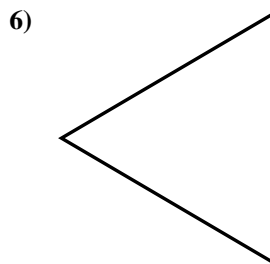
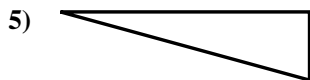
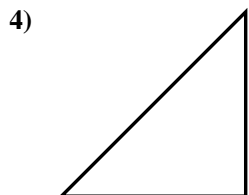
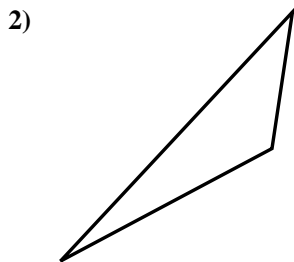
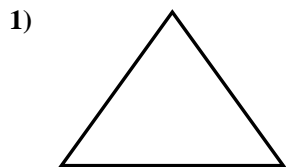


1. _____
2. _____
3. _____
4. _____
5. _____
6. _____
7. _____
8. _____
9. _____
10. _____
11. _____
12. _____
13. _____
14. _____
15. _____



Determina se i triangoli mostrati sono rettangoli oppure no.

Risposte



1. no

2. no

3. si

4. si

5. si

6. no

7. si

8. no

9. no

10. si

11. no

12. no

13. si

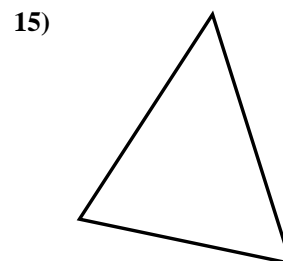
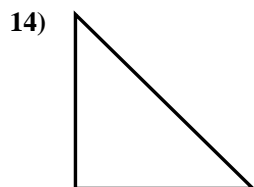
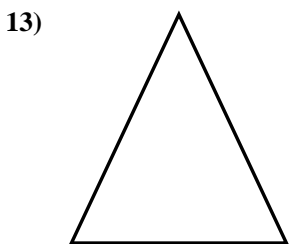
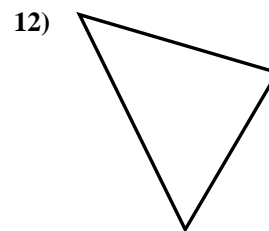
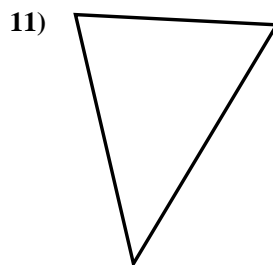
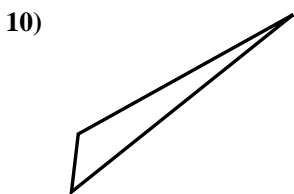
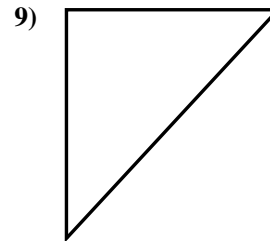
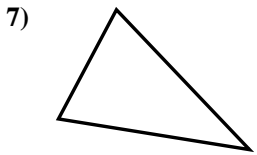
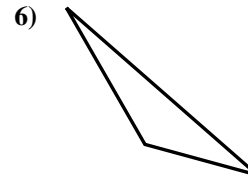
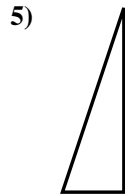
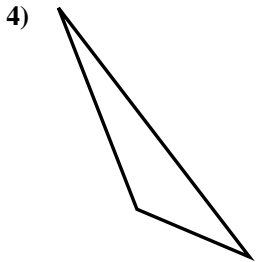
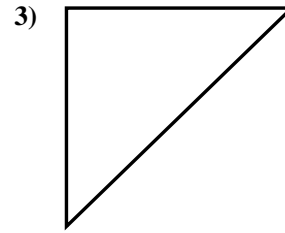
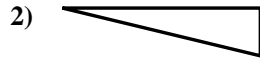
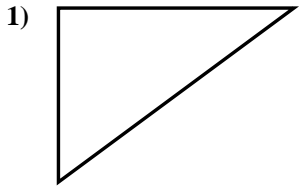
14. no

15. no



Determina se i triangoli mostrati sono rettangoli oppure no.

Risposte

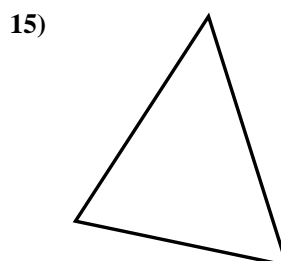
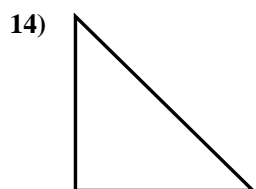
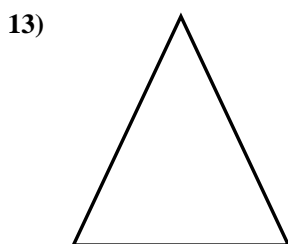
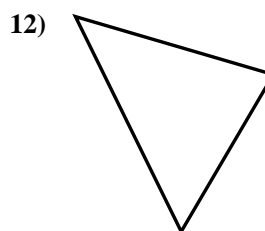
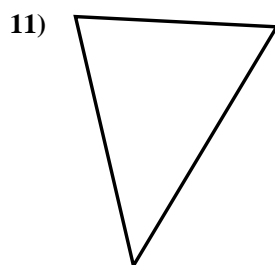
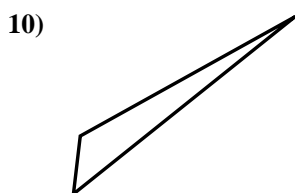
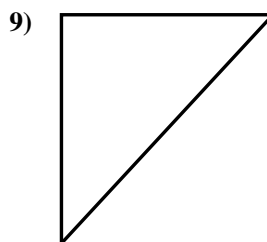
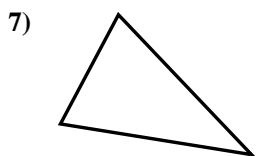
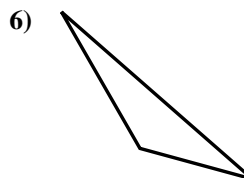
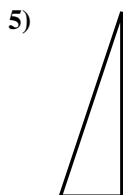
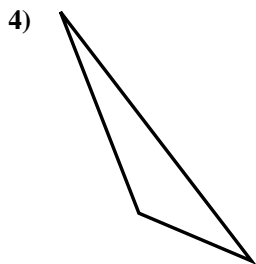
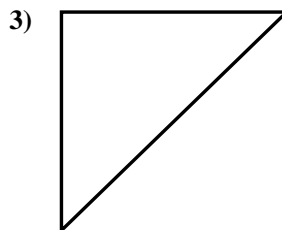
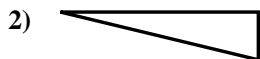
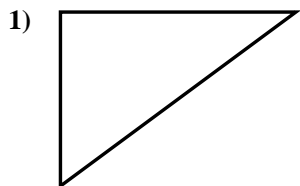


- 1. _____
- 2. _____
- 3. _____
- 4. _____
- 5. _____
- 6. _____
- 7. _____
- 8. _____
- 9. _____
- 10. _____
- 11. _____
- 12. _____
- 13. _____
- 14. _____
- 15. _____



Determina se i triangoli mostrati sono rettangoli oppure no.

Risposte



1. si

2. si

3. si

4. no

5. si

6. no

7. no

8. si

9. si

10. no

11. no

12. no

13. no

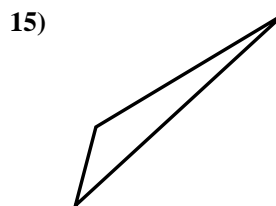
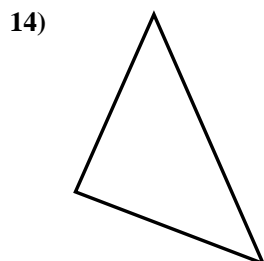
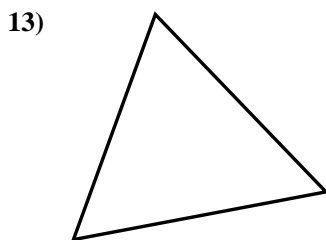
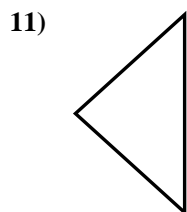
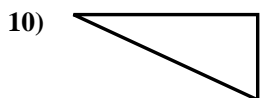
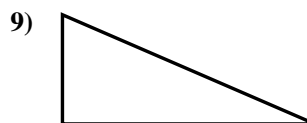
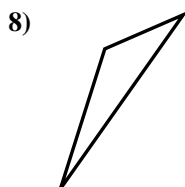

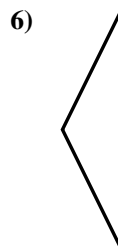

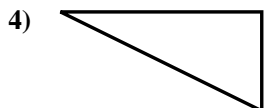
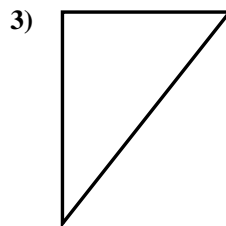
14. si

15. no



Determina se i triangoli mostrati sono rettangoli oppure no.

Risposte

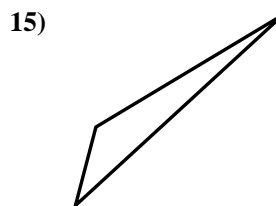
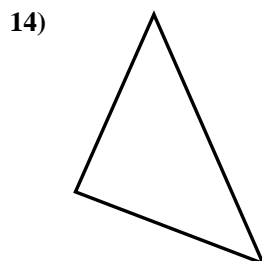
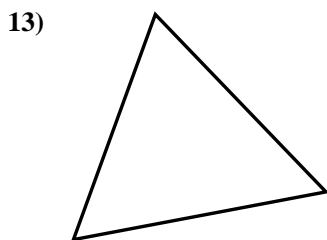
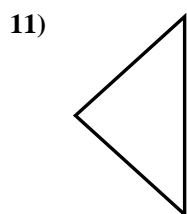
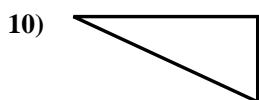
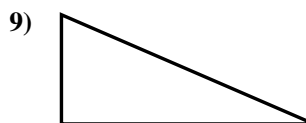
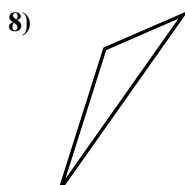

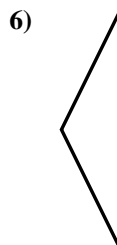

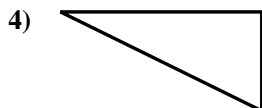
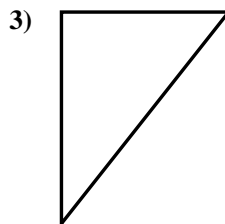



- 1. _____
- 2. _____
- 3. _____
- 4. _____
- 5. _____
- 6. _____
- 7. _____
- 8. _____
- 9. _____
- 10. _____
- 11. _____
- 12. _____
- 13. _____
- 14. _____
- 15. _____



Determina se i triangoli mostrati sono rettangoli oppure no.

Risposte



1. si

2. si

3. si

4. si

5. no

6. no

7. no

8. no

9. si

10. si

11. no

12. si

13. no

14. si

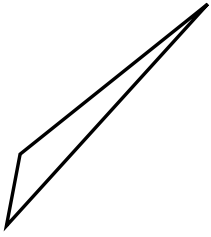
15. no



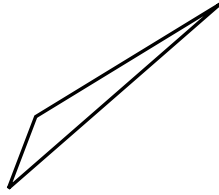
Determina se i triangoli mostrati sono rettangoli oppure no.

Risposte

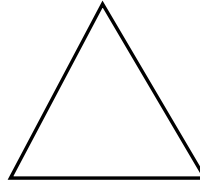
1)



2)



3)



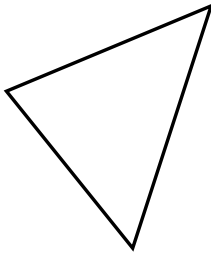
1. _____

2. _____

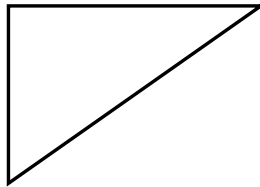
3. _____

4. _____


4)



5)



6)




5. _____

6. _____

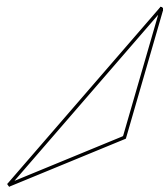
7. _____

8. _____


7)



8)



9)



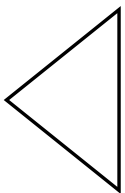
9. _____

10. _____

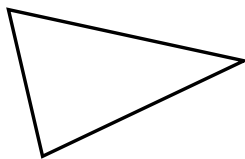
11. _____

12. _____

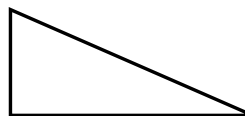
10)



11)



12)

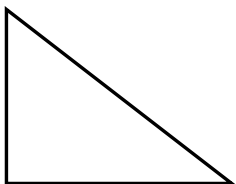


13. _____

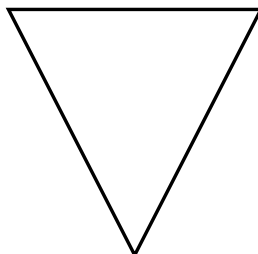
14. _____

15. _____

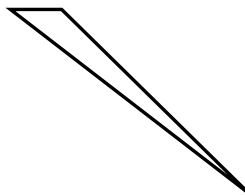
13)



14)



15)

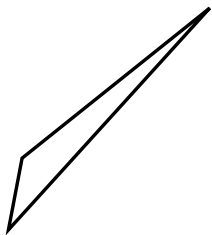




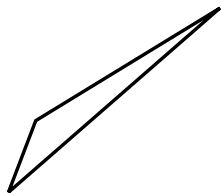
Determina se i triangoli mostrati sono rettangoli oppure no.

Risposte

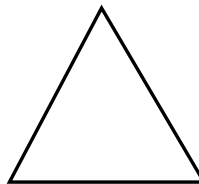
1)



2)

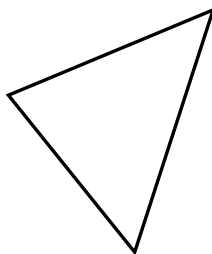


3)

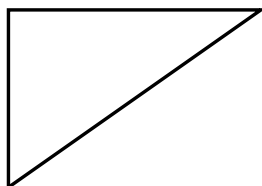


1. no


4)



5)



6)



2. no

3. no

4. no


5. si

6. si

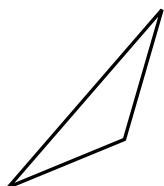
7. no

8. no


7)



8)



9)



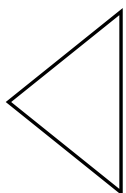
9. si

10. no

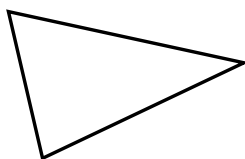
11. no

12. si

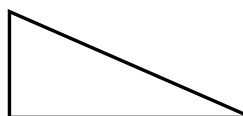
10)



11)



12)

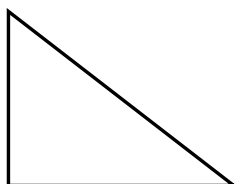


13. si

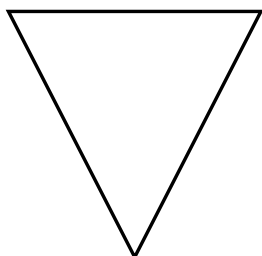
14. no

15. no

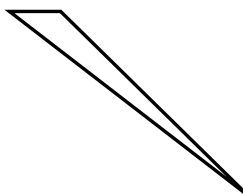
13)



14)



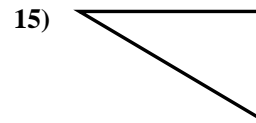
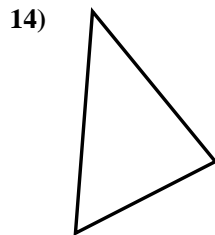
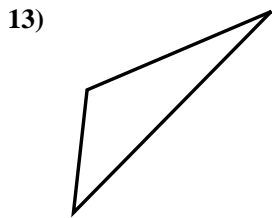
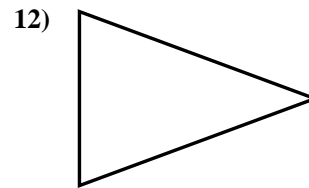
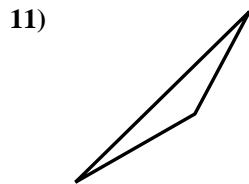
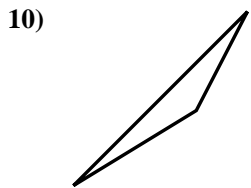
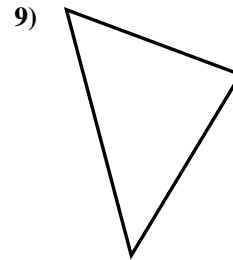
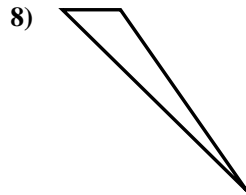
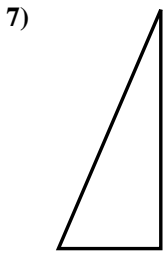
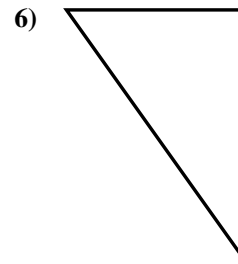
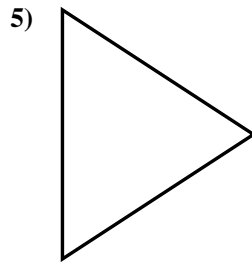
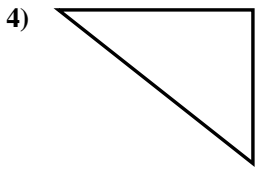
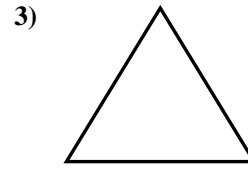
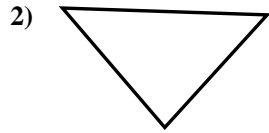
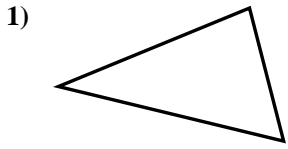
15)





Determina se i triangoli mostrati sono rettangoli oppure no.

Risposte

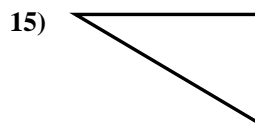
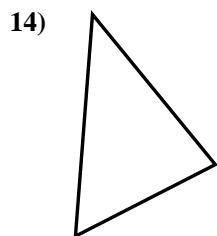
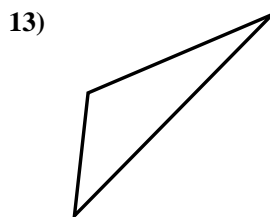
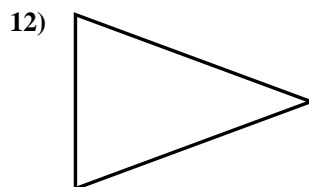
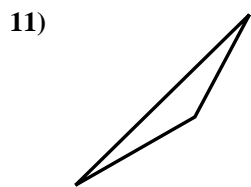
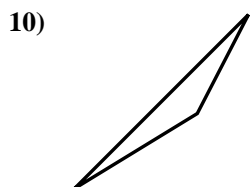
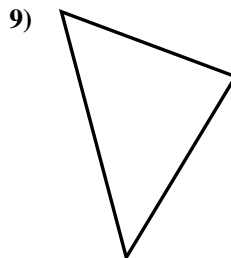
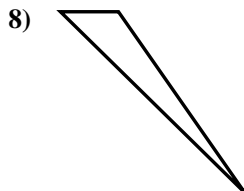
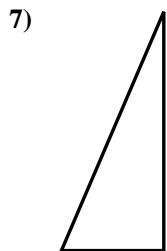
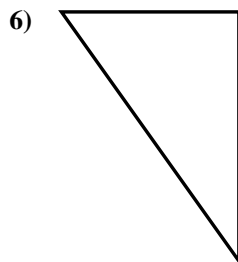
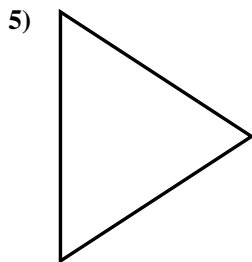
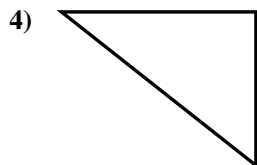
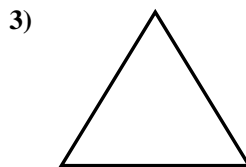
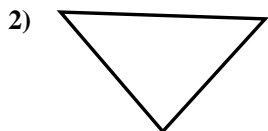
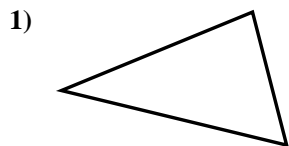


- 1. _____
- 2. _____
- 3. _____
- 4. _____
- 5. _____
- 6. _____
- 7. _____
- 8. _____
- 9. _____
- 10. _____
- 11. _____
- 12. _____
- 13. _____
- 14. _____
- 15. _____



Determina se i triangoli mostrati sono rettangoli oppure no.

Risposte



1. no

2. no

3. no

4. si

5. no

6. si

7. si

8. no

9. no

10. no

11. no

12. no

13. no

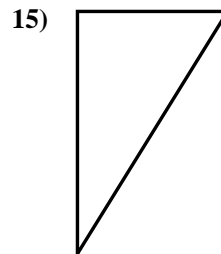
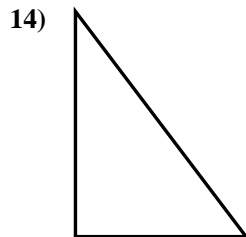
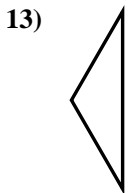
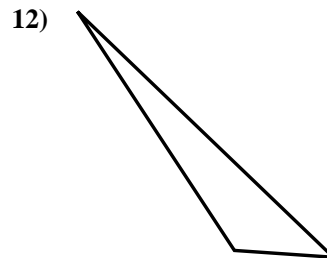
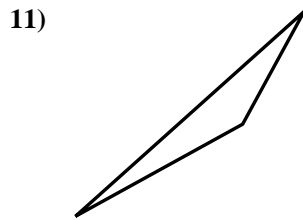
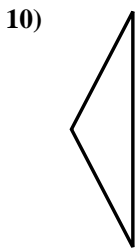
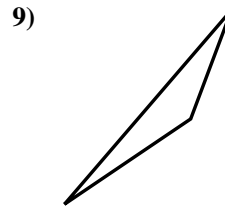
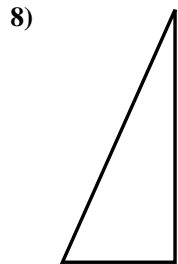

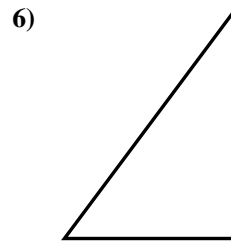
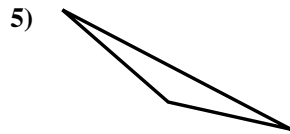
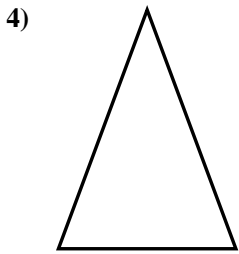
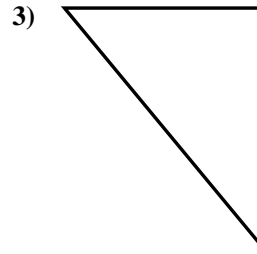
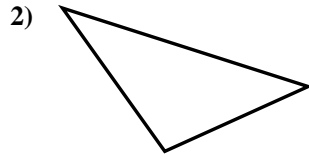
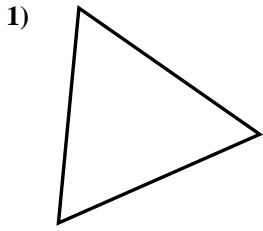
14. no

15. si



Determina se i triangoli mostrati sono rettangoli oppure no.

Risposte

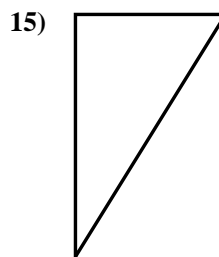
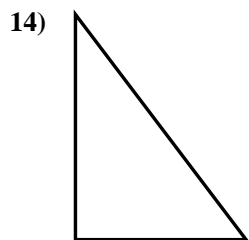
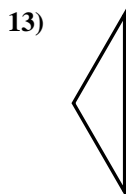
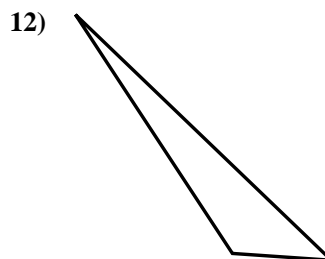

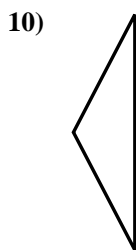
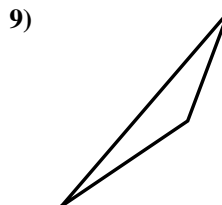
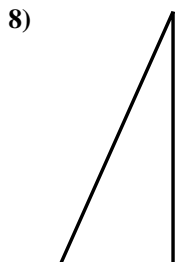

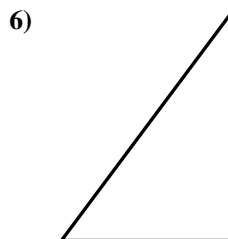
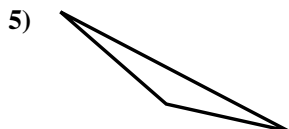
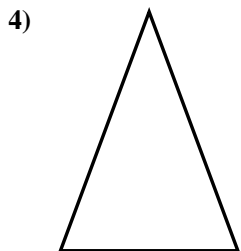
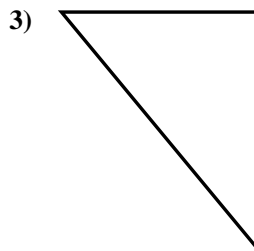
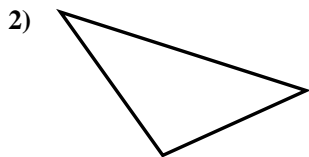
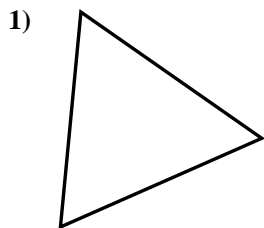


- 1. _____
- 2. _____
- 3. _____
- 4. _____
- 5. _____
- 6. _____
- 7. _____
- 8. _____
- 9. _____
- 10. _____
- 11. _____
- 12. _____
- 13. _____
- 14. _____
- 15. _____



Determina se i triangoli mostrati sono rettangoli oppure no.

Risposte



1. no

2. no

3. si

4. no

5. no

6. si

7. no

8. si

9. no

10. no

11. no

12. no

13. no

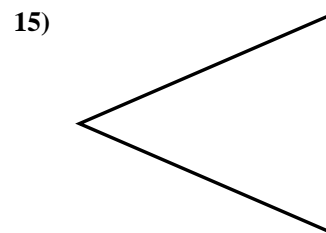
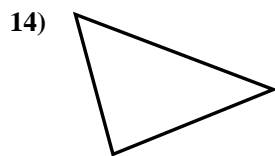
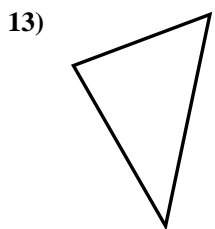
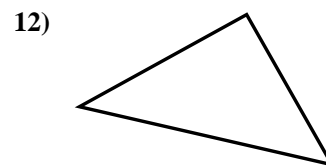
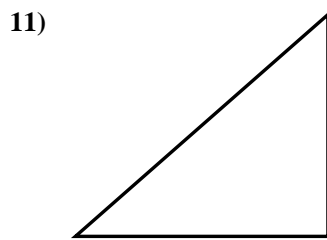
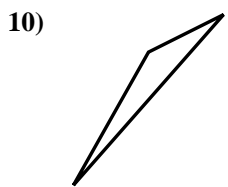
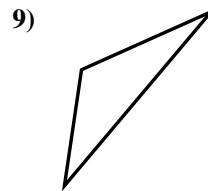
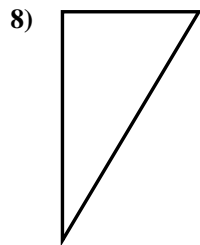
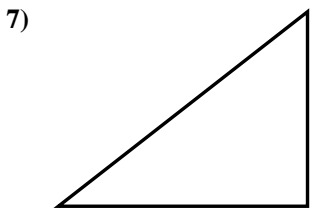
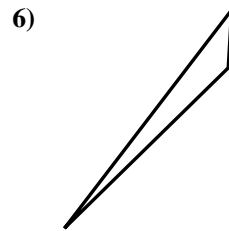
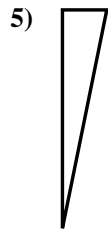
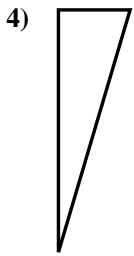
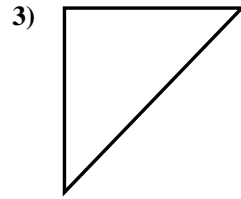
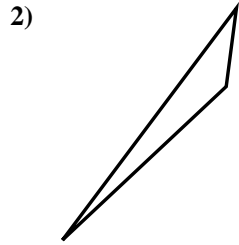
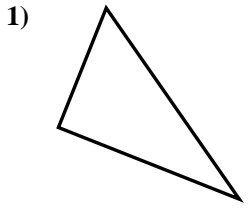
14. si

15. si



Determina se i triangoli mostrati sono rettangoli oppure no.

Risposte

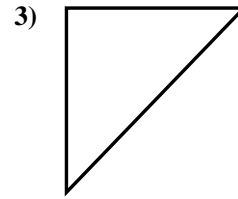
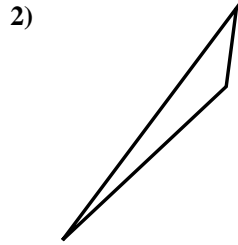
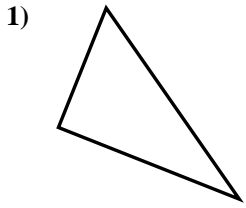


- 1. _____
- 2. _____
- 3. _____
- 4. _____
- 5. _____
- 6. _____
- 7. _____
- 8. _____
- 9. _____
- 10. _____
- 11. _____
- 12. _____
- 13. _____
- 14. _____
- 15. _____

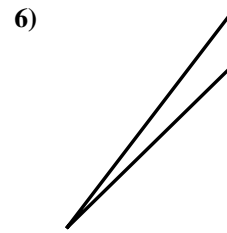
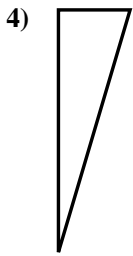


Determina se i triangoli mostrati sono rettangoli oppure no.

Risposte



1. si



2. no

3. si

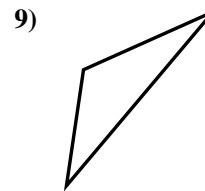
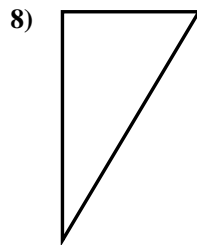
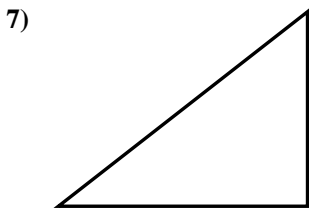
4. si

5. si

6. no

7. si

8. si

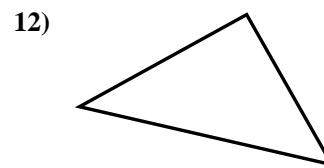
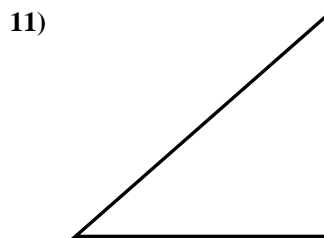
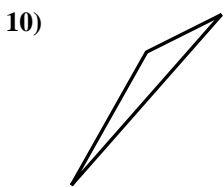


9. no

10. no

11. si

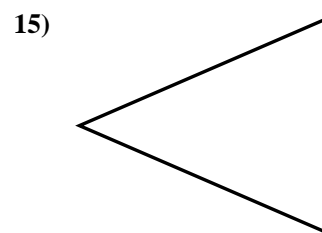
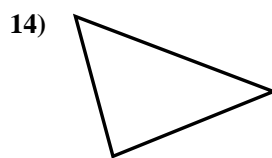
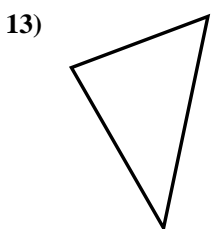
12. si



13. no

14. no

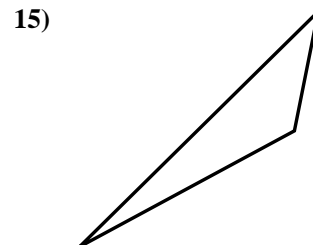
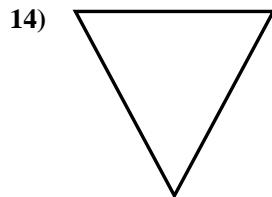
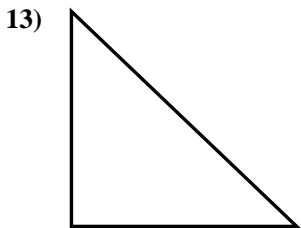
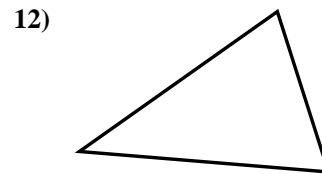
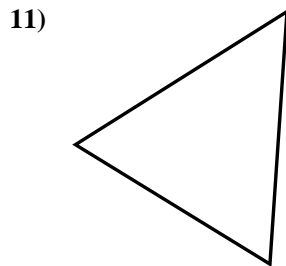
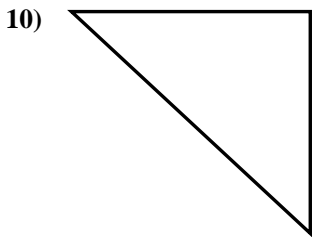
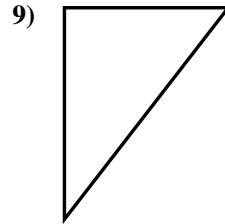
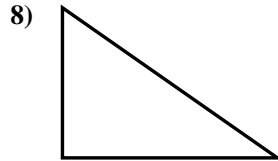
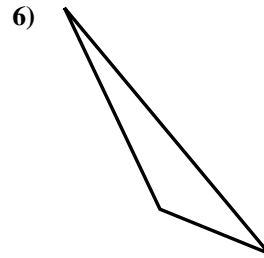
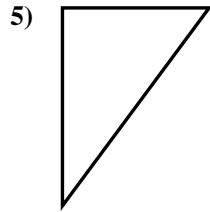
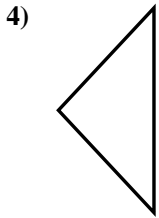
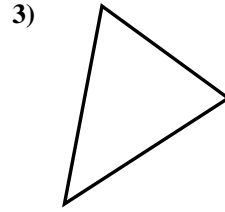
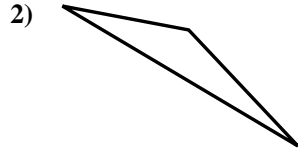
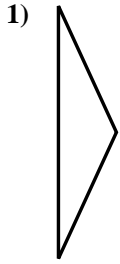
15. no





Determina se i triangoli mostrati sono rettangoli oppure no.

Risposte

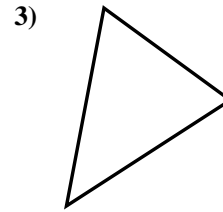
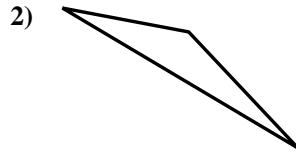
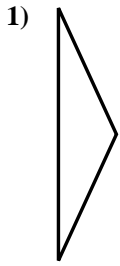


- 1. _____
- 2. _____
- 3. _____
- 4. _____
- 5. _____
- 6. _____
- 7. _____
- 8. _____
- 9. _____
- 10. _____
- 11. _____
- 12. _____
- 13. _____
- 14. _____
- 15. _____

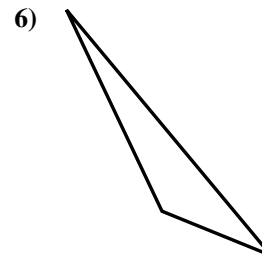
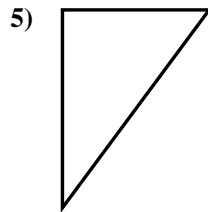
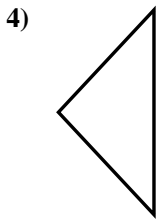


Determina se i triangoli mostrati sono rettangoli oppure no.

Risposte



1. no



2. no

3. no

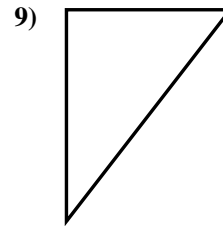
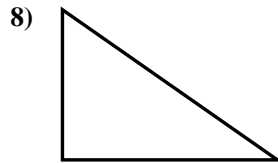
4. no

5. si

6. no

7. si

8. si

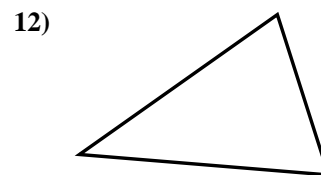
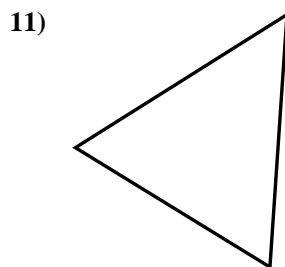
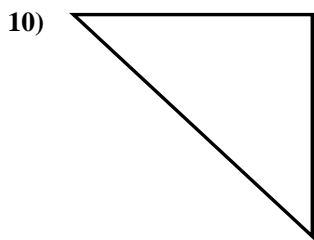


9. si

10. si

11. no

12. no



13. si

14. no

15. no

