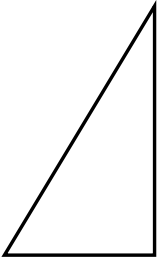




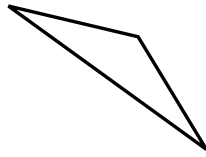
Determina se i triangoli mostrati sono rettangoli oppure no.

Risposte

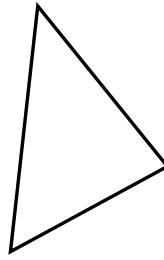
1)



2)



3)



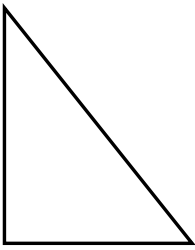
1. _____

2. _____

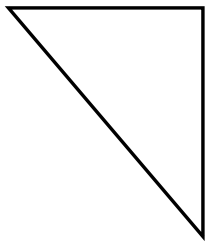
3. _____

4. _____

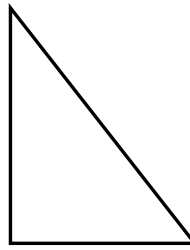
4)



5)



6)



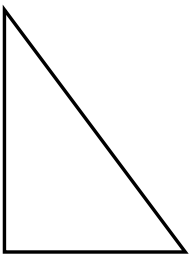
5. _____

6. _____

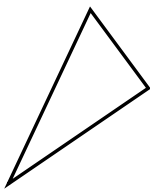
7. _____

8. _____

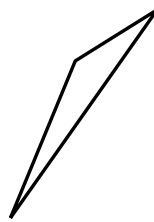
7)



8)



9)



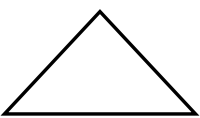
9. _____

10. _____

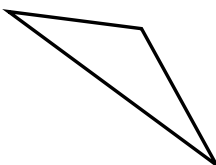
11. _____

12. _____

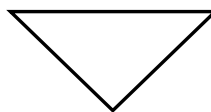
10)



11)



12)

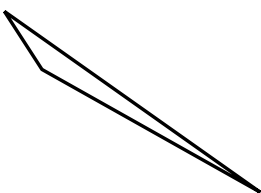


13. _____


14. _____

15. _____

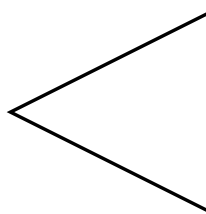
13)



14)



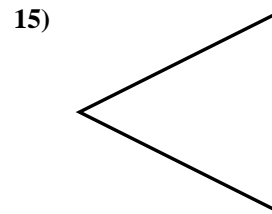
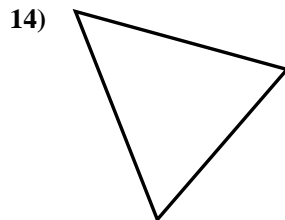

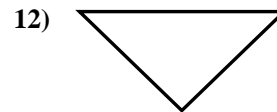
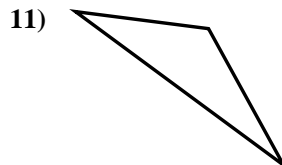
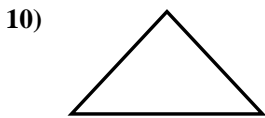
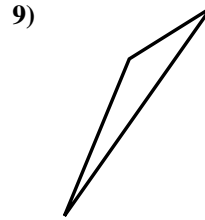
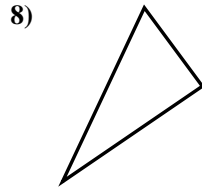
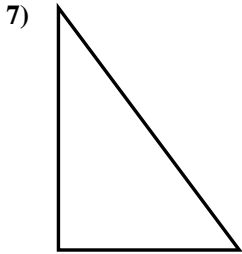
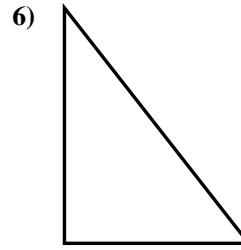
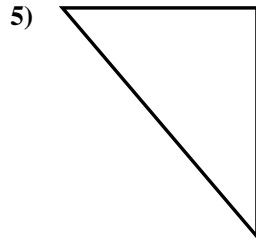
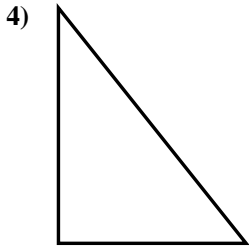
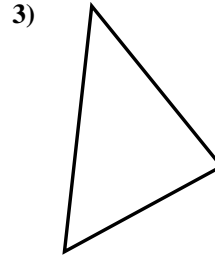
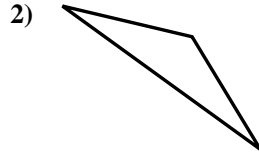
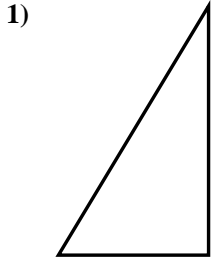
15)





Determina se i triangoli mostrati sono rettangoli oppure no.

Risposte



1. si

2. no

3. no

4. si

5. si

6. si

7. si

8. si

9. no

10. no

11. no

12. si

13. no

14. no

15. no