



Determina se le figure rappresentate sono 'Triangolo', 'Quadrato', 'Rettangolo', 'Esagono' o 'Altro'.

**Risposte**

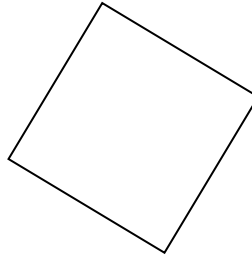
1)



2)



3)



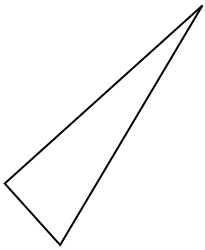
1. \_\_\_\_\_

2. \_\_\_\_\_

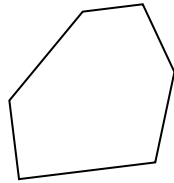
3. \_\_\_\_\_

4. \_\_\_\_\_

4)



5)



6)



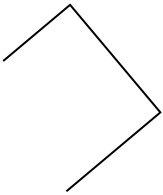
5. \_\_\_\_\_

6. \_\_\_\_\_


7. \_\_\_\_\_

8. \_\_\_\_\_

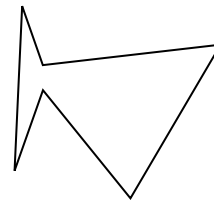
7)



8)



9)



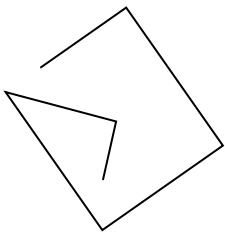
9. \_\_\_\_\_

10. \_\_\_\_\_

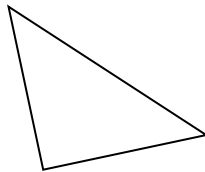
11. \_\_\_\_\_

12. \_\_\_\_\_

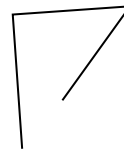
10)



11)



12)

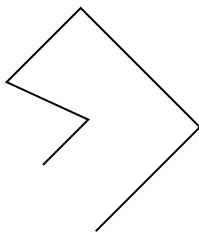


13. \_\_\_\_\_

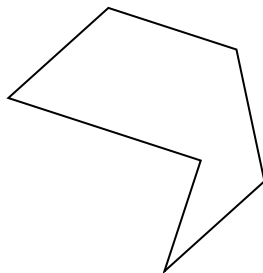
14. \_\_\_\_\_

15. \_\_\_\_\_

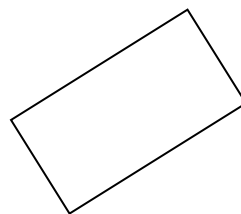
13)



14)



15)



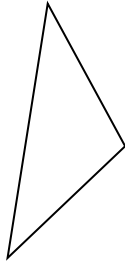


Determina se le figure rappresentate sono 'Triangolo', 'Quadrato', 'Rettangolo', 'Esagono' o 'Altro'.

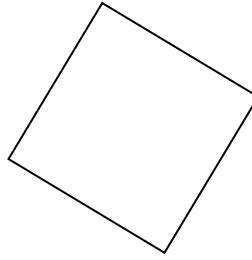
1)



2)



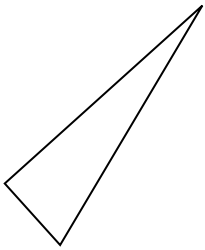
3)



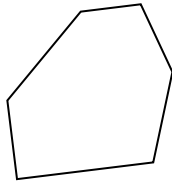
1.

**triangle**

4)



5)



6)



2.

**triangle**

3.

**square**

4.

**triangle**

5.

**Esagono**

6.

**Altro**

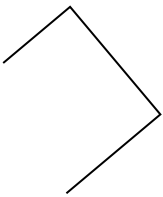
7.

**Altro**


8.

**Altro**

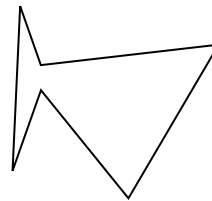
7)



8)



9)



9.

**Esagono**

10.

**Altro**

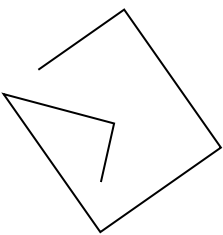
11.

**triangle**

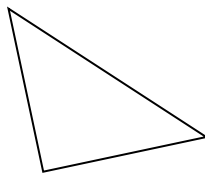
12.

**Altro**

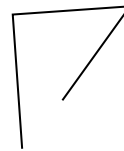
10)



11)



12)



13.

**Altro**

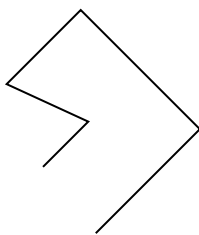
14.

**Esagono**

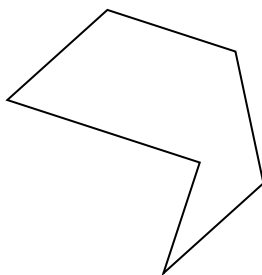
15.

**rectangle**

13)



14)



15)

