



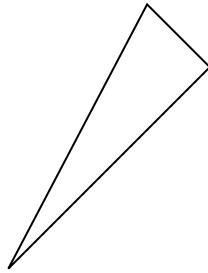
Determina se le figure rappresentate sono 'Triangolo', 'Quadrato', 'Rettangolo', 'Esagono' o 'Altro'.

Risposte

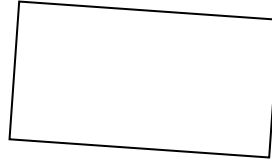
1)



2)



3)



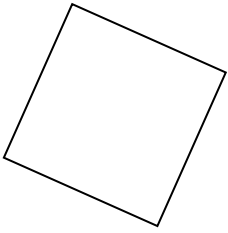
1. _____

2. _____

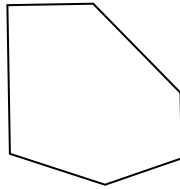
3. _____

4. _____

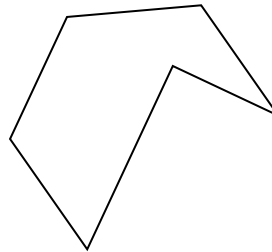
4)



5)



6)



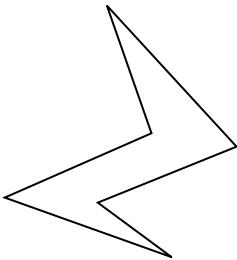
5. _____

6. _____

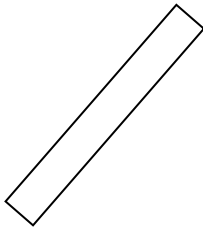
7. _____

8. _____

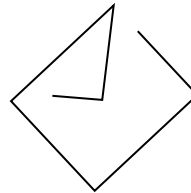
7)



8)



9)



9. _____

10. _____

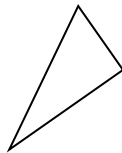
11. _____

12. _____

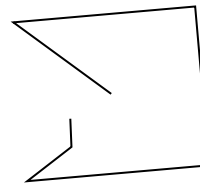
10)



11)



12)




13. _____


14. _____

15. _____

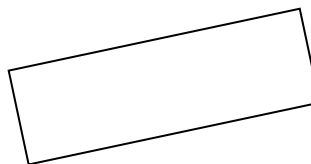
13)



14)



15)



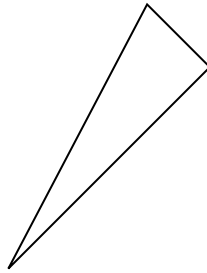


Determina se le figure rappresentate sono 'Triangolo', 'Quadrato', 'Rettangolo', 'Esagono' o 'Altro'.

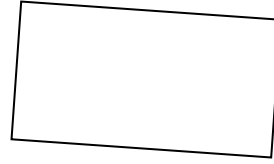
1)



2)



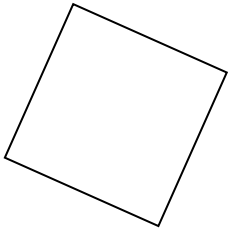
3)



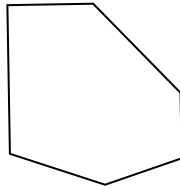
1.

Altro

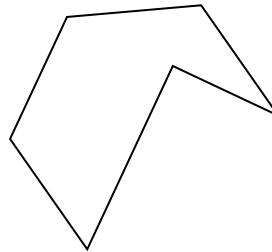
4)



5)



6)



2.

triangle

3.

rectangle

4.

square

5.

Esagono

6.

Esagono

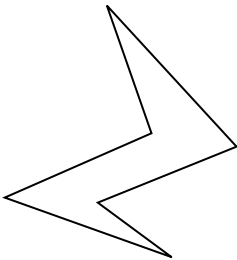
7.

Esagono

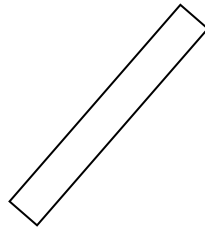
8.

rectangle

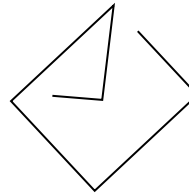
7)



8)



9)



9.

Altro

10.

triangle

11.

triangle

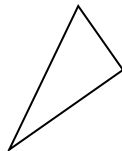
12.

Altro

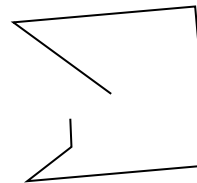
10)



11)



12)



13.

Altro


14.

triangle


15.

rectangle

13)



14)



15)

