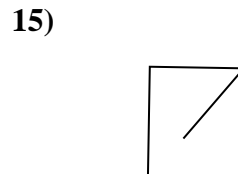
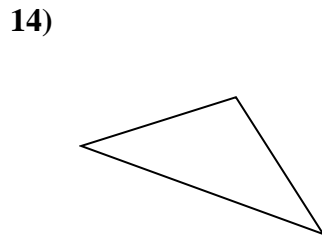
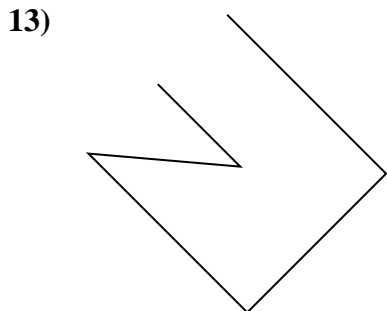
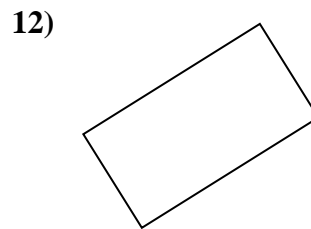
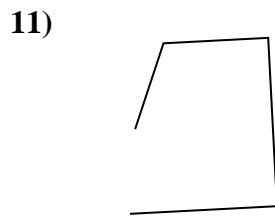
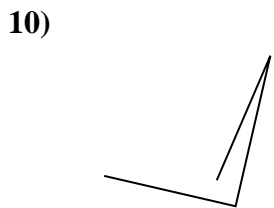

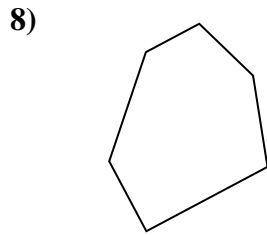
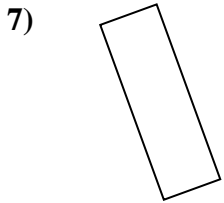
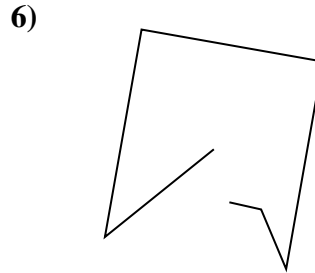
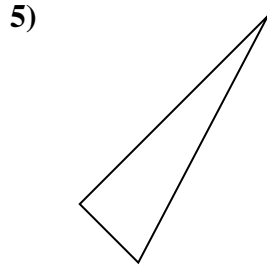
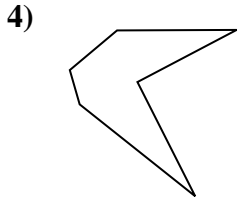
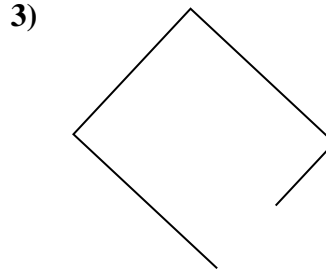
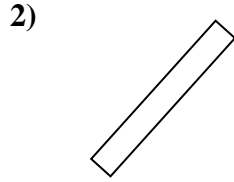
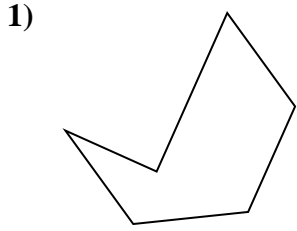




Determina se le figure rappresentate sono 'Triangolo', 'Quadrato', 'Rettangolo', 'Esagono' o 'Altro'.

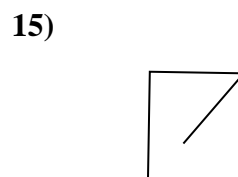
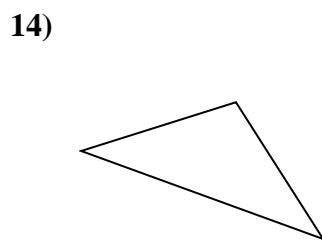
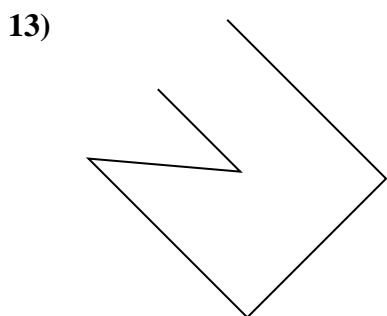
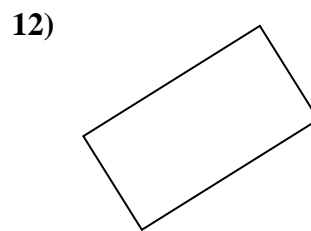
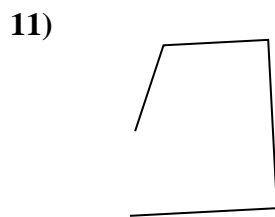
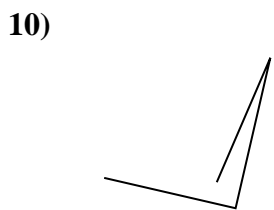

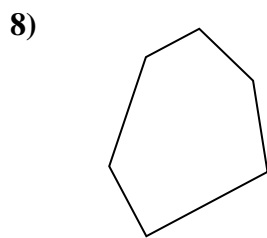
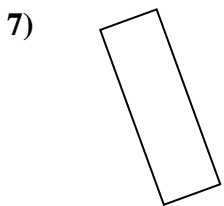
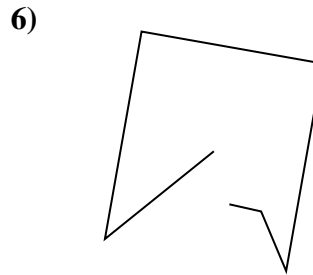
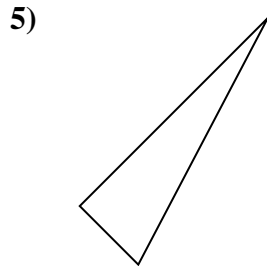
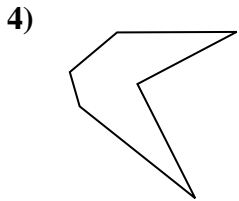
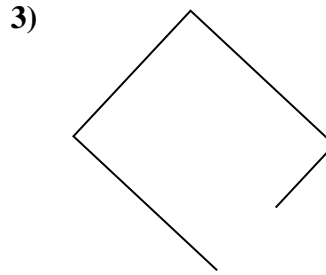
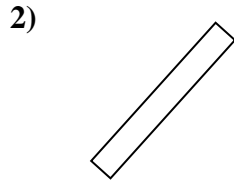
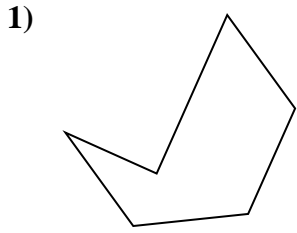
**Risposte**



1. \_\_\_\_\_
2. \_\_\_\_\_
3. \_\_\_\_\_
4. \_\_\_\_\_
5. \_\_\_\_\_
6. \_\_\_\_\_
7. \_\_\_\_\_
8. \_\_\_\_\_
9. \_\_\_\_\_
10. \_\_\_\_\_
11. \_\_\_\_\_
12. \_\_\_\_\_
13. \_\_\_\_\_
14. \_\_\_\_\_
15. \_\_\_\_\_



Determina se le figure rappresentate sono 'Triangolo', 'Quadrato', 'Rettangolo', 'Esagono' o 'Altro'.



**Risposte**

1. Esagono

2. rectangle

3. Altro

4. Esagono

5. triangle

6. Altro

7. rectangle

8. Esagono

9. triangle

10. Altro

11. Altro

12. rectangle

13. Altro

14. triangle

15. Altro