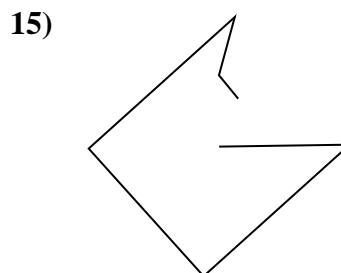
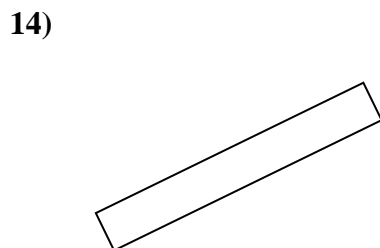
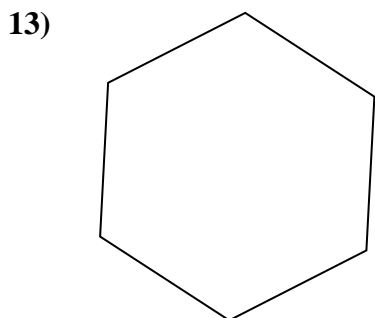
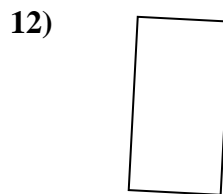
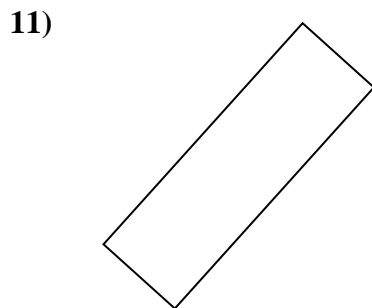
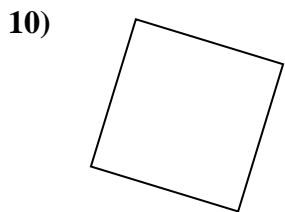
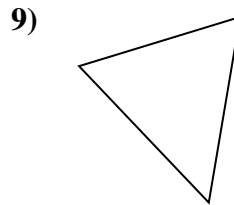
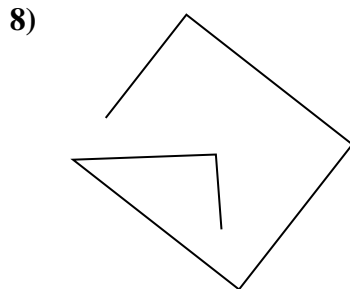
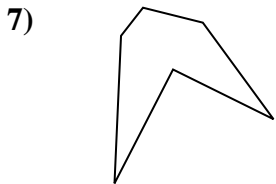
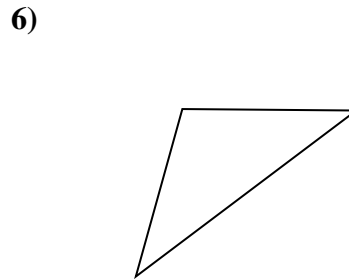
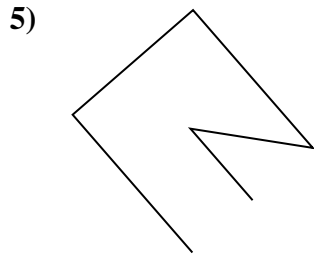
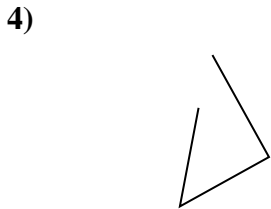
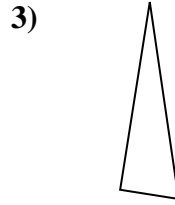






Determina se le figure rappresentate sono 'Triangolo', 'Quadrato', 'Rettangolo', 'Esagono' o 'Altro'.

**Risposte**



- 1. \_\_\_\_\_
- 2. \_\_\_\_\_
- 3. \_\_\_\_\_
- 4. \_\_\_\_\_
- 5. \_\_\_\_\_
- 6. \_\_\_\_\_
- 7. \_\_\_\_\_
- 8. \_\_\_\_\_
- 9. \_\_\_\_\_
- 10. \_\_\_\_\_
- 11. \_\_\_\_\_
- 12. \_\_\_\_\_
- 13. \_\_\_\_\_
- 14. \_\_\_\_\_
- 15. \_\_\_\_\_

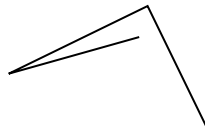


Determina se le figure rappresentate sono 'Triangolo', 'Quadrato', 'Rettangolo', 'Esagono' o 'Altro'.

1)



2)



3)



1.

**Altro**

2.

**Altro**

3.

**triangle**

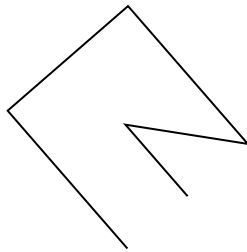
4.

**Altro**

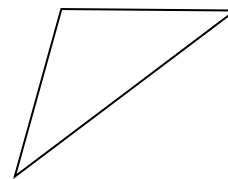
4)



5)



6)



5.

**Altro**

6.

**triangle**

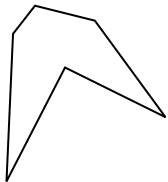
7.

**Esagono**

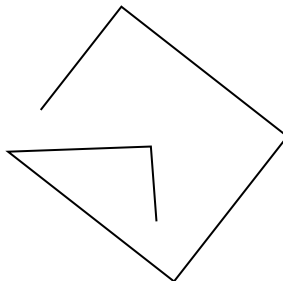
8.

**Altro**


7)



8)



9)



9.

**triangle**

10.

**square**


11.

**rectangle**

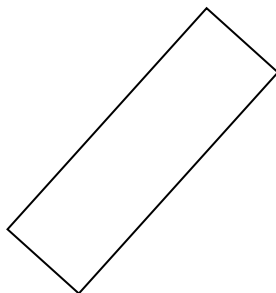
12.

**rectangle**

10)



11)



12)



13.

**Esagono**

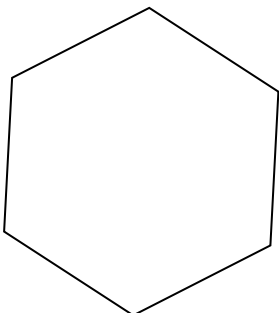
14.

**rectangle**

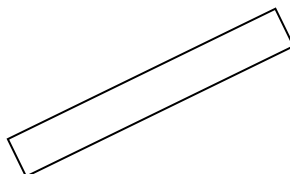
15.

**Altro**

13)



14)



15)

