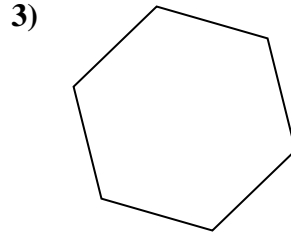
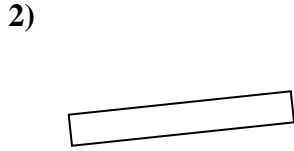
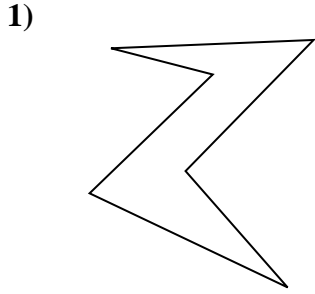


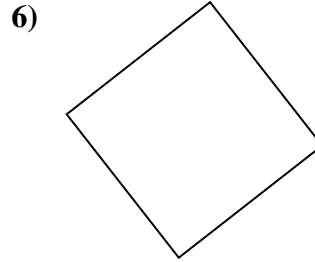
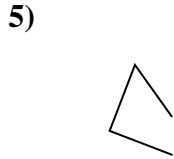
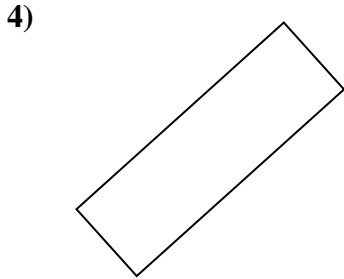


Determina se le figure rappresentate sono 'Triangolo', 'Quadrato', 'Rettangolo', 'Esagono' o 'Altro'.


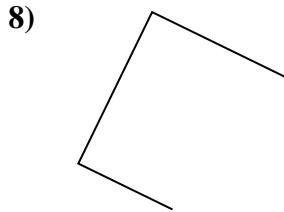
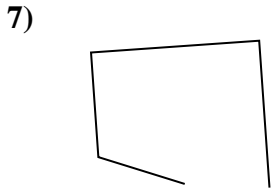
**Risposte**



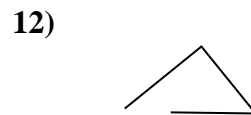
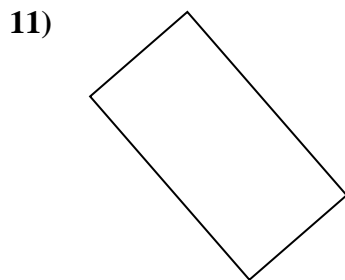
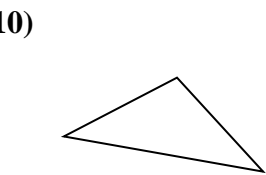
1. \_\_\_\_\_



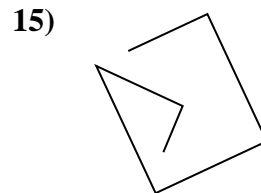
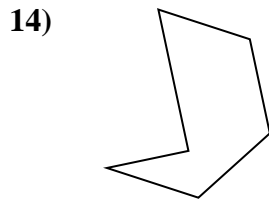
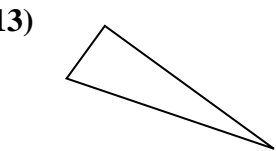
2. \_\_\_\_\_



3. \_\_\_\_\_



4. \_\_\_\_\_



5. \_\_\_\_\_

6. \_\_\_\_\_

7. \_\_\_\_\_

8. \_\_\_\_\_

9. \_\_\_\_\_

10. \_\_\_\_\_

11. \_\_\_\_\_

12. \_\_\_\_\_

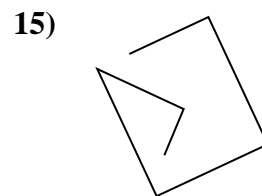
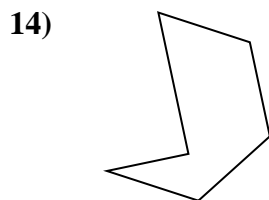
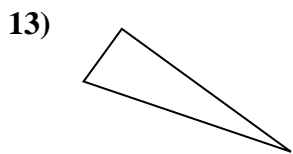
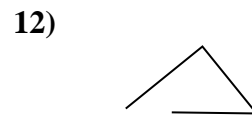
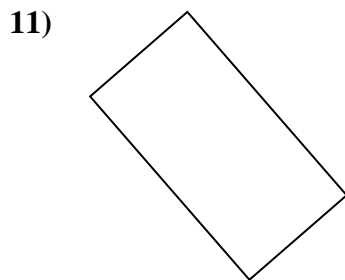
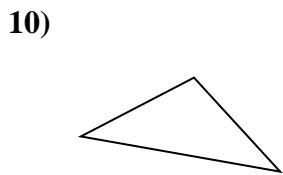
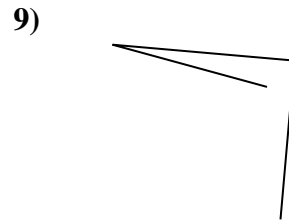
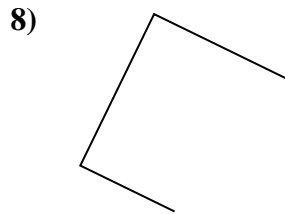
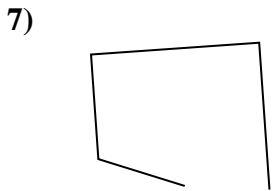
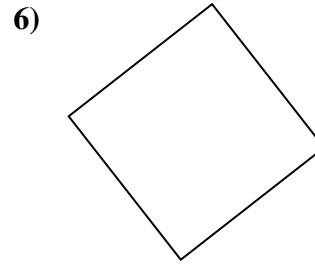
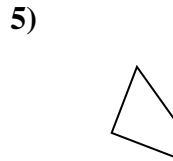
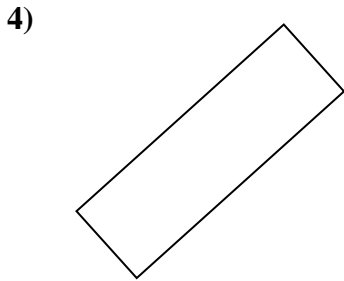
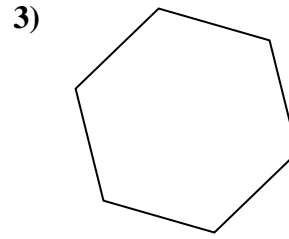

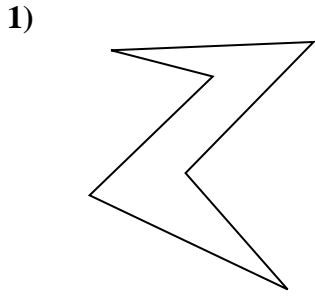
13. \_\_\_\_\_

14. \_\_\_\_\_

15. \_\_\_\_\_



Determina se le figure rappresentate sono 'Triangolo', 'Quadrato', 'Rettangolo', 'Esagono' o 'Altro'.



Risposte

1. Esagono

2. rectangle

3. Esagono

4. rectangle

5. Altro

6. square

7. Altro

8. Altro

9. Altro

10. triangle

11. rectangle

12. Altro

13. triangle

14. Esagono

15. Altro