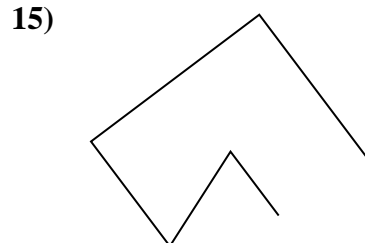
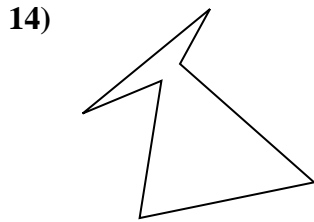
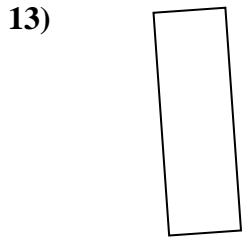
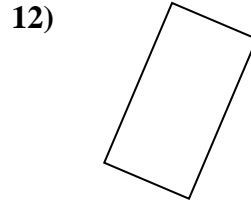
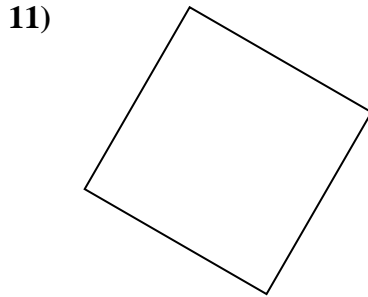
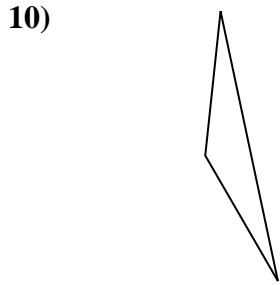

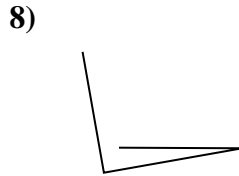

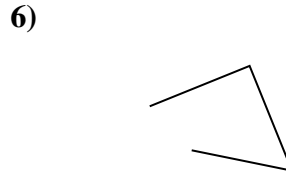
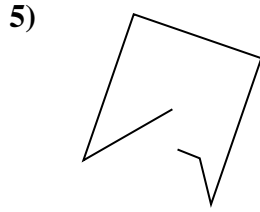
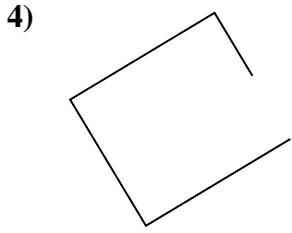

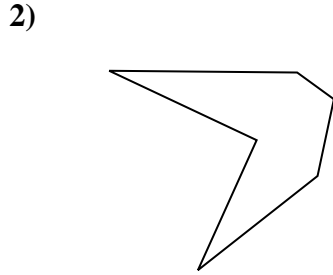
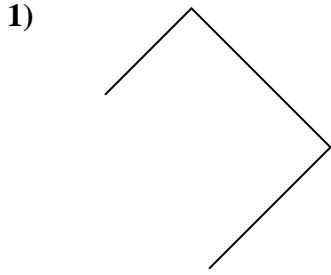




Determina se le figure rappresentate sono 'Triangolo', 'Quadrato', 'Rettangolo', 'Esagono' o 'Altro'.

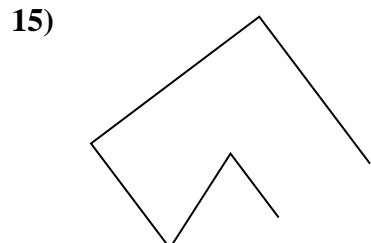
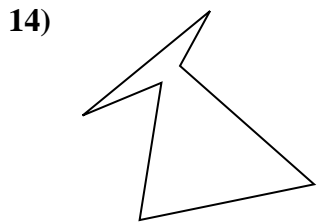
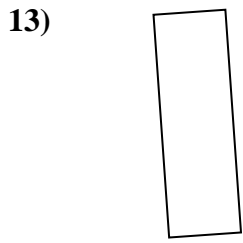
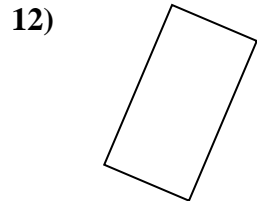
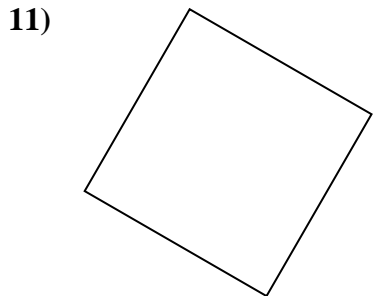
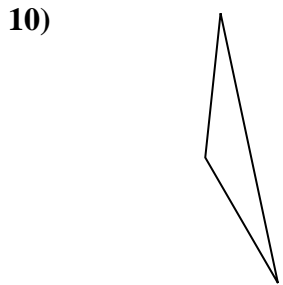

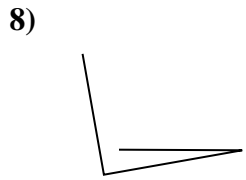

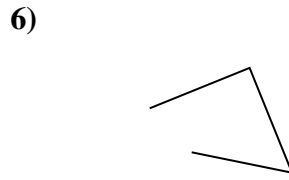
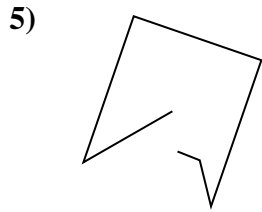
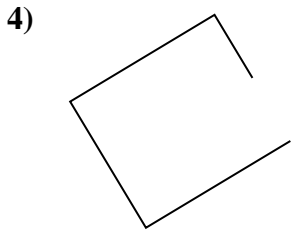

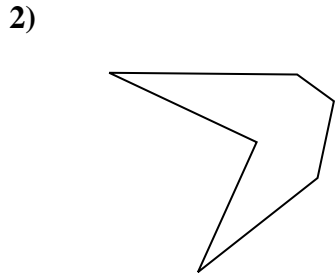
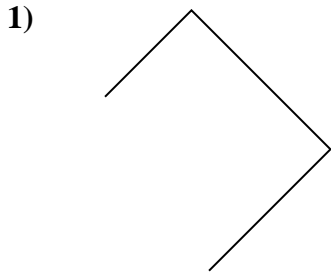
**Risposte**



- 1. \_\_\_\_\_
- 2. \_\_\_\_\_
- 3. \_\_\_\_\_
- 4. \_\_\_\_\_
- 5. \_\_\_\_\_
- 6. \_\_\_\_\_
- 7. \_\_\_\_\_
- 8. \_\_\_\_\_
- 9. \_\_\_\_\_
- 10. \_\_\_\_\_
- 11. \_\_\_\_\_
- 12. \_\_\_\_\_
- 13. \_\_\_\_\_
- 14. \_\_\_\_\_
- 15. \_\_\_\_\_



Determina se le figure rappresentate sono 'Triangolo', 'Quadrato', 'Rettangolo', 'Esagono' o 'Altro'.



Risposte

1. Altro

2. Esagono

3. rectangle

4. Altro

5. Altro

6. Altro

7. triangle

8. Altro

9. Esagono

10. triangle

11. square

12. rectangle

13. rectangle

14. Esagono

15. Altro