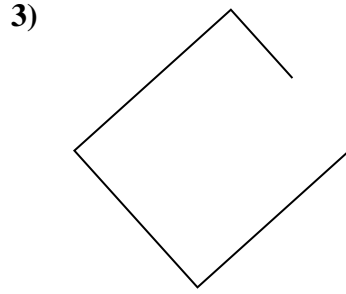
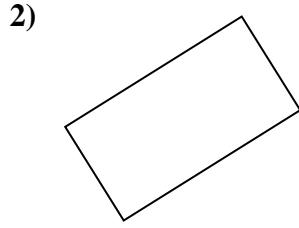
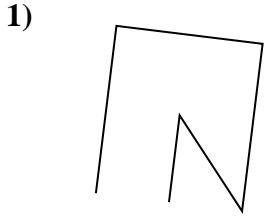



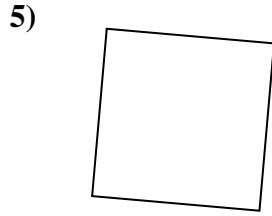



Determina se le figure rappresentate sono 'Triangolo', 'Quadrato', 'Rettangolo', 'Esagono' o 'Altro'.

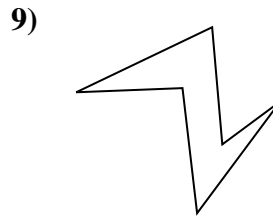
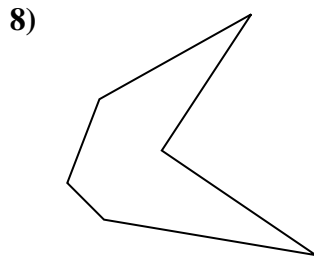
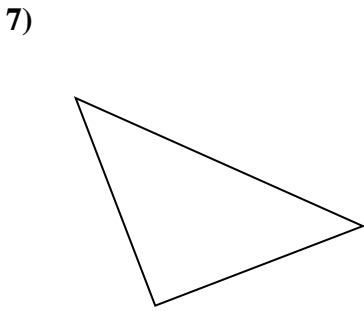
Risposte



1. _____



2. _____



3. _____

4. _____

5. _____

6. _____

7. _____

8. _____

9. _____

10. _____

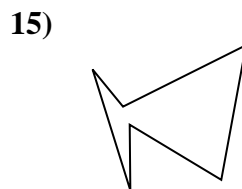
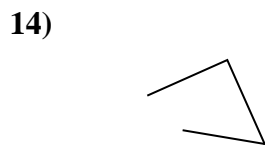
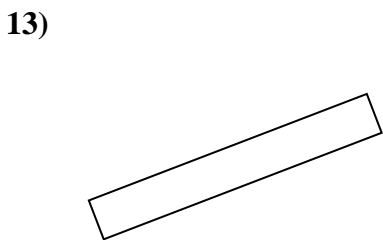
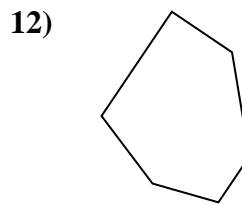
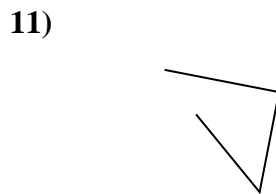
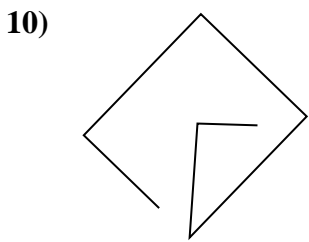
11. _____

12. _____

13. _____

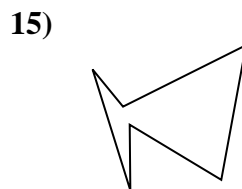
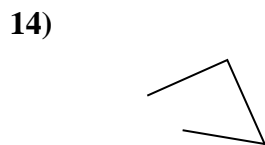
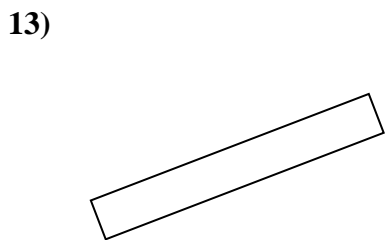
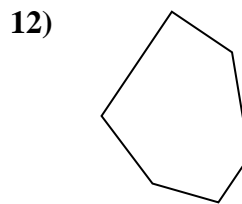
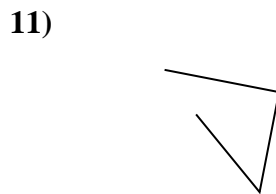
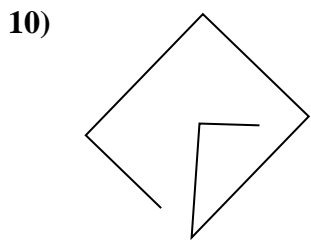
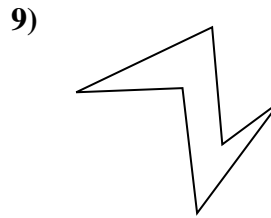
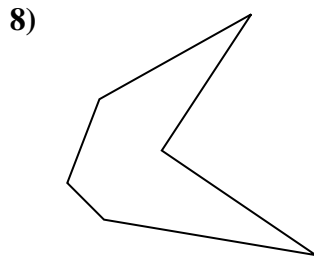
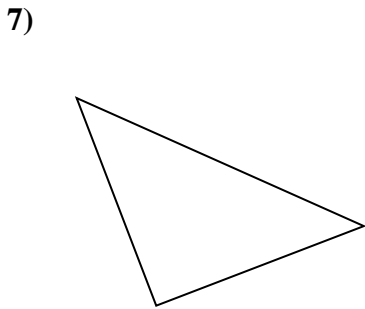

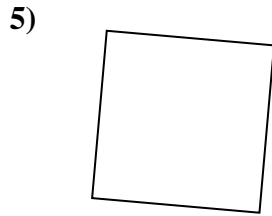

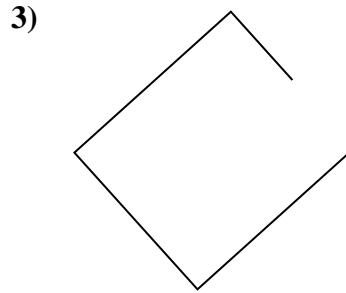
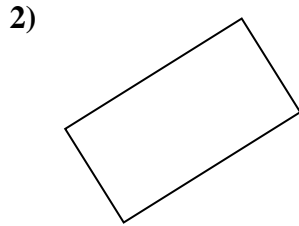
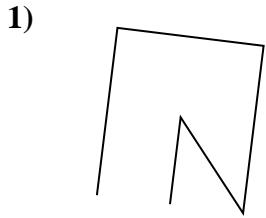
14. _____

15. _____





Determina se le figure rappresentate sono 'Triangolo', 'Quadrato', 'Rettangolo', 'Esagono' o 'Altro'.



Risposte

1. Altro

2. rectangle

3. Altro

4. rectangle

5. square

6. triangle

7. triangle

8. Esagono

9. Esagono

10. Altro

11. Altro

12. Esagono

13. rectangle

14. Altro

15. Esagono



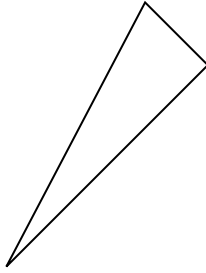
Determina se le figure rappresentate sono 'Triangolo', 'Quadrato', 'Rettangolo', 'Esagono' o 'Altro'.

Risposte

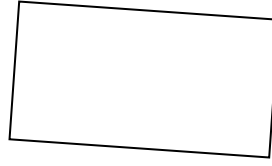
1)



2)



3)



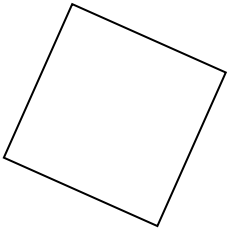
1. _____

2. _____

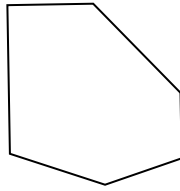
3. _____

4. _____

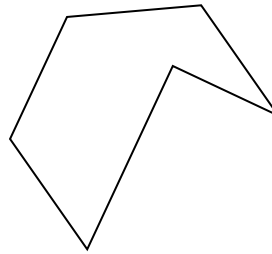
4)



5)



6)



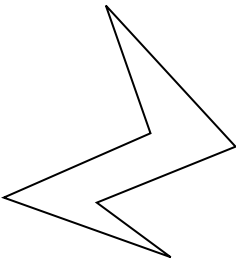
5. _____

6. _____

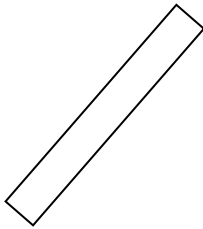
7. _____

8. _____

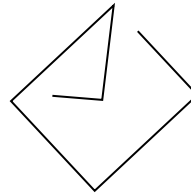
7)



8)



9)



9. _____

10. _____

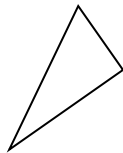
11. _____

12. _____

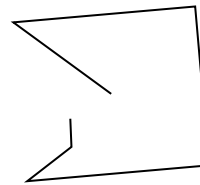
10)



11)



12)




13. _____


14. _____

15. _____

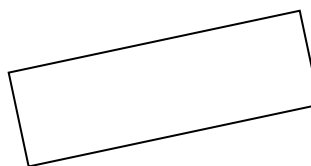
13)



14)



15)



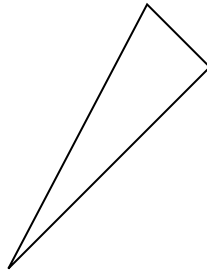


Determina se le figure rappresentate sono 'Triangolo', 'Quadrato', 'Rettangolo', 'Esagono' o 'Altro'.

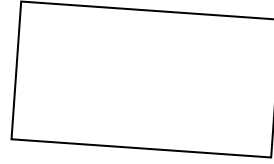
1)



2)



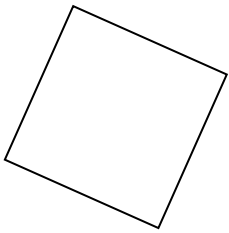
3)



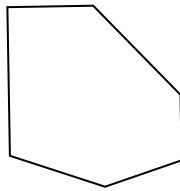
1.

Altro

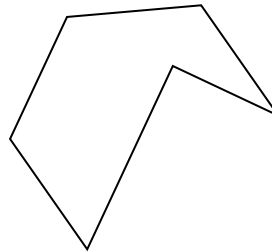
4)



5)



6)



2.

triangle

3.

rectangle

4.

square

5.

Esagono

6.

Esagono

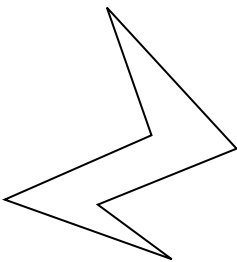
7.

Esagono

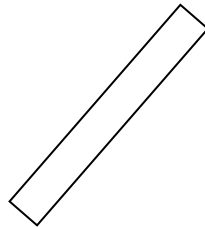
8.

rectangle

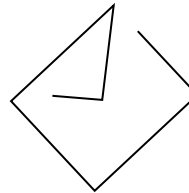
7)



8)



9)



9.

Altro

10.

triangle

11.

triangle

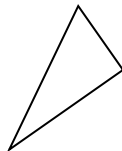
12.

Altro

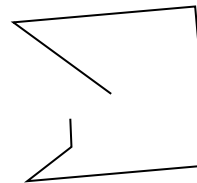
10)



11)



12)



13.

Altro


14.

triangle


15.

rectangle

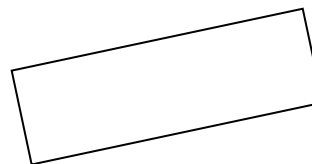
13)



14)



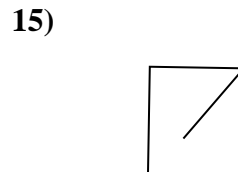
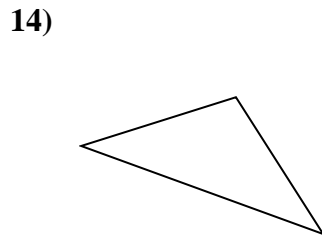
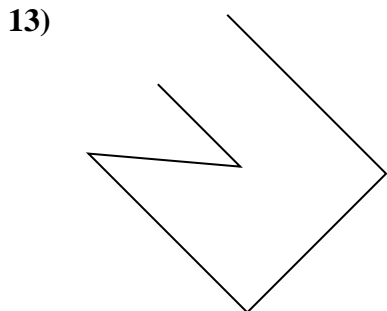
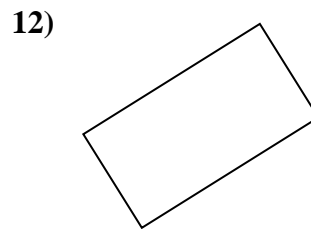
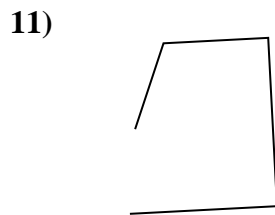
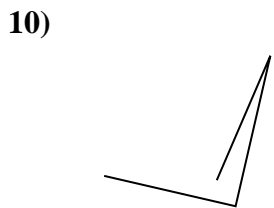

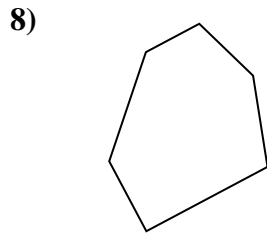
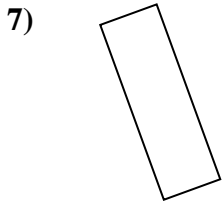
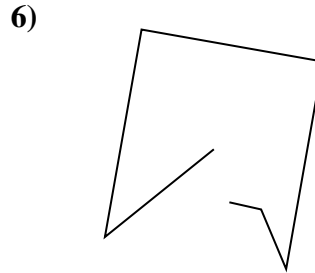
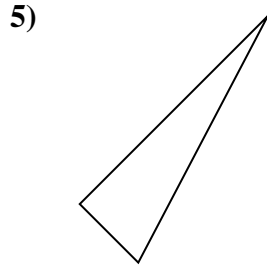
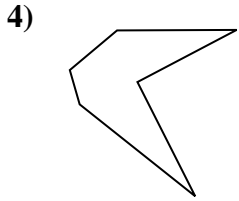
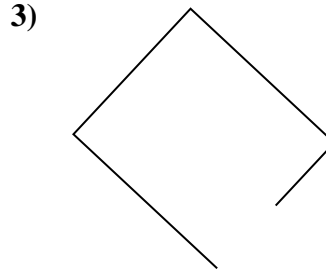
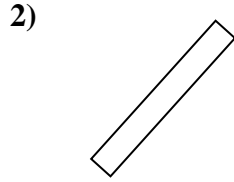
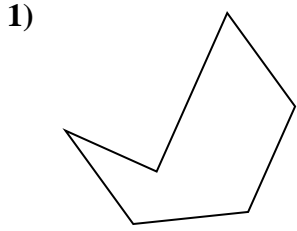
15)





Determina se le figure rappresentate sono 'Triangolo', 'Quadrato', 'Rettangolo', 'Esagono' o 'Altro'.

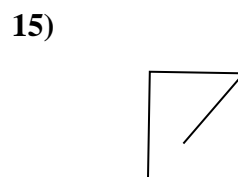
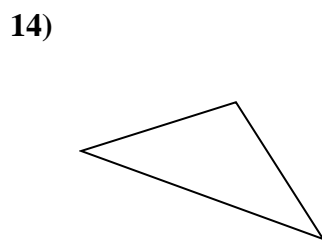
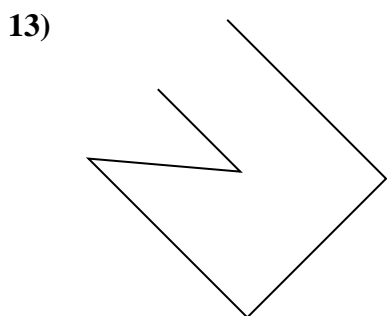
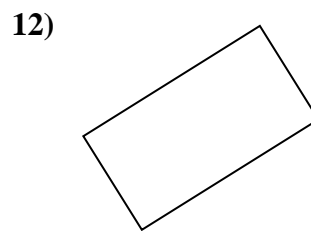
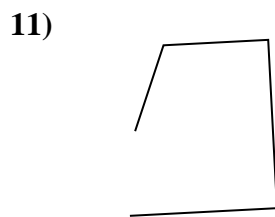
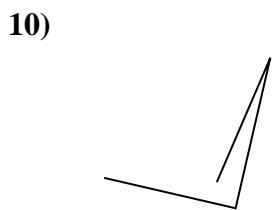

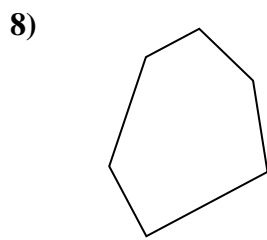
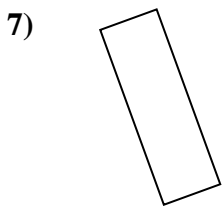
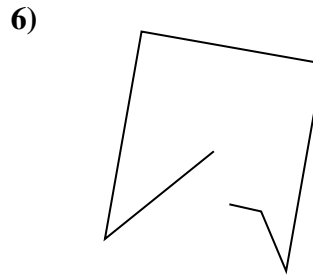
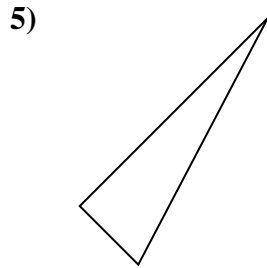
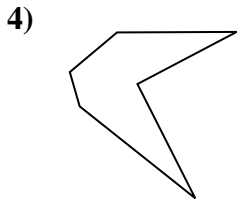
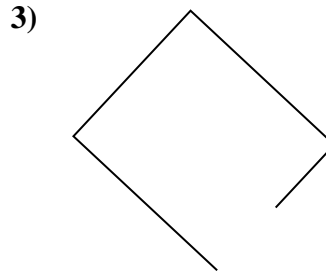
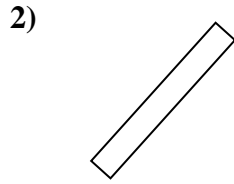
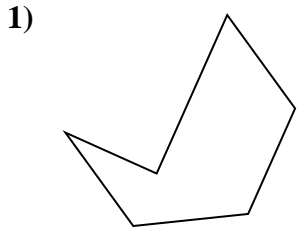
Risposte



1. _____
2. _____
3. _____
4. _____
5. _____
6. _____
7. _____
8. _____
9. _____
10. _____
11. _____
12. _____
13. _____
14. _____
15. _____



Determina se le figure rappresentate sono 'Triangolo', 'Quadrato', 'Rettangolo', 'Esagono' o 'Altro'.



Risposte

1. Esagono

2. rectangle

3. Altro

4. Esagono

5. triangle

6. Altro

7. rectangle

8. Esagono

9. triangle

10. Altro

11. Altro

12. rectangle

13. Altro

14. triangle

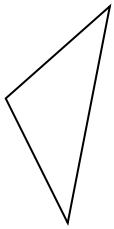
15. Altro



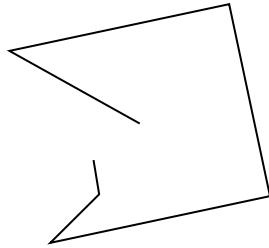
Determina se le figure rappresentate sono 'Triangolo', 'Quadrato', 'Rettangolo', 'Esagono' o 'Altro'.

Risposte

1)



2)



3)



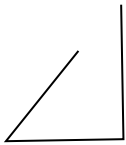
1. _____

2. _____

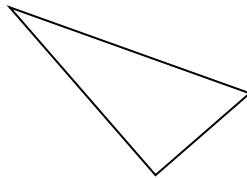
3. _____

4. _____

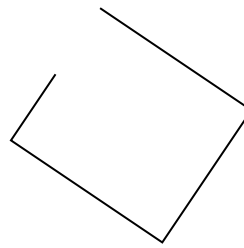
4)



5)



6)



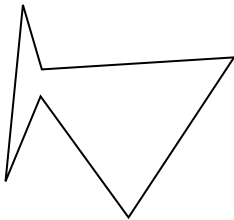
5. _____

6. _____

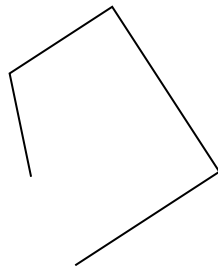
7. _____

8. _____

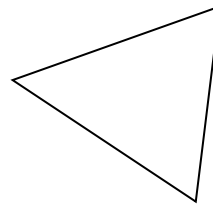
7)



8)



9)




9. _____

10. _____

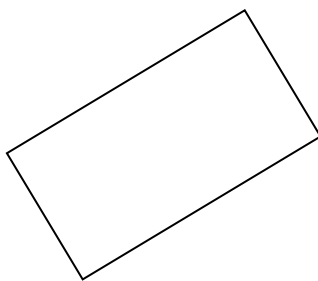
11. _____

12. _____


10)



11)



12)

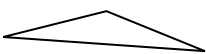


13. _____


14. _____

15. _____

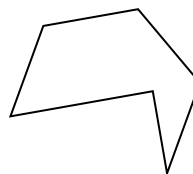
13)



14)



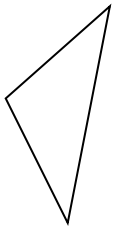
15)



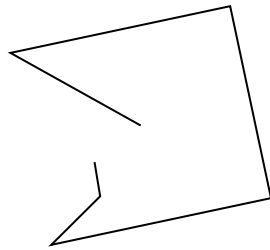


Determina se le figure rappresentate sono 'Triangolo', 'Quadrato', 'Rettangolo', 'Esagono' o 'Altro'.

1)



2)



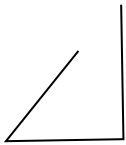
3)



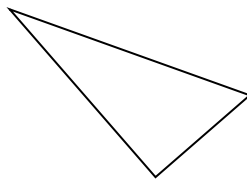
1.

triangle

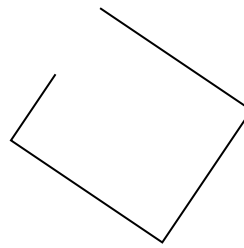
4)



5)



6)



2.

Altro

3.

Altro

4.

Altro

5.

triangle

6.

Altro

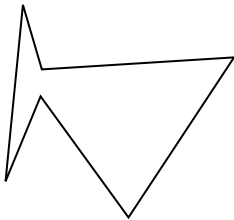
7.

Esagono

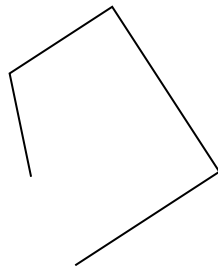
8.

Altro

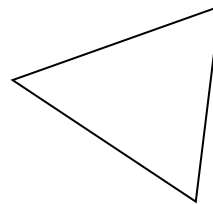
7)



8)



9)



9.

triangle

10.

Altro


11.

rectangle

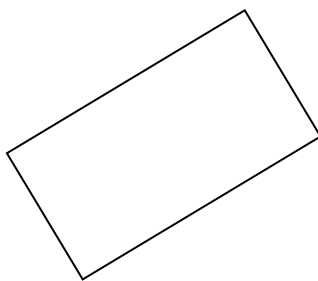
12.

Esagono


10)



11)



12)



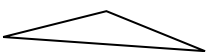
13.

triangle


14.

Altro

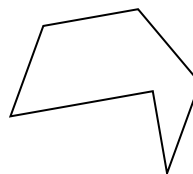
13)



14)



15)



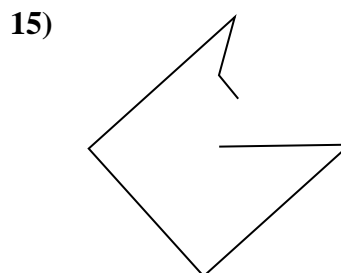
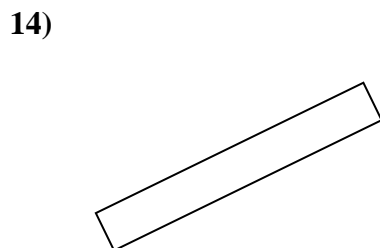
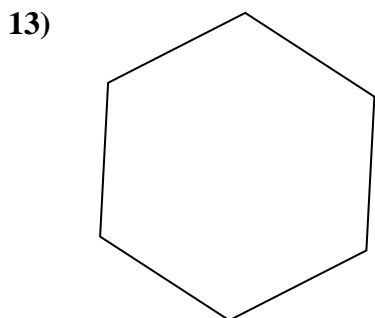
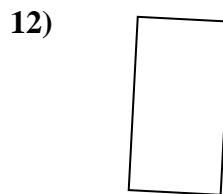
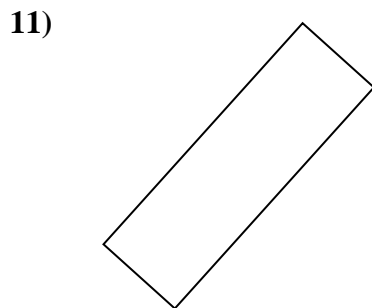
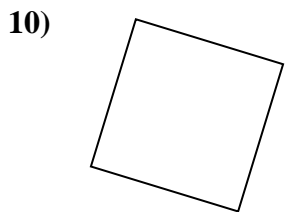
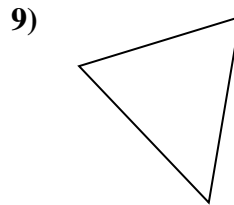
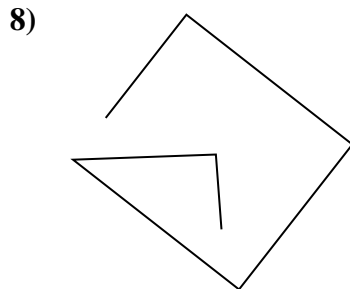
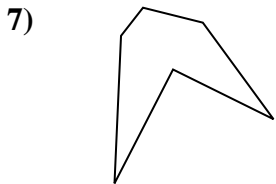
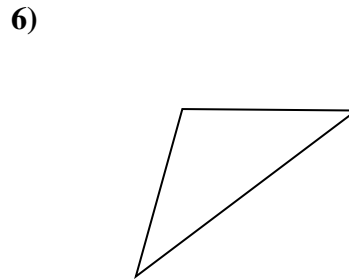
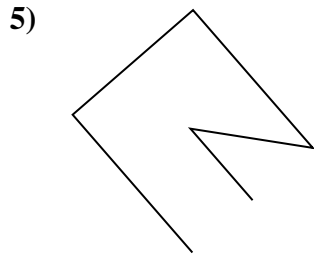
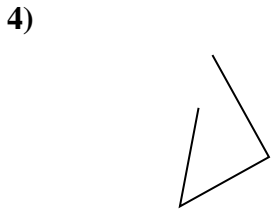
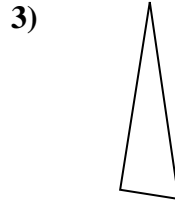


15.

Esagono



Determina se le figure rappresentate sono 'Triangolo', 'Quadrato', 'Rettangolo', 'Esagono' o 'Altro'.

Risposte

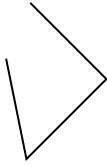


- 1. _____
- 2. _____
- 3. _____
- 4. _____
- 5. _____
- 6. _____
- 7. _____
- 8. _____
- 9. _____
- 10. _____
- 11. _____
- 12. _____
- 13. _____
- 14. _____
- 15. _____

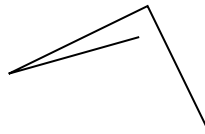


Determina se le figure rappresentate sono 'Triangolo', 'Quadrato', 'Rettangolo', 'Esagono' o 'Altro'.

1)



2)



3)



1.

Altro

2.

Altro

3.

triangle

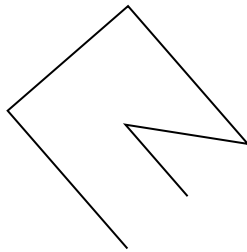
4.

Altro

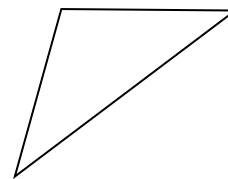
4)



5)



6)



5.

Altro

6.

triangle

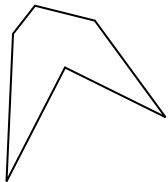
7.

Esagono

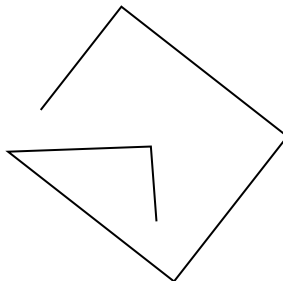
8.

Altro


7)



8)



9)



9.

triangle

10.

square


11.

rectangle

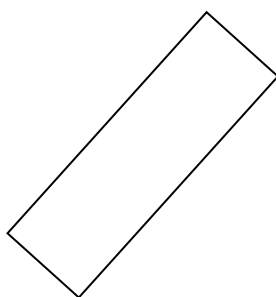
12.

rectangle

10)



11)



12)



13.

Esagono

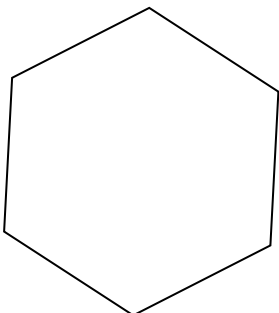
14.

rectangle

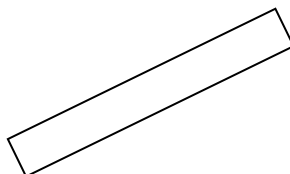
15.

Altro

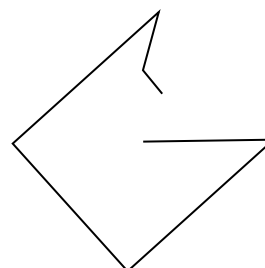
13)



14)



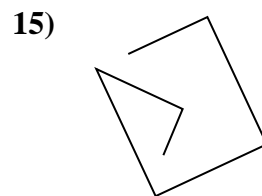
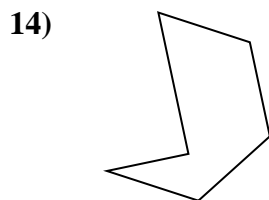
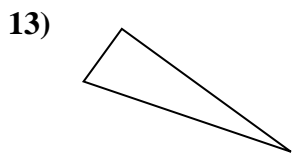
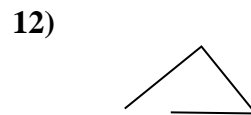
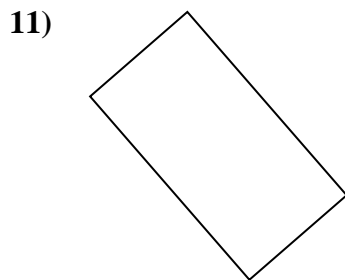
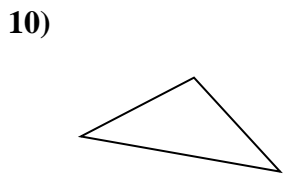

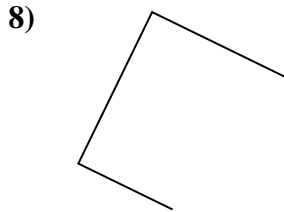
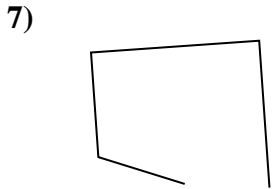
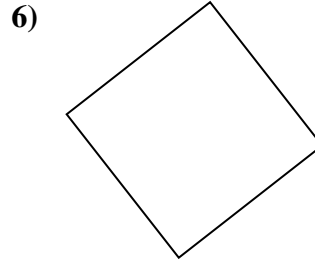
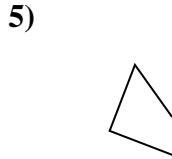
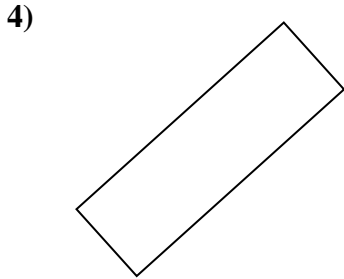
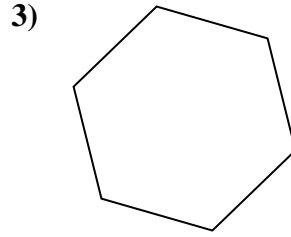
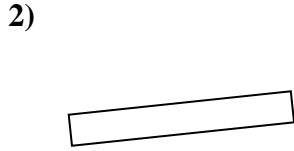
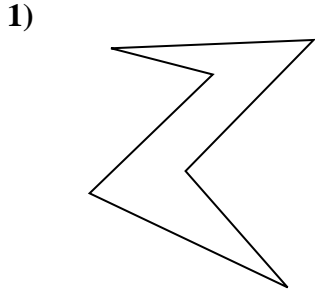
15)





Determina se le figure rappresentate sono 'Triangolo', 'Quadrato', 'Rettangolo', 'Esagono' o 'Altro'.

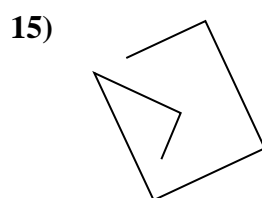
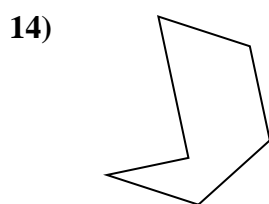
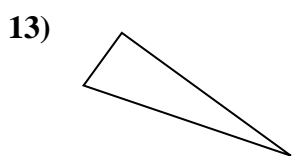
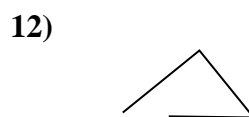
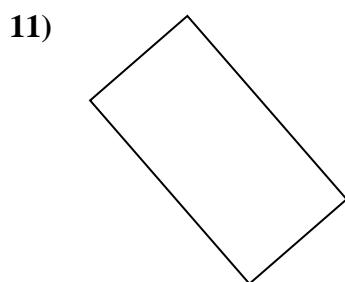
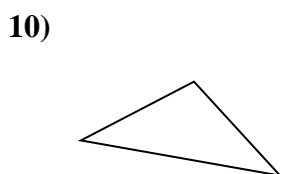

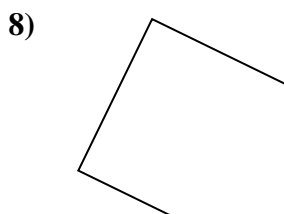
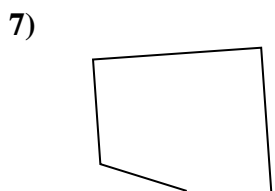
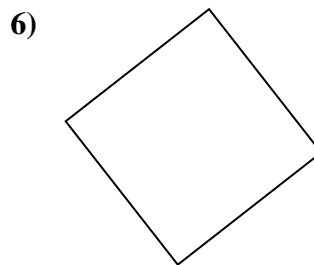
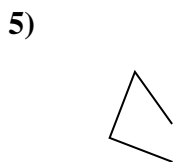
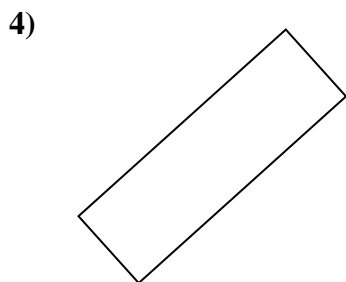
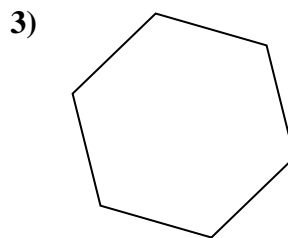
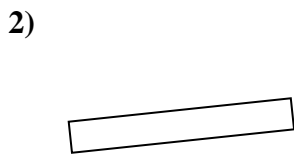
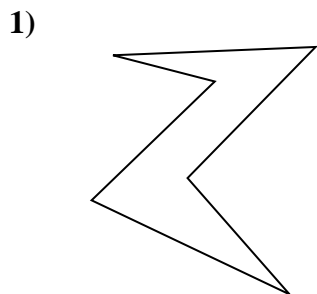
Risposte



- 1. _____
- 2. _____
- 3. _____
- 4. _____
- 5. _____
- 6. _____
- 7. _____
- 8. _____
- 9. _____
- 10. _____
- 11. _____
- 12. _____
- 13. _____
- 14. _____
- 15. _____



Determina se le figure rappresentate sono 'Triangolo', 'Quadrato', 'Rettangolo', 'Esagono' o 'Altro'.



Risposte

1. Esagono

2. rectangle

3. Esagono

4. rectangle

5. Altro

6. square

7. Altro

8. Altro

9. Altro

10. triangle

11. rectangle

12. Altro

13. triangle


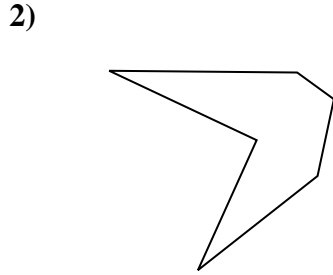
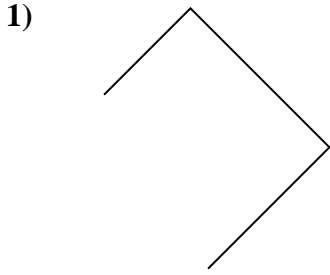
14. Esagono

15. Altro



Determina se le figure rappresentate sono 'Triangolo', 'Quadrato', 'Rettangolo', 'Esagono' o 'Altro'.

Risposte

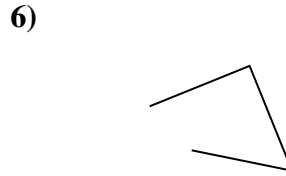
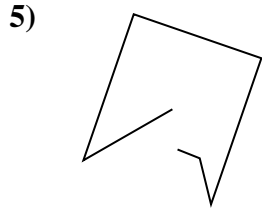
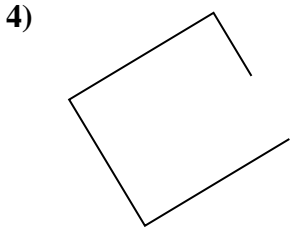


1. _____

2. _____

3. _____

4. _____


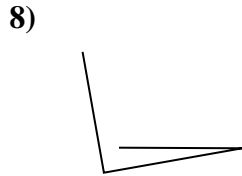



5. _____

6. _____

7. _____

8. _____

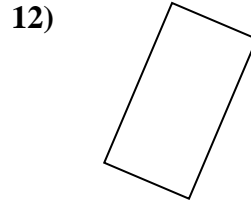
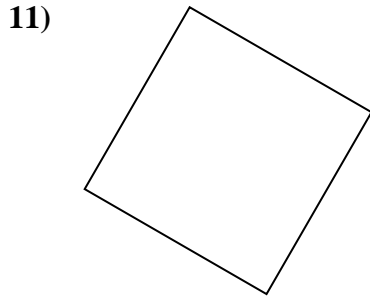
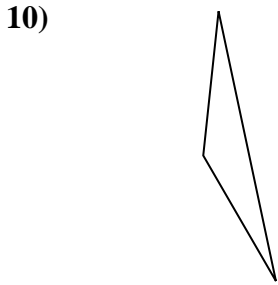


9. _____

10. _____

11. _____

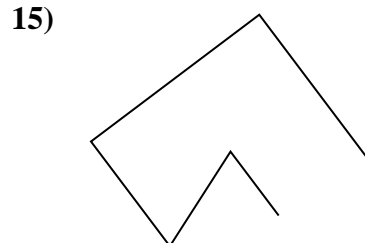
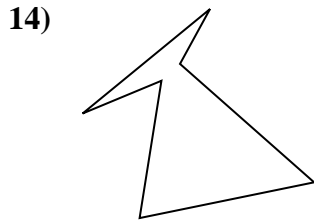
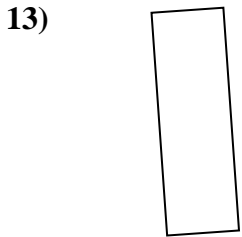
12. _____



13. _____

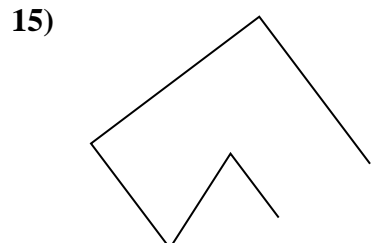
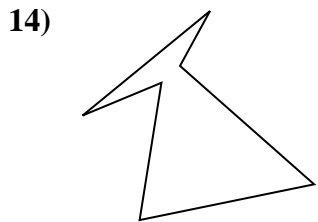
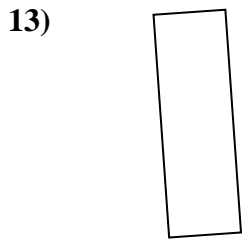
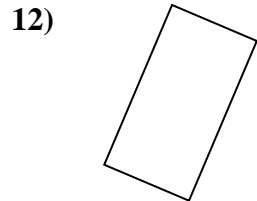
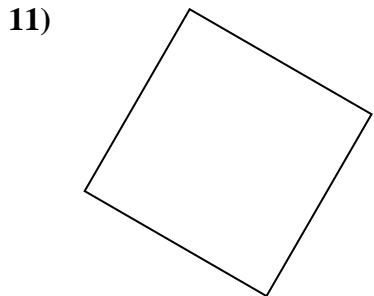
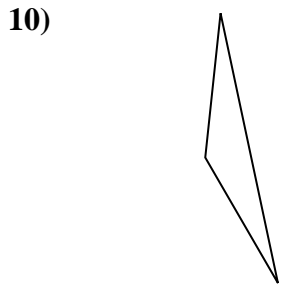

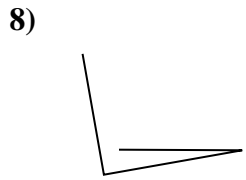

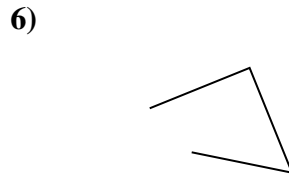
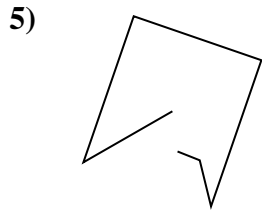
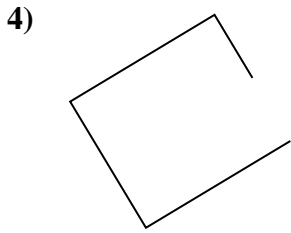

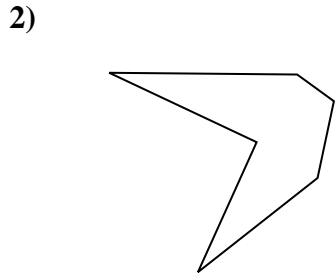
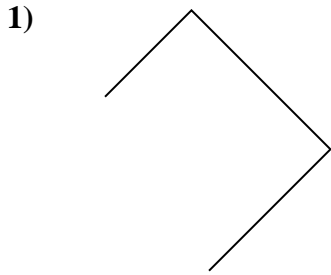
14. _____

15. _____





Determina se le figure rappresentate sono 'Triangolo', 'Quadrato', 'Rettangolo', 'Esagono' o 'Altro'.



Risposte

1. Altro

2. Esagono

3. rectangle

4. Altro

5. Altro

6. Altro

7. triangle

8. Altro

9. Esagono

10. triangle

11. square

12. rectangle

13. rectangle

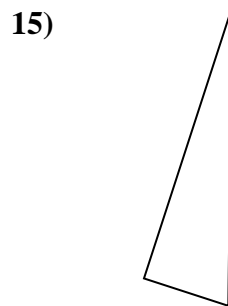
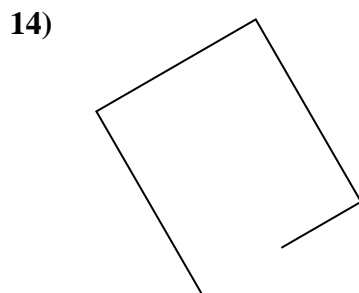
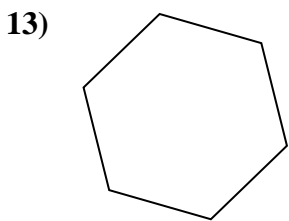
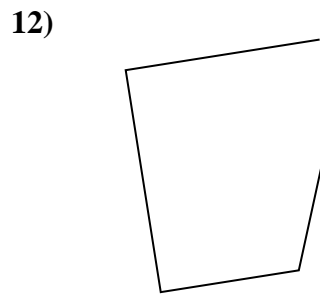
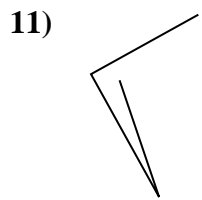
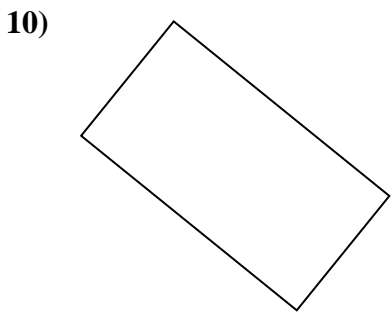
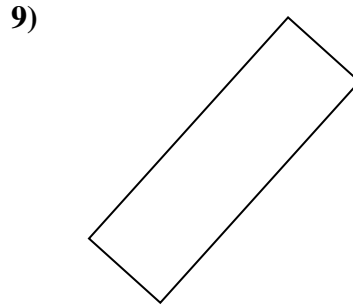
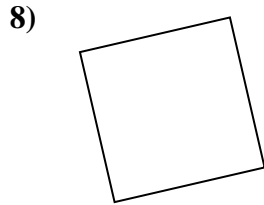
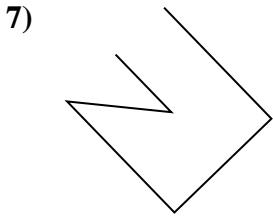
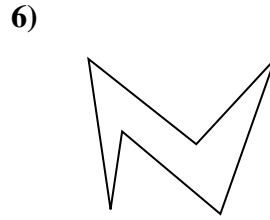
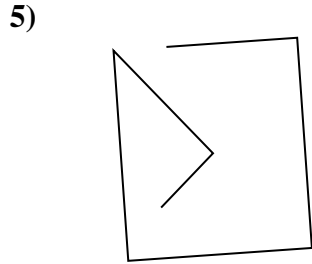
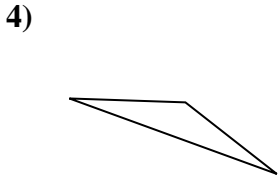
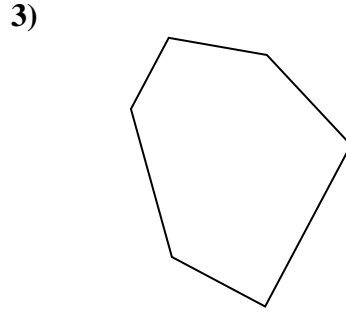
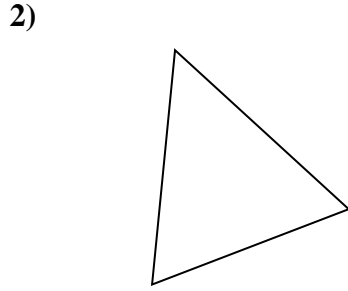
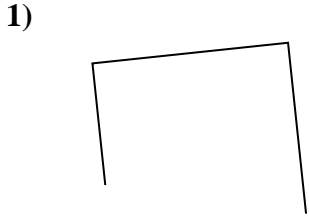
14. Esagono

15. Altro



Determina se le figure rappresentate sono 'Triangolo', 'Quadrato', 'Rettangolo', 'Esagono' o 'Altro'.

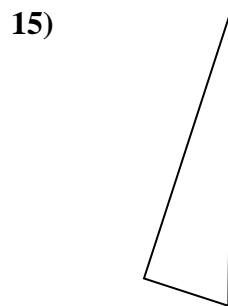
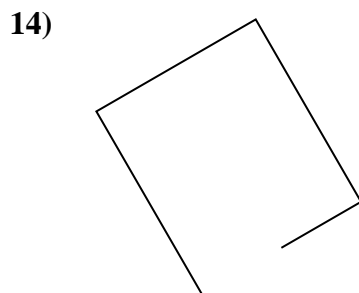
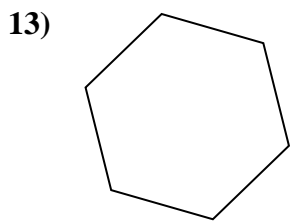
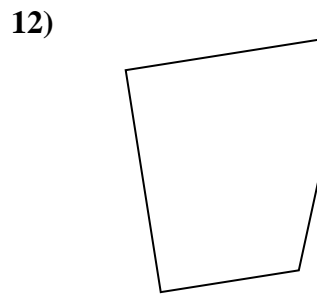
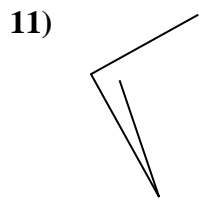
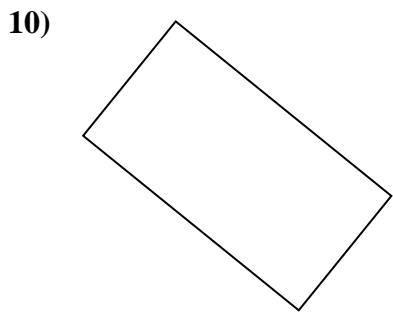
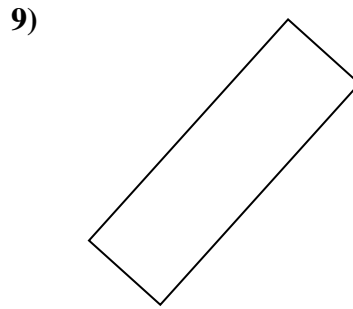
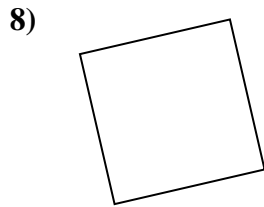
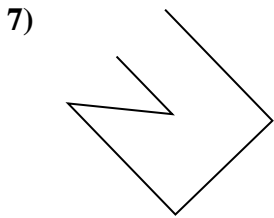
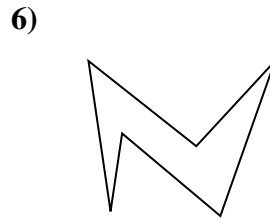
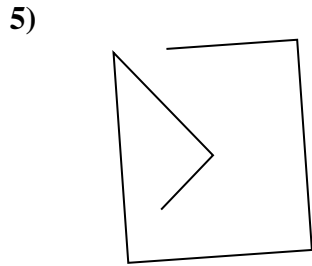
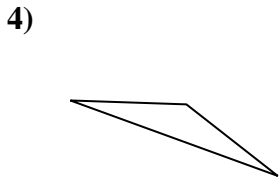
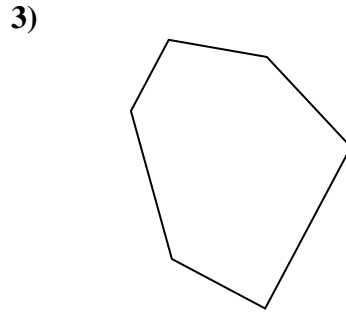
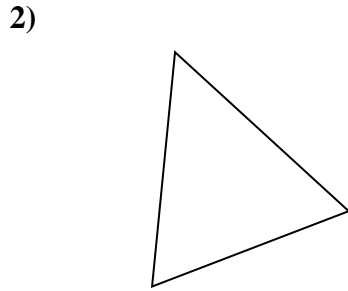
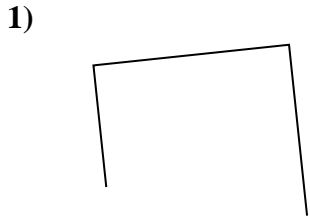
Risposte



1. _____
2. _____
3. _____
4. _____
5. _____
6. _____
7. _____
8. _____
9. _____
10. _____
11. _____
12. _____
13. _____
14. _____
15. _____



Determina se le figure rappresentate sono 'Triangolo', 'Quadrato', 'Rettangolo', 'Esagono' o 'Altro'.



Risposte

1. Altro

2. triangle

3. Esagono

4. triangle

5. Altro

6. Esagono

7. Altro

8. square

9. rectangle

10. rectangle

11. Altro

12. Altro

13. Esagono

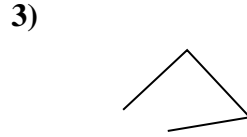
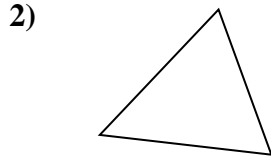
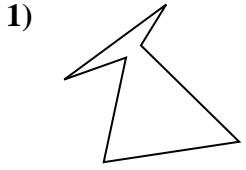
14. Altro

15. triangle



Determina se le figure rappresentate sono 'Triangolo', 'Quadrato', 'Rettangolo', 'Esagono' o 'Altro'.

Risposte

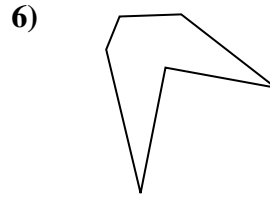
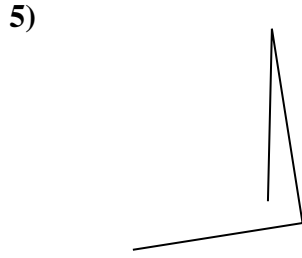
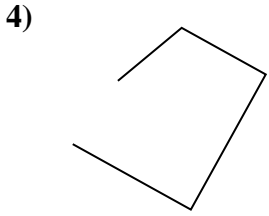


1. _____

2. _____

3. _____

4. _____

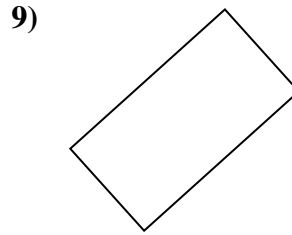
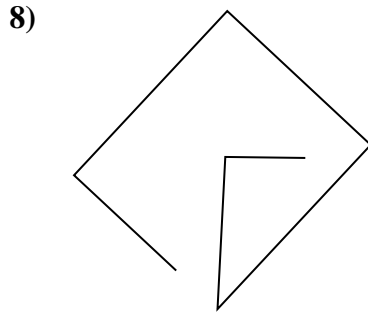
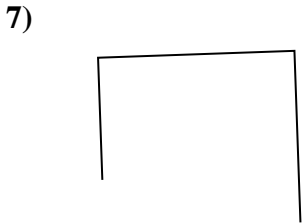


5. _____

6. _____

7. _____

8. _____

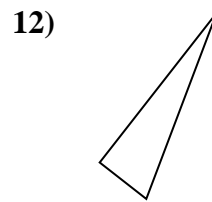
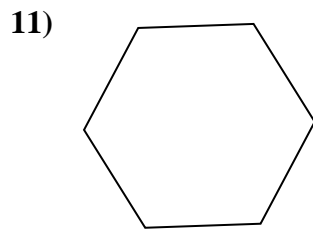
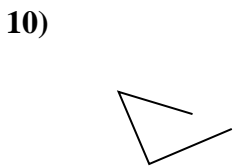


9. _____

10. _____

11. _____

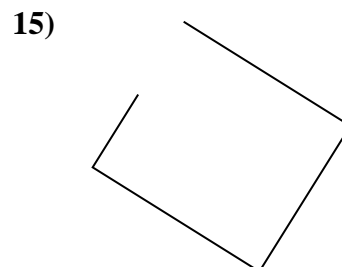
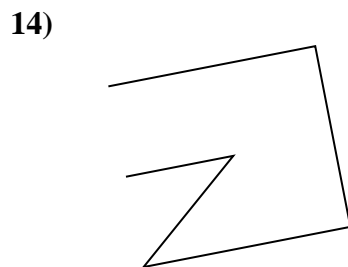
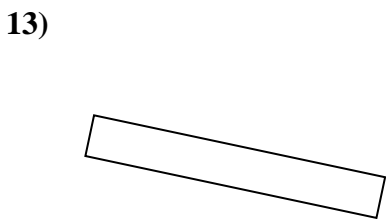
12. _____



13. _____

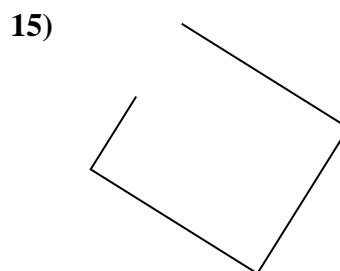
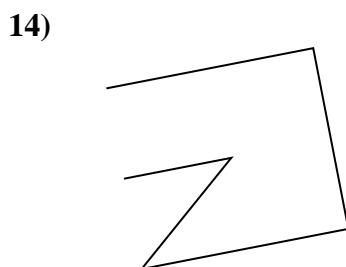

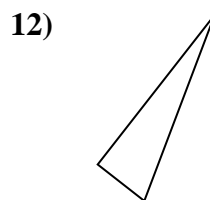
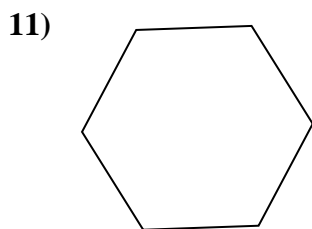
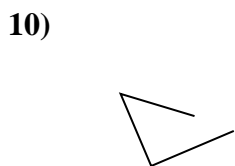
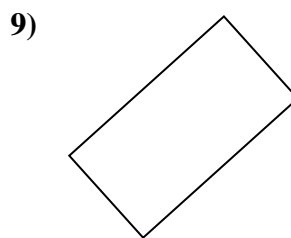
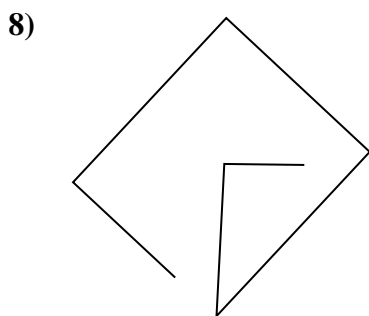
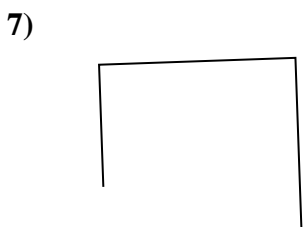
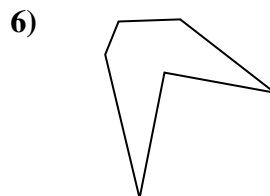
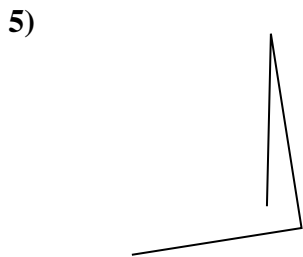
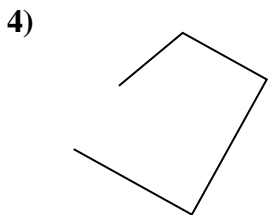
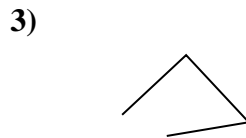
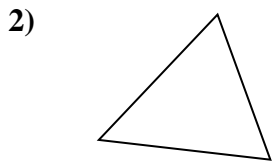

14. _____

15. _____





Determina se le figure rappresentate sono 'Triangolo', 'Quadrato', 'Rettangolo', 'Esagono' o 'Altro'.



Risposte

1. Esagono

2. triangle

3. Altro

4. Altro

5. Altro

6. Esagono

7. Altro

8. Altro

9. rectangle

10. Altro

11. Esagono

12. triangle

13. rectangle

14. Altro

15. Altro



Determina se le figure rappresentate sono 'Triangolo', 'Quadrato', 'Rettangolo', 'Esagono' o 'Altro'.

Risposte

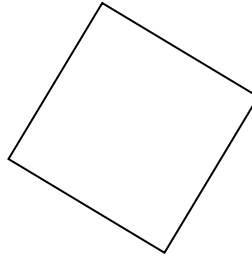
1)



2)



3)



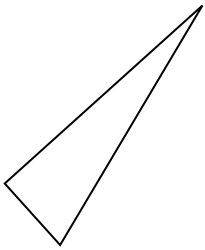
1. _____

2. _____

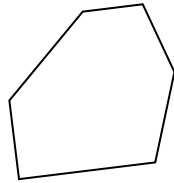
3. _____

4. _____

4)



5)



6)



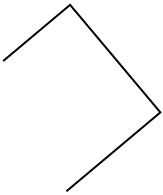
5. _____

6. _____


7. _____

8. _____

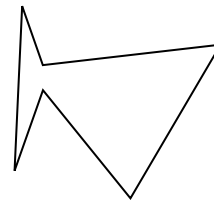
7)



8)



9)



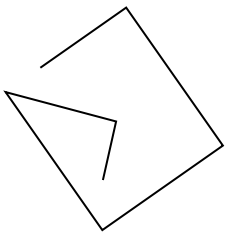
9. _____

10. _____

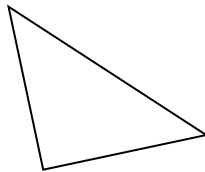
11. _____

12. _____

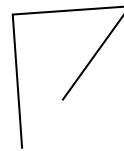
10)



11)



12)

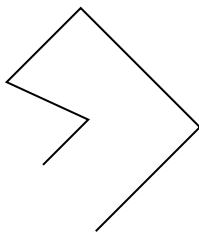


13. _____

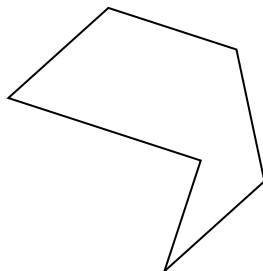
14. _____

15. _____

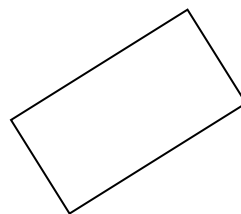
13)



14)



15)





Determina se le figure rappresentate sono 'Triangolo', 'Quadrato', 'Rettangolo', 'Esagono' o 'Altro'.

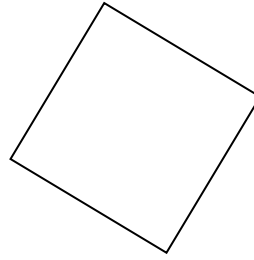
1)



2)



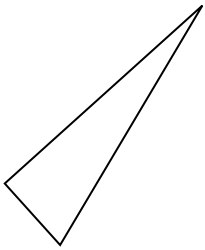
3)



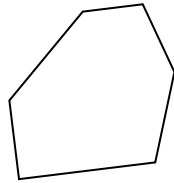
1.

triangle

4)



5)



6)



2.

triangle

3.

square

4.

triangle

5.

Esagono

6.

Altro

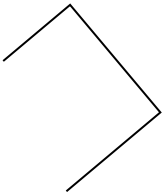
7.

Altro


8.

Altro

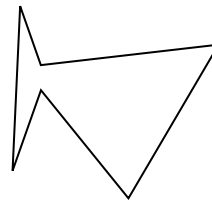
7)



8)



9)



9.

Esagono

10.

Altro

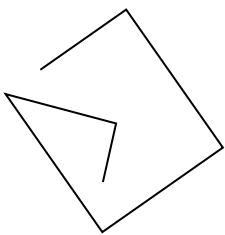
11.

triangle

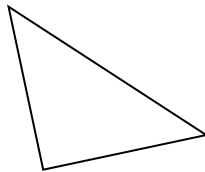
12.

Altro

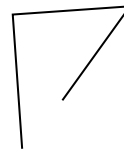
10)



11)



12)



13.

Altro

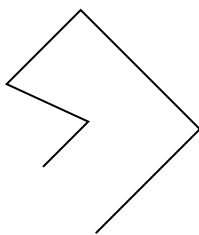
14.

Esagono

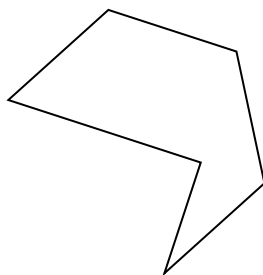
15.

rectangle

13)



14)



15)

