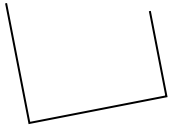




Determina se le figure rappresentate sono 'Triangolo', 'Quadrato', 'Rettangolo', 'Esagono' o 'Altro'.

Risposte

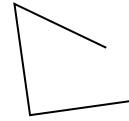
1)



2)



3)



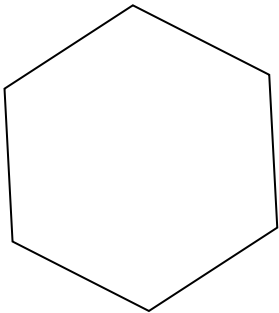
1. _____

2. _____

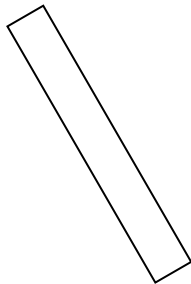
3. _____

4. _____

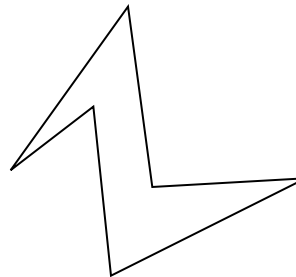
4)



5)



6)



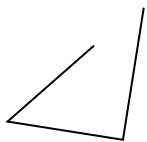
5. _____

6. _____


7. _____

8. _____

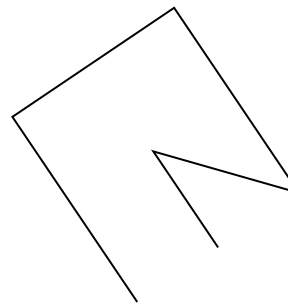
7)



8)



9)



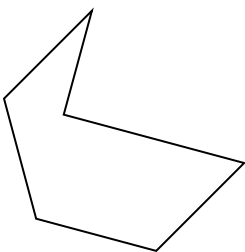
9. _____

10. _____

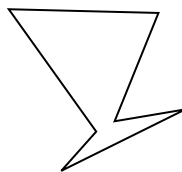
11. _____

12. _____


10)



11)



12)

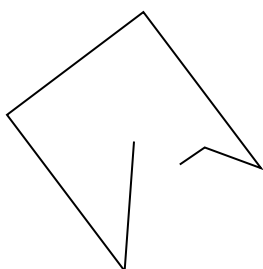


13. _____

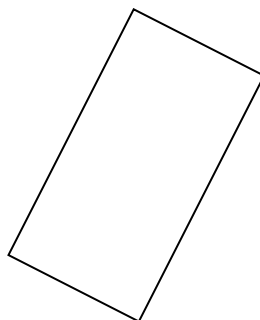
14. _____

15. _____

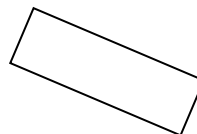
13)



14)



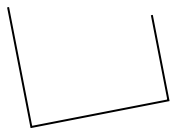
15)



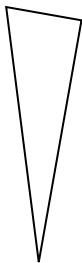


Determina se le figure rappresentate sono 'Triangolo', 'Quadrato', 'Rettangolo', 'Esagono' o 'Altro'.

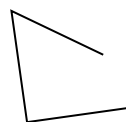
1)



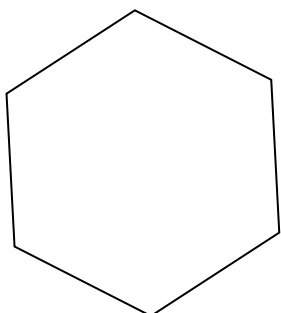
2)



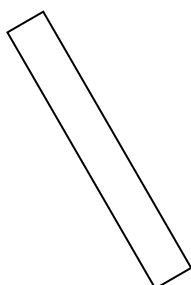
3)



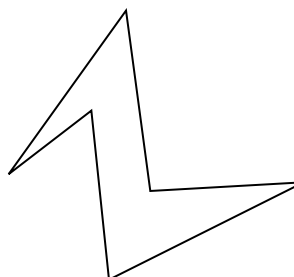
4)



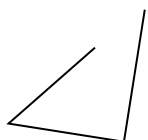
5)




6)




7)



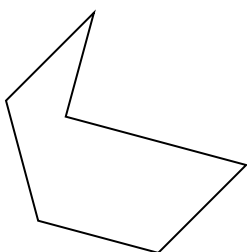
8)



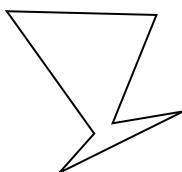
9)




10)



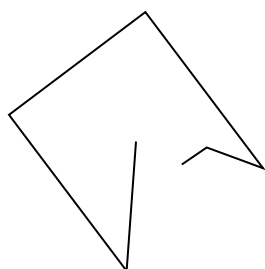
11)



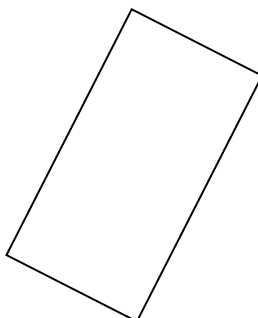
12)



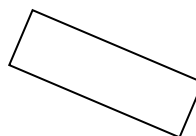
13)



14)



15)



Risposte

1. Altro

2. triangle

3. Altro

4. Esagono

5. rectangle

6. Esagono

7. Altro

8. triangle

9. Altro

10. Esagono

11. Esagono

12. square

13. Altro

14. rectangle

15. rectangle