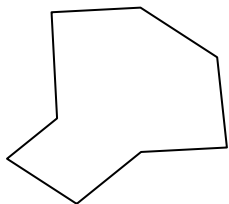




Identifica il tipo di forma rappresentata.

**Risposte**

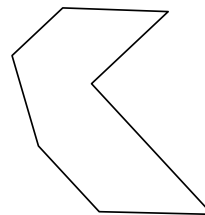
1)



2)



3)




1. \_\_\_\_\_

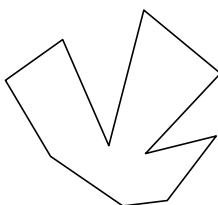
2. \_\_\_\_\_

3. \_\_\_\_\_

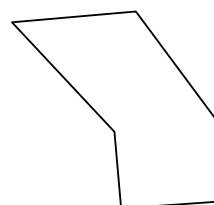
4)



5)



6)

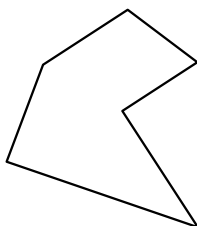


4. \_\_\_\_\_

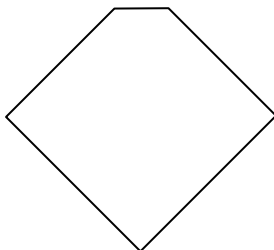
5. \_\_\_\_\_

6. \_\_\_\_\_

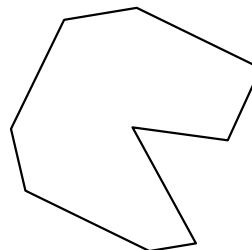
7)



8)



9)

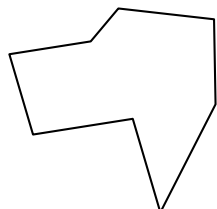


7. \_\_\_\_\_

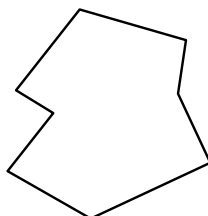
8. \_\_\_\_\_

9. \_\_\_\_\_

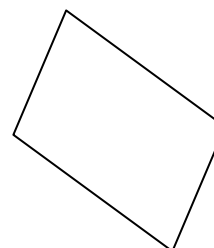
10)



11)



12)



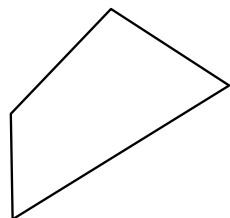
10. \_\_\_\_\_

11. \_\_\_\_\_


12. \_\_\_\_\_

13. \_\_\_\_\_

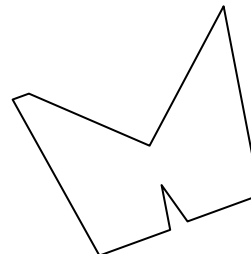
13)



14)



15)



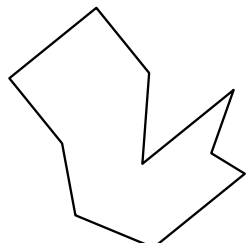
14. \_\_\_\_\_

15. \_\_\_\_\_


16. \_\_\_\_\_

17. \_\_\_\_\_

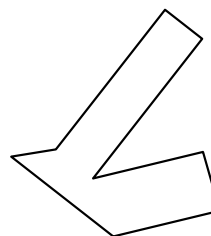
16)



17)



18)



18. \_\_\_\_\_

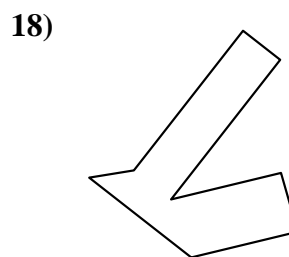
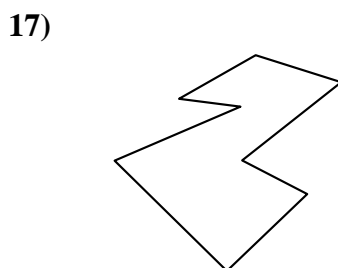
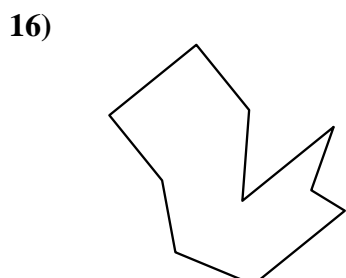
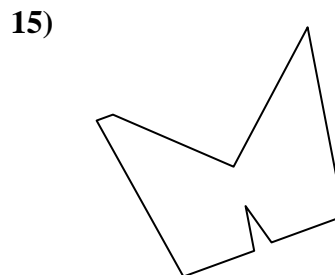

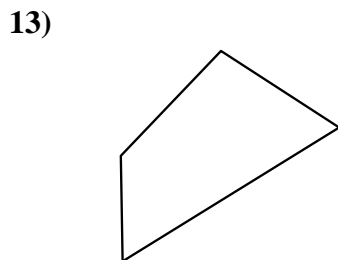
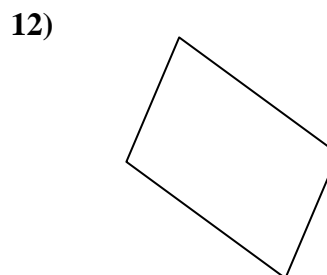
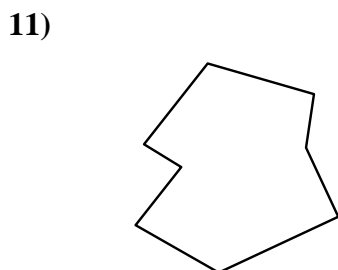
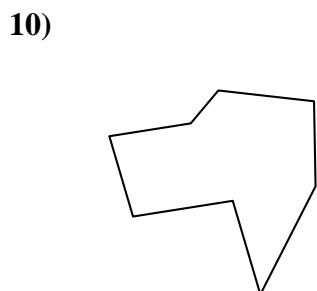
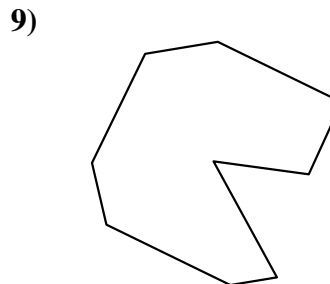
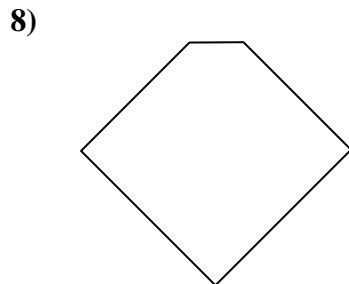
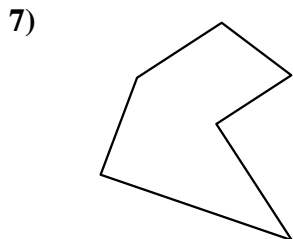
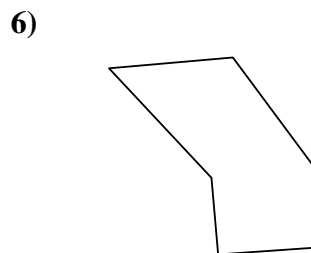
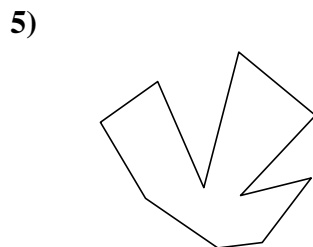
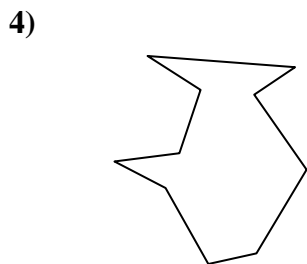
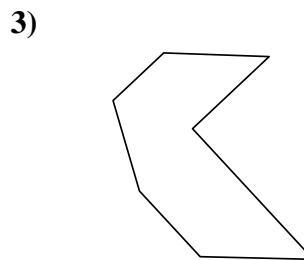
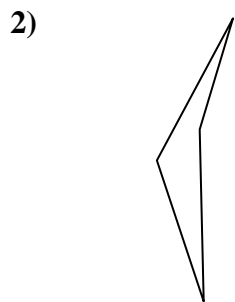
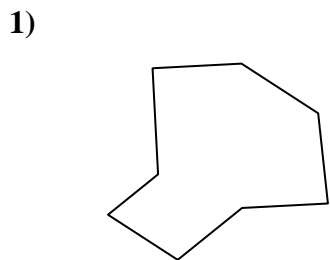
19. \_\_\_\_\_

20. \_\_\_\_\_

21. \_\_\_\_\_



Identifica il tipo di forma rappresentata.



**Risposte**

1. Ottagono

2. Quadrilatero

3. Ettagono

4. Decagono

5. Decagono

6. Esagono

7. Esagono

8. Pentagono

9. Ennagono

10. Ottagono

11. Ottagono

12. Quadrilatero

13. Quadrilatero

14. Ottagono

15. Ennagono

16. Decagono

17. Ottagono

18. Ottagono

19. Quadrilatero

20. Ettagono

21. Ennagono