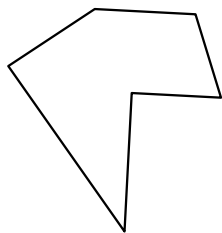





Identifica il tipo di forma rappresentata.

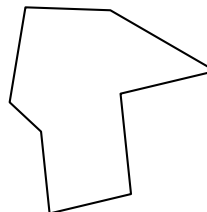
1)



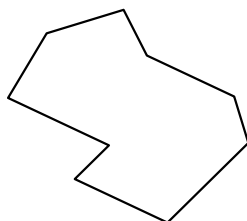
2)



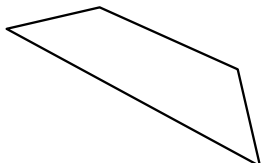
3)



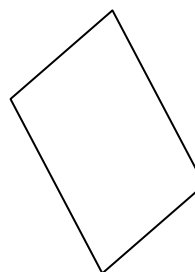
4)




5)



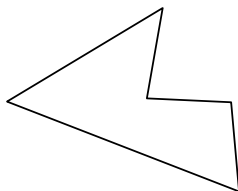
6)




7)



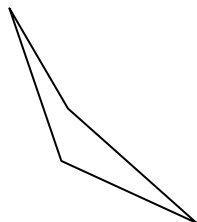
8)



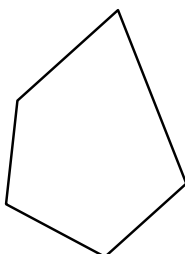
9)



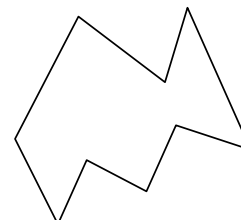
10)



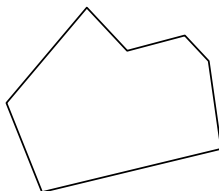
11)



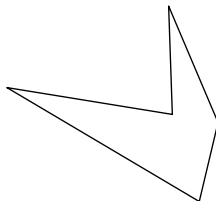
12)



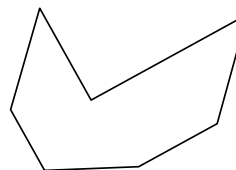
13)



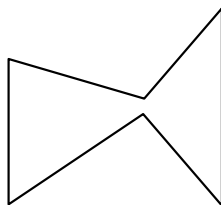
14)



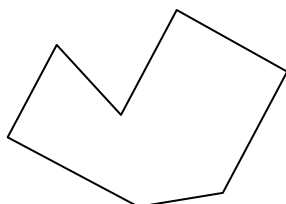
15)



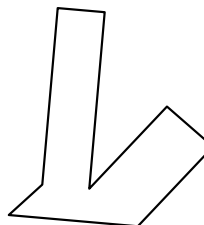
16)



17)



18)



Risposte

1. _____

2. _____

3. _____

4. _____

5. _____

6. _____

7. _____

8. _____

9. _____

10. _____

11. _____

12. _____

13. _____

14. _____

15. _____

16. _____

17. _____

18. _____

19. _____

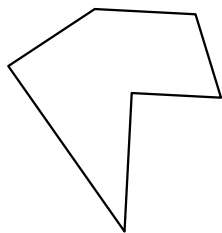
20. _____

21. _____




Identifica il tipo di forma rappresentata.

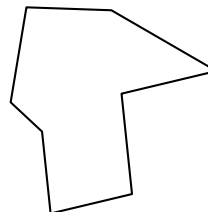
1)



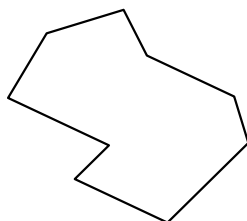
2)



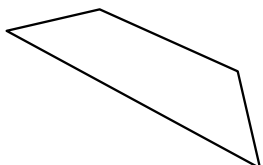
3)



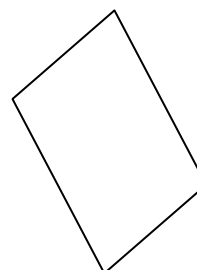
4)




5)



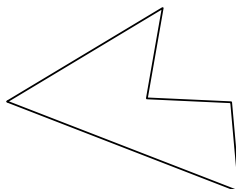
6)



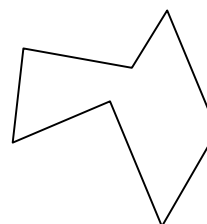
7)



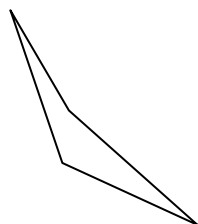
8)



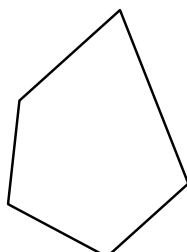
9)




10)



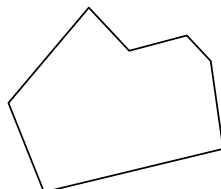
11)



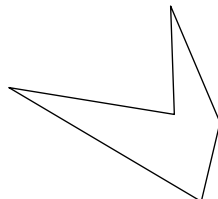
12)



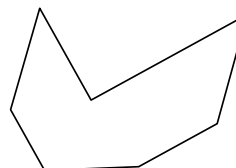
13)



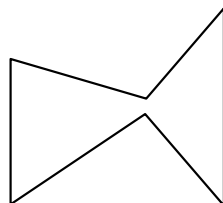
14)



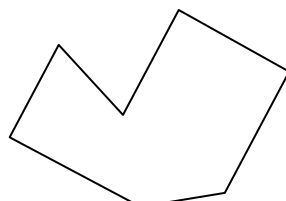
15)



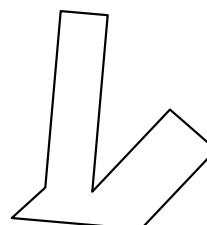
16)



17)



18)



Risposte

1. Esagono

2. Ennagono

3. Ottagono

4. Ennagono

5. Quadrilatero

6. Quadrilatero

7. Quadrilatero

8. Pentagono

9. Ettagono

10. Quadrilatero

11. Pentagono

12. Ennagono

13. Ettagono

14. Pentagono

15. Ettagono

16. Esagono

17. Ettagono

18. Ottagono

19. Ottagono

20. Ettagono

21. Ottagono