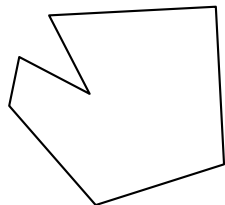




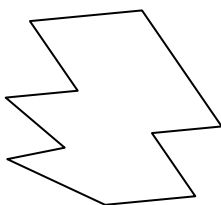
Identifica il tipo di forma rappresentata.

Risposte

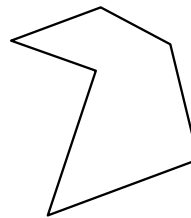
1)



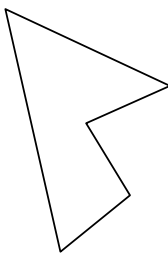
2)



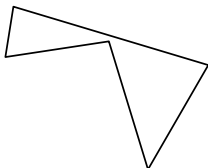
3)



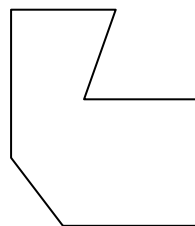
4)




5)



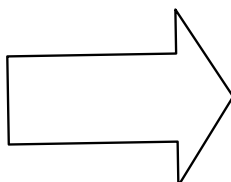
6)



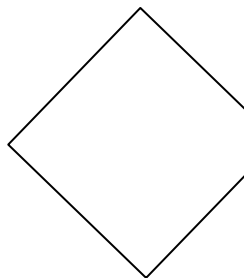
7)



8)



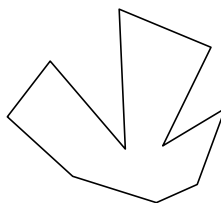
9)



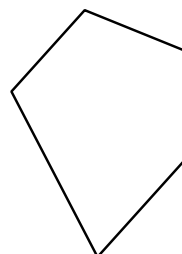
10)



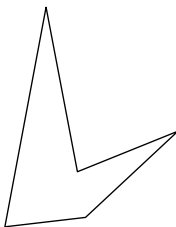
11)



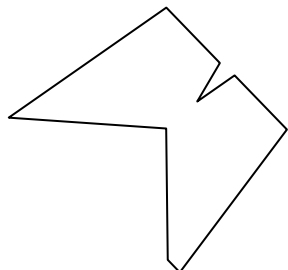
12)




13)



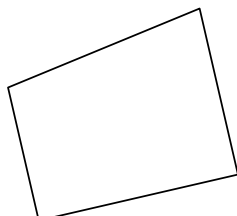
14)



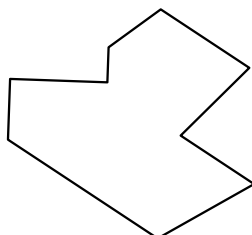
15)




16)



17)



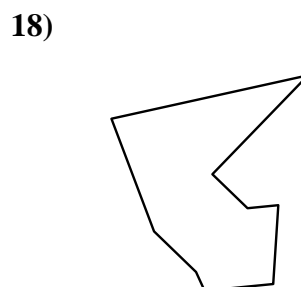
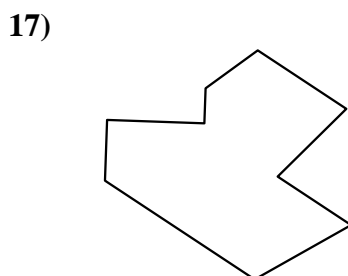
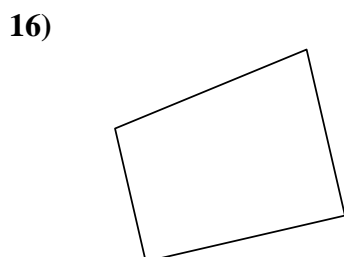

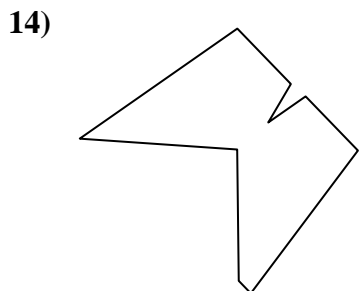
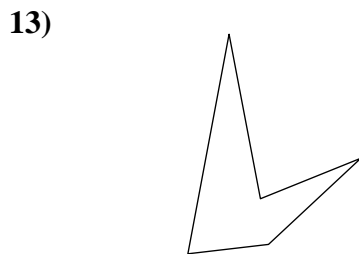
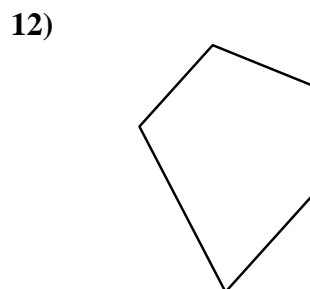
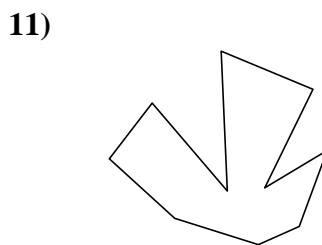
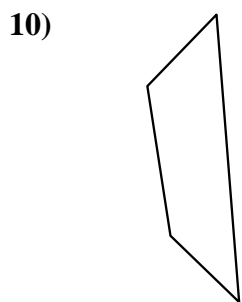
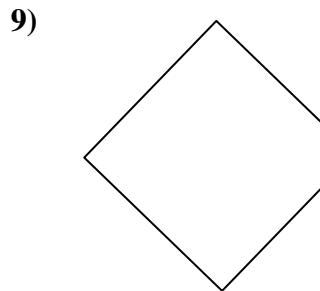
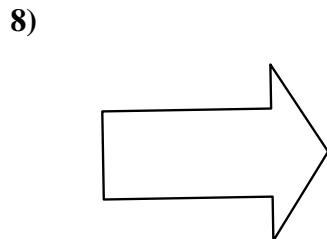
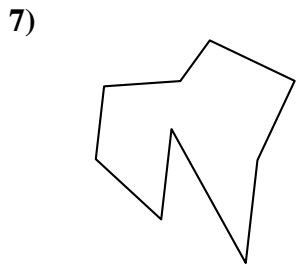
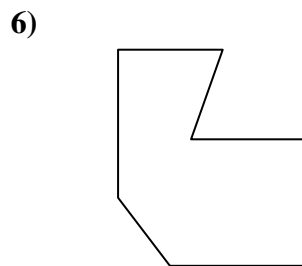
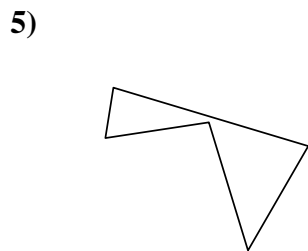
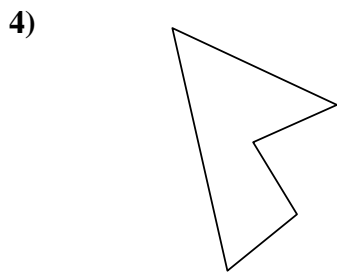
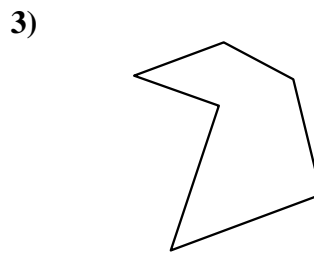
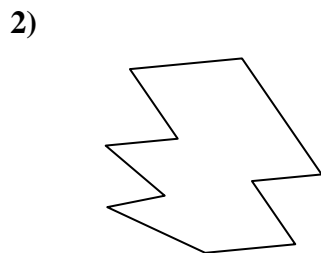

18)



1. _____
2. _____
3. _____
4. _____
5. _____
6. _____
7. _____
8. _____
9. _____
10. _____
11. _____
12. _____
13. _____
14. _____
15. _____
16. _____
17. _____
18. _____
19. _____
20. _____
21. _____



Identifica il tipo di forma rappresentata.



Risposte

1. Ettagono

2. Decagono

3. Esagono

4. Pentagono

5. Pentagono

6. Ettagono

7. Ennagono

8. Ettagono

9. Pentagono

10. Quadrilatero

11. Decagono

12. Pentagono

13. Pentagono

14. Ennagono

15. Ottagono

16. Quadrilatero

17. Ennagono

18. Ennagono

19. Ottagono

20. Quadrilatero

21. Ottagono