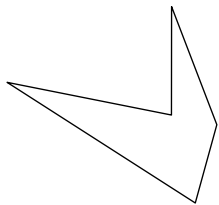




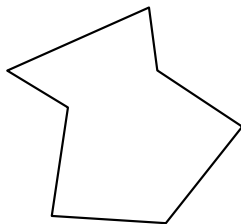
Identifica il tipo di forma rappresentata.

Risposte


1)



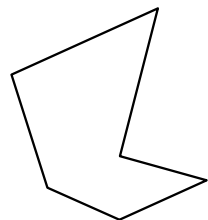
2)




3)



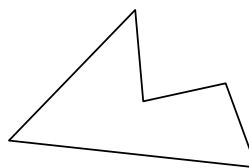
4)



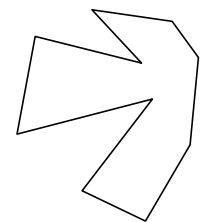
5)



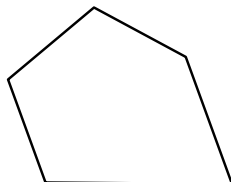
6)



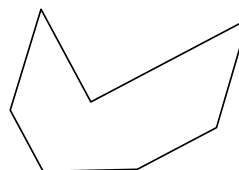
7)



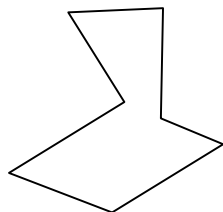
8)




9)



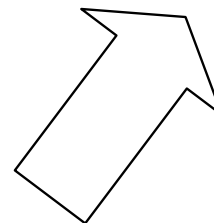
10)



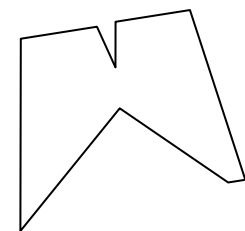
11)



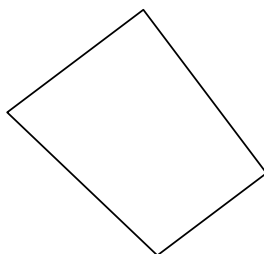
12)



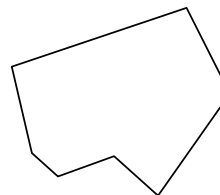
13)



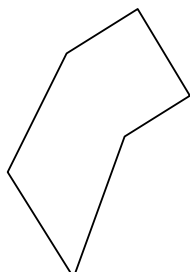
14)



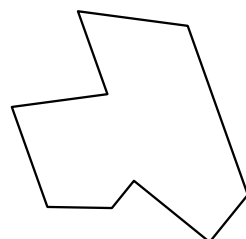
15)



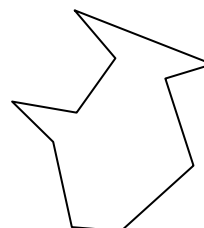
16)



17)



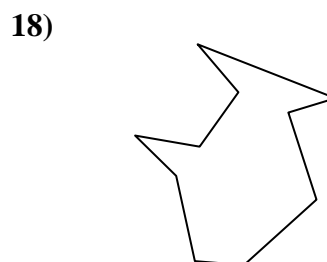
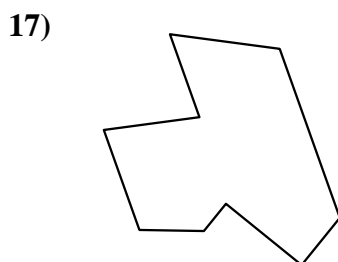
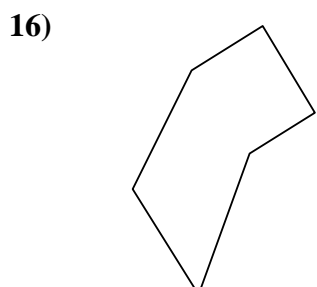
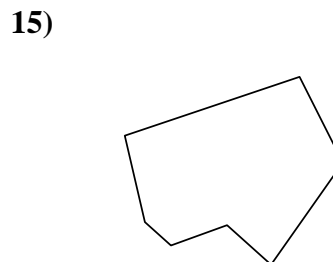
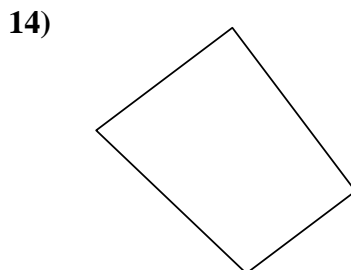
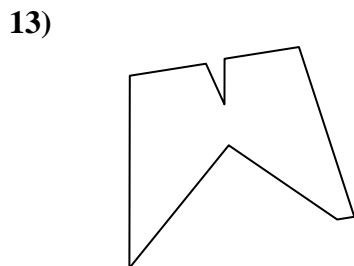
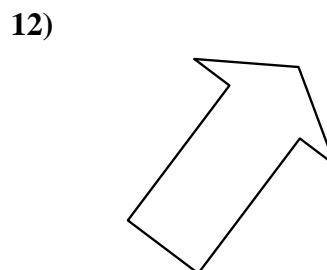
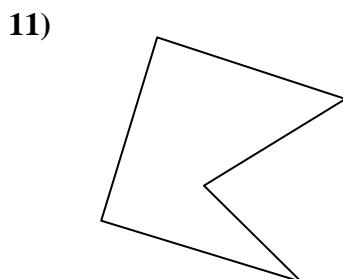
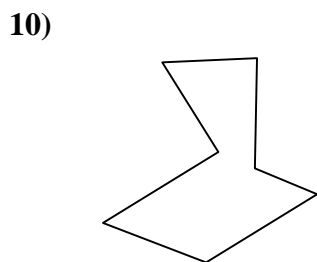

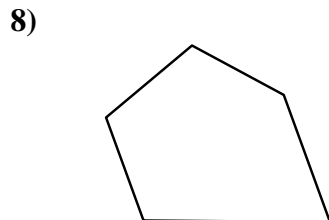
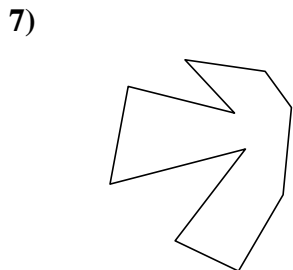
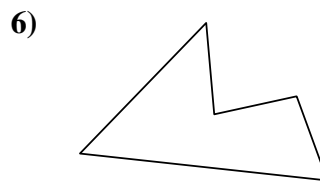

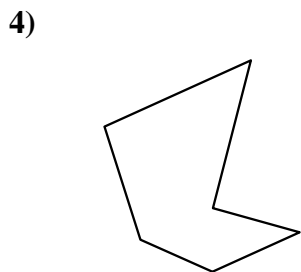
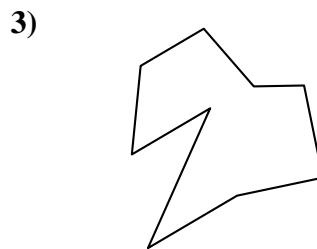

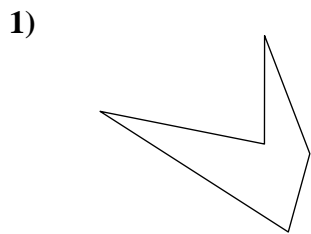
18)



- 1. _____
- 2. _____
- 3. _____
- 4. _____
- 5. _____
- 6. _____
- 7. _____
- 8. _____
- 9. _____
- 10. _____
- 11. _____
- 12. _____
- 13. _____
- 14. _____
- 15. _____
- 16. _____
- 17. _____
- 18. _____
- 19. _____
- 20. _____
- 21. _____



Identifica il tipo di forma rappresentata.



Risposte

1. Pentagono

2. Ettagono

3. Ennagono

4. Esagono

5. Ottagono

6. Pentagono

7. Decagono

8. Pentagono

9. Ettagono

10. Ettagono

11. Pentagono

12. Ettagono

13. Ennagono

14. Quadrilatero

15. Ettagono

16. Esagono

17. Ennagono

18. Decagono

19. Ennagono

20. Esagono

21. Ottagono