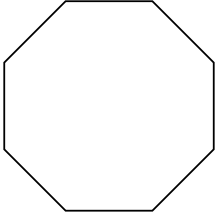


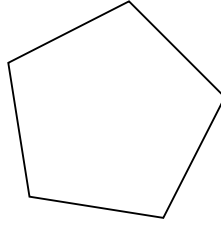


Identifica il tipo di forma rappresentata.

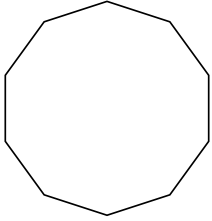
1)




2)



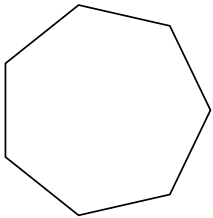
3)



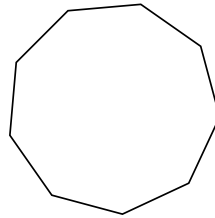
4)



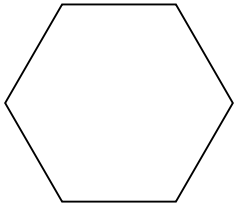
5)



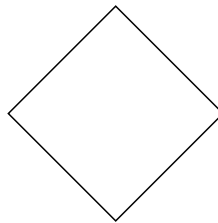
6)



7)



8)



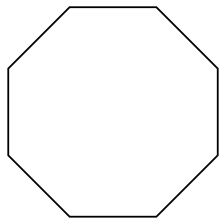
**Risposte**

- 1. \_\_\_\_\_
- 2. \_\_\_\_\_
- 3. \_\_\_\_\_
- 4. \_\_\_\_\_
- 5. \_\_\_\_\_
- 6. \_\_\_\_\_
- 7. \_\_\_\_\_
- 8. \_\_\_\_\_

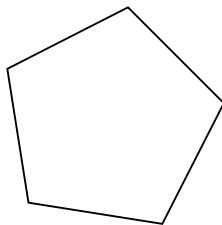


Identifica il tipo di forma rappresentata.

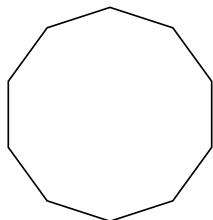
1)



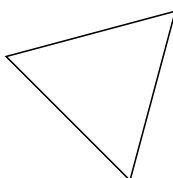
2)



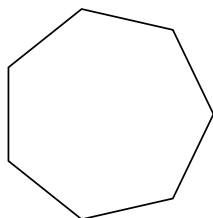
3)



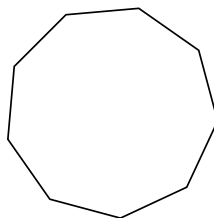
4)



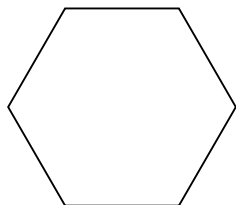
5)



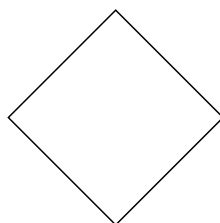
6)



7)



8)



**Risposte**

1. **Ottagono**

2. **Pentagono**

3. **Decagono**

4. **triangle**

5. **Ettagono**

6. **Ennagono**

7. **Esagono**

8. **Quadrilatero**