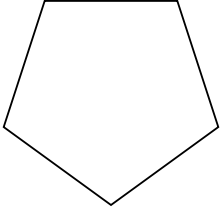


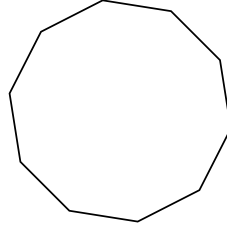


Identifica il tipo di forma rappresentata.

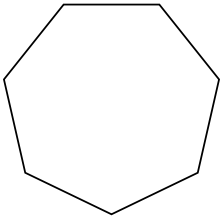
1)



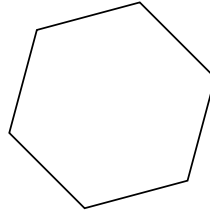
2)




3)



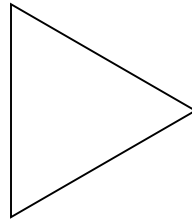
4)



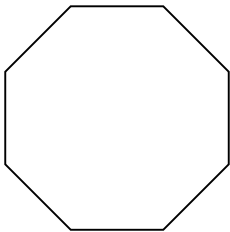
5)



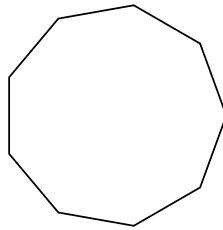
6)



7)



8)



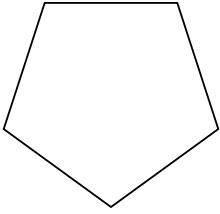
Risposte

- 1. _____
- 2. _____
- 3. _____
- 4. _____
- 5. _____
- 6. _____
- 7. _____
- 8. _____

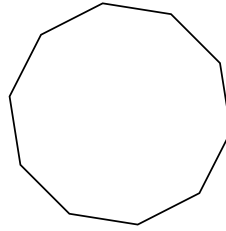


Identifica il tipo di forma rappresentata.

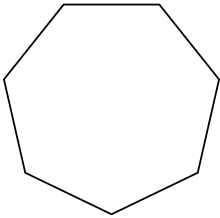
1)



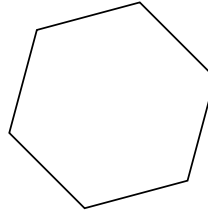
2)




3)



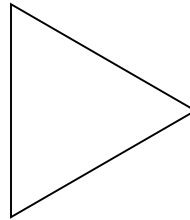
4)



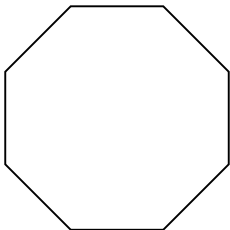
5)



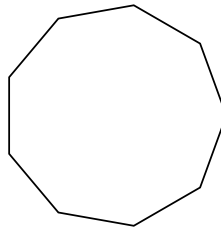
6)



7)



8)



Risposte

1. **Pentagono**

2. **Decagono**

3. **Ettagono**

4. **Esagono**

5. **Quadrilatero**

6. **triangle**

7. **Ottagono**

8. **Ennagono**