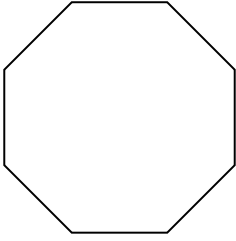


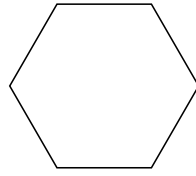


Identifica il tipo di forma rappresentata.


1)



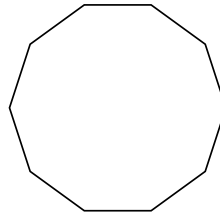
2)



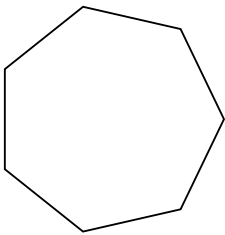
3)



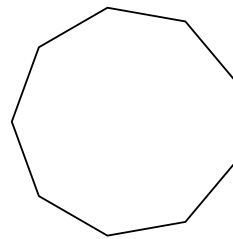
4)



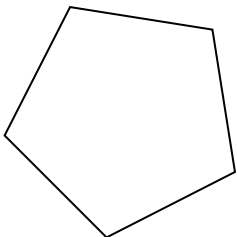
5)



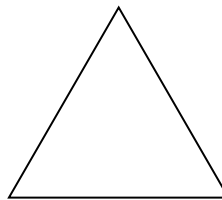
6)



7)



8)



**Risposte**

1. \_\_\_\_\_

2. \_\_\_\_\_

3. \_\_\_\_\_

4. \_\_\_\_\_

5. \_\_\_\_\_

6. \_\_\_\_\_

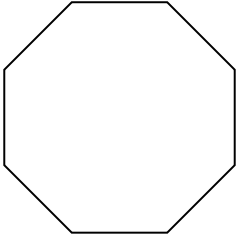
7. \_\_\_\_\_

8. \_\_\_\_\_

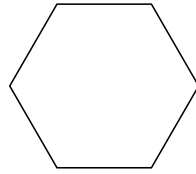


Identifica il tipo di forma rappresentata.


1)



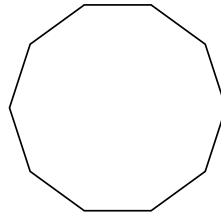
2)



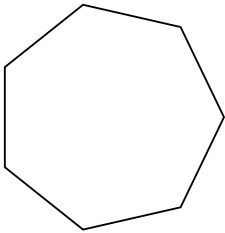
3)



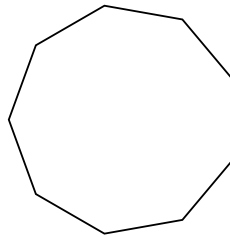
4)



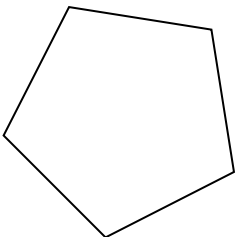
5)



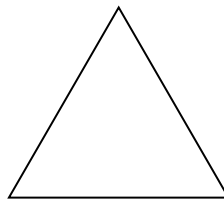
6)



7)



8)



**Risposte**

1. **Ottagono**

2. **Esagono**

3. **Quadrilatero**

4. **Decagono**

5. **Ettagono**

6. **Ennagono**

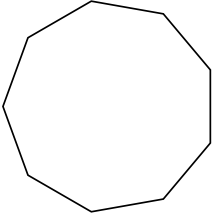
7. **Pentagono**

8. **triangle**

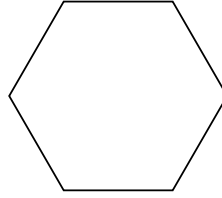


Identifica il tipo di forma rappresentata.

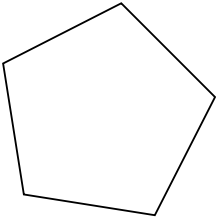
1)



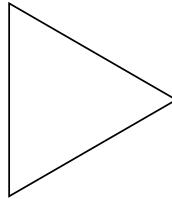
2)




3)



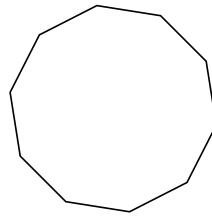
4)



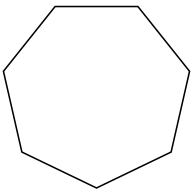
5)



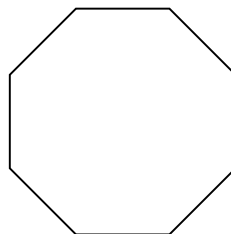
6)



7)



8)



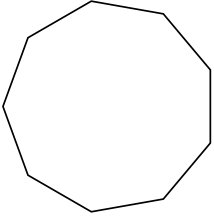
**Risposte**

- 1. \_\_\_\_\_
- 2. \_\_\_\_\_
- 3. \_\_\_\_\_
- 4. \_\_\_\_\_
- 5. \_\_\_\_\_
- 6. \_\_\_\_\_
- 7. \_\_\_\_\_
- 8. \_\_\_\_\_

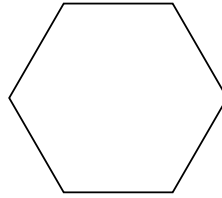


Identifica il tipo di forma rappresentata.

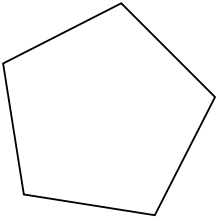
1)



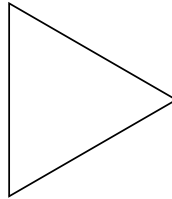
2)




3)



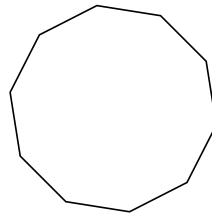
4)



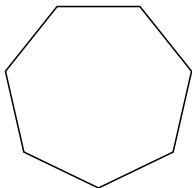
5)



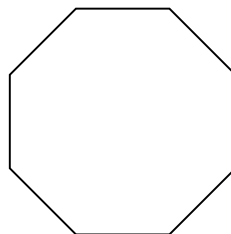
6)



7)



8)



**Risposte**

1. **Ennagono**

2. **Esagono**

3. **Pentagono**

4. **triangle**

5. **Quadrilatero**

6. **Decagono**

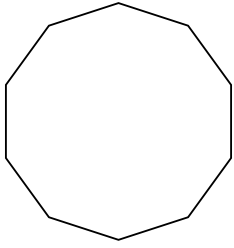
7. **Ettagono**

8. **Ottagono**

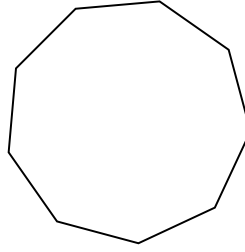


Identifica il tipo di forma rappresentata.

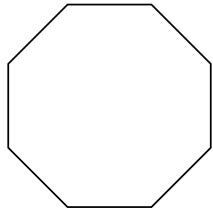
1)



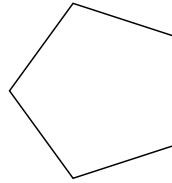
2)



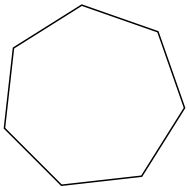
3)



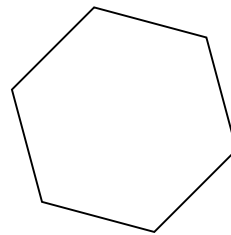
4)




5)




6)



7)



8)



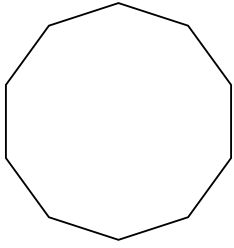
**Risposte**

- 1. \_\_\_\_\_
- 2. \_\_\_\_\_
- 3. \_\_\_\_\_
- 4. \_\_\_\_\_
- 5. \_\_\_\_\_
- 6. \_\_\_\_\_
- 7. \_\_\_\_\_
- 8. \_\_\_\_\_

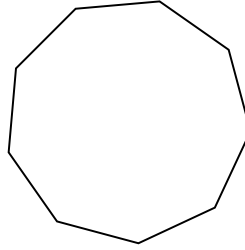


Identifica il tipo di forma rappresentata.

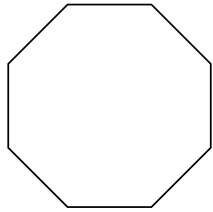
1)



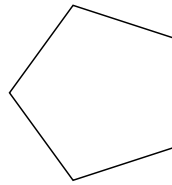
2)



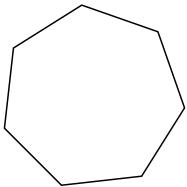
3)



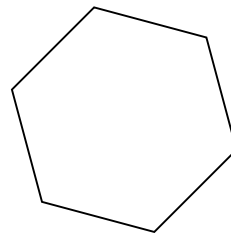
4)




5)




6)



7)



8)



**Risposte**

1. Decagono

2. Ennagono

3. Ottagono

4. Pentagono

5. Ettagono

6. Esagono

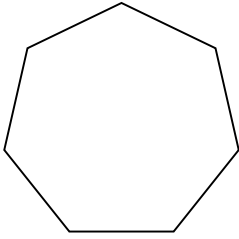
7. triangle

8. Quadrilatero

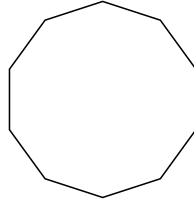


Identifica il tipo di forma rappresentata.

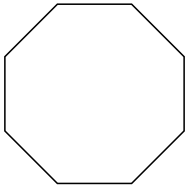
1)



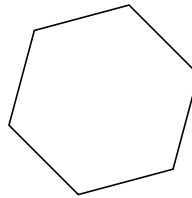
2)



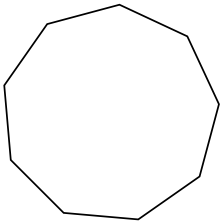
3)



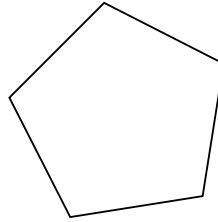
4)



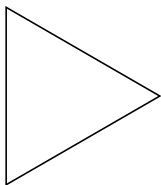
5)




6)



7)



8)



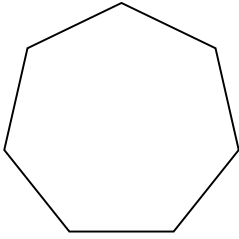
**Risposte**

- 1. \_\_\_\_\_
- 2. \_\_\_\_\_
- 3. \_\_\_\_\_
- 4. \_\_\_\_\_
- 5. \_\_\_\_\_
- 6. \_\_\_\_\_
- 7. \_\_\_\_\_
- 8. \_\_\_\_\_

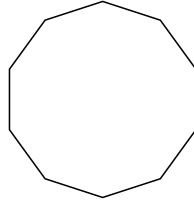


Identifica il tipo di forma rappresentata.

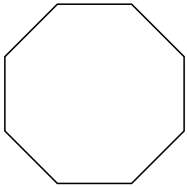
1)



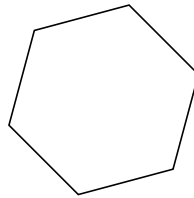
2)



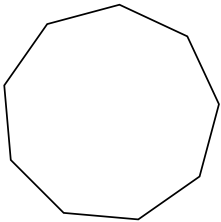
3)



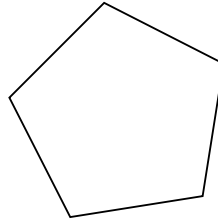
4)



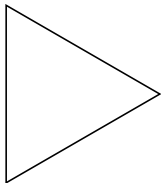
5)




6)



7)



8)



Risposte

1. Ettagono

2. Decagono

3. Ottagono

4. Esagono

5. Ennagono

6. Pentagono

7. triangle

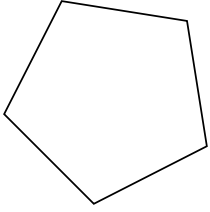
8. Quadrilatero



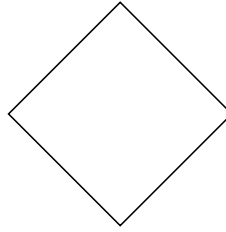


Identifica il tipo di forma rappresentata.

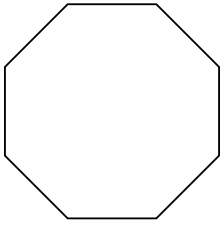
1)



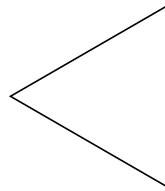
2)



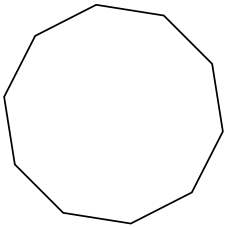
3)



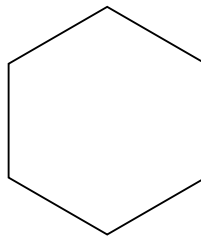
4)



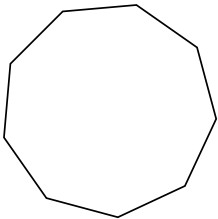
5)



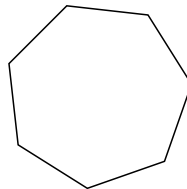
6)



7)



8)



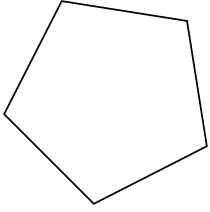
**Risposte**

- 1. \_\_\_\_\_
- 2. \_\_\_\_\_
- 3. \_\_\_\_\_
- 4. \_\_\_\_\_
- 5. \_\_\_\_\_
- 6. \_\_\_\_\_
- 7. \_\_\_\_\_
- 8. \_\_\_\_\_

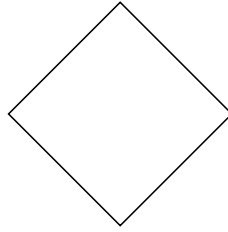


Identifica il tipo di forma rappresentata.

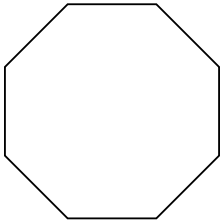
1)



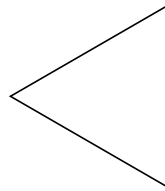
2)



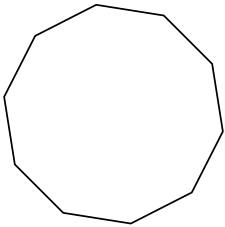
3)



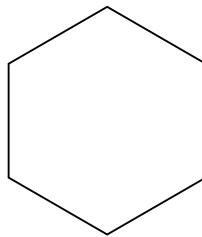
4)



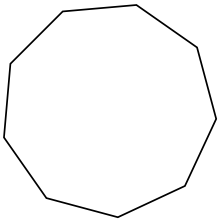
5)



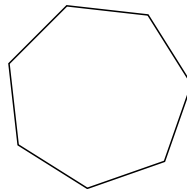
6)



7)



8)



**Risposte**

1. **Pentagono**

2. **Quadrilatero**

3. **Ottagono**

4. **triangle**

5. **Decagono**

6. **Esagono**

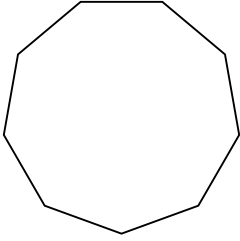
7. **Ennagono**

8. **Ettagono**

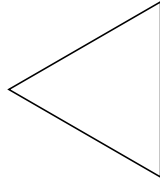


Identifica il tipo di forma rappresentata.

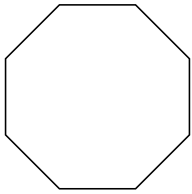
1)



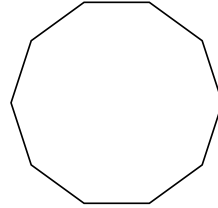
2)




3)



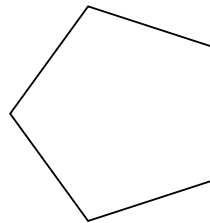
4)



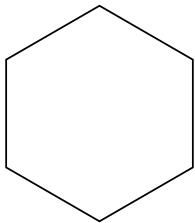
5)



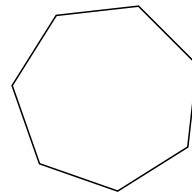
6)



7)



8)



**Risposte**

1. \_\_\_\_\_

2. \_\_\_\_\_

3. \_\_\_\_\_

4. \_\_\_\_\_

5. \_\_\_\_\_

6. \_\_\_\_\_

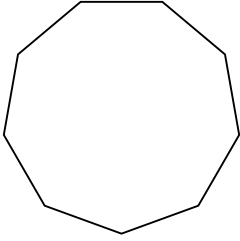
7. \_\_\_\_\_

8. \_\_\_\_\_

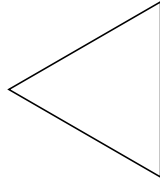


Identifica il tipo di forma rappresentata.

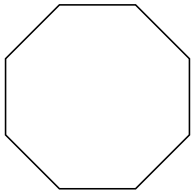
1)



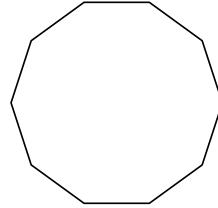
2)




3)



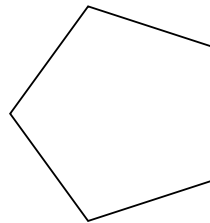
4)



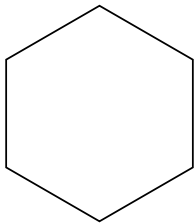
5)



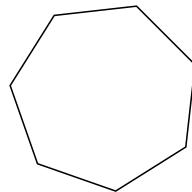
6)



7)



8)



**Risposte**

1. **Ennagono**

2. **triangle**

3. **Ottagono**

4. **Decagono**

5. **Quadrilatero**

6. **Pentagono**

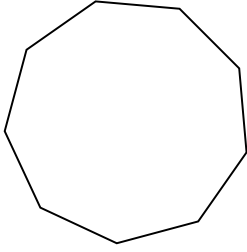
7. **Esagono**

8. **Ettagono**

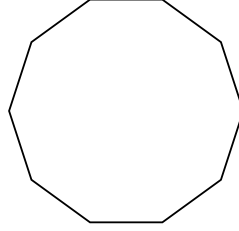


Identifica il tipo di forma rappresentata.

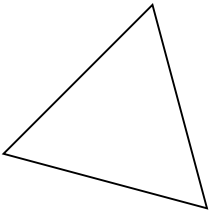
1)



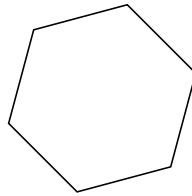
2)



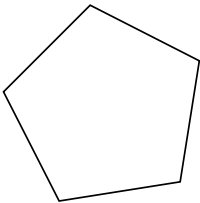
3)



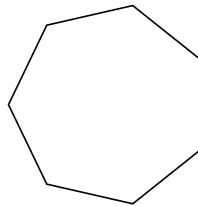
4)



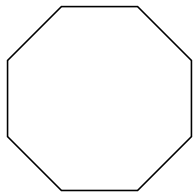
5)




6)



7)



8)



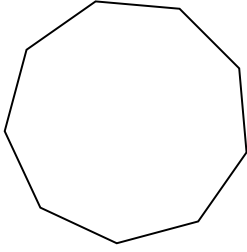
**Risposte**

- 1. \_\_\_\_\_
- 2. \_\_\_\_\_
- 3. \_\_\_\_\_
- 4. \_\_\_\_\_
- 5. \_\_\_\_\_
- 6. \_\_\_\_\_
- 7. \_\_\_\_\_
- 8. \_\_\_\_\_

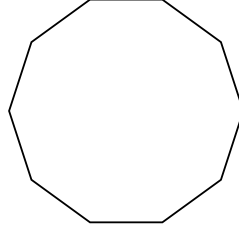


Identifica il tipo di forma rappresentata.


1)



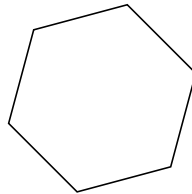
2)



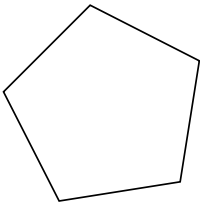
3)



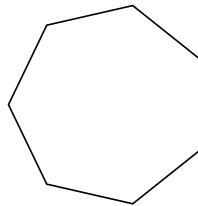
4)



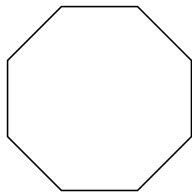
5)




6)



7)



8)



Risposte

1. Ennagono

2. Decagono

3. triangle

4. Esagono

5. Pentagono

6. Ettagono

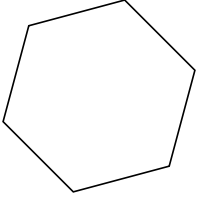
7. Ottagono

8. Quadrilatero

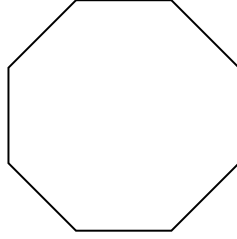


Identifica il tipo di forma rappresentata.

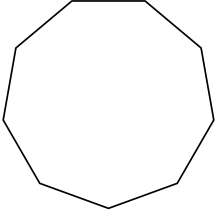
1)



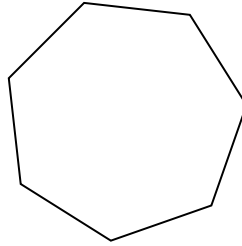
2)




3)



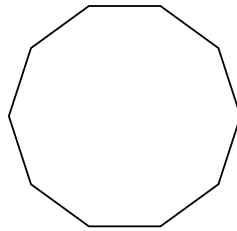
4)




5)



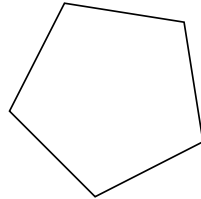
6)



7)



8)



**Risposte**

1. \_\_\_\_\_

2. \_\_\_\_\_

3. \_\_\_\_\_

4. \_\_\_\_\_

5. \_\_\_\_\_

6. \_\_\_\_\_

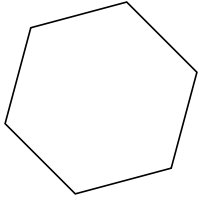
7. \_\_\_\_\_

8. \_\_\_\_\_

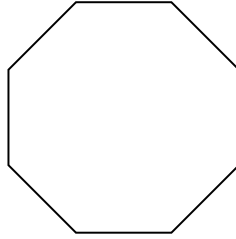


Identifica il tipo di forma rappresentata.

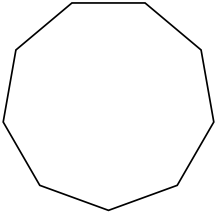
1)



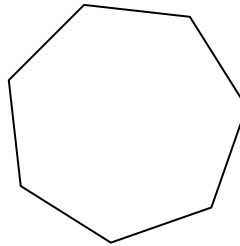
2)




3)



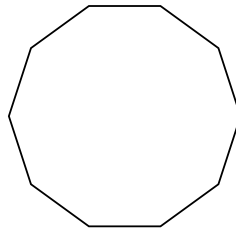
4)



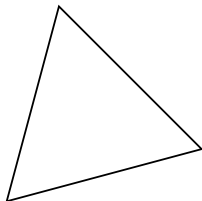
5)



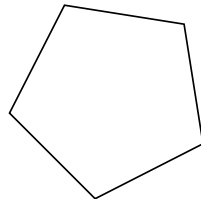
6)



7)



8)



**Risposte**

1. **Esagono**

2. **Ottagono**

3. **Ennagono**

4. **Ettagono**

5. **Quadrilatero**

6. **Decagono**

7. **triangle**

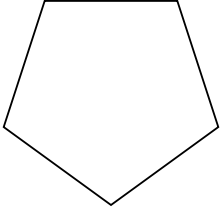
8. **Pentagono**



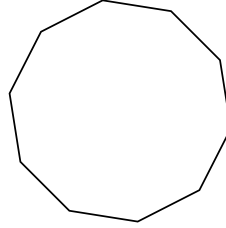


Identifica il tipo di forma rappresentata.

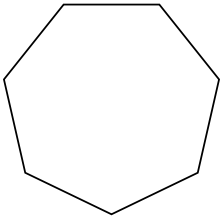
1)



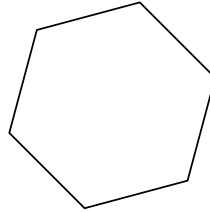
2)




3)



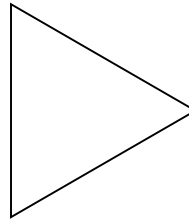
4)



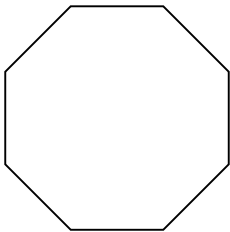
5)



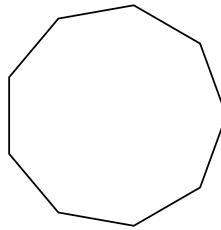
6)



7)



8)



**Risposte**

1. \_\_\_\_\_

2. \_\_\_\_\_

3. \_\_\_\_\_

4. \_\_\_\_\_

5. \_\_\_\_\_

6. \_\_\_\_\_

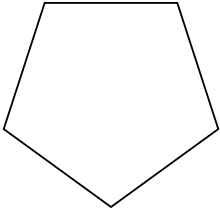
7. \_\_\_\_\_

8. \_\_\_\_\_

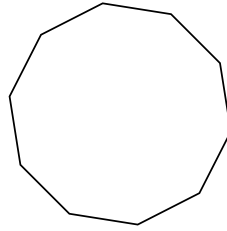


Identifica il tipo di forma rappresentata.

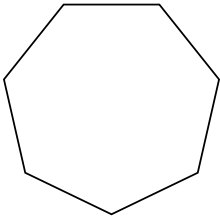
1)



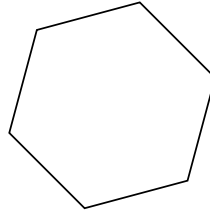
2)




3)



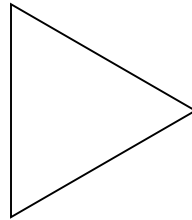
4)



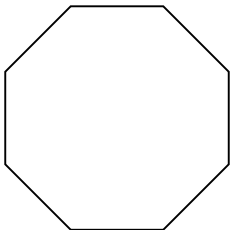
5)



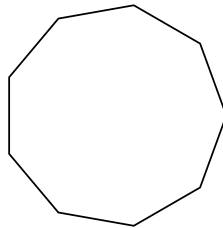
6)



7)



8)



**Risposte**

1. **Pentagono**

2. **Decagono**

3. **Ettagono**

4. **Esagono**

5. **Quadrilatero**

6. **triangle**

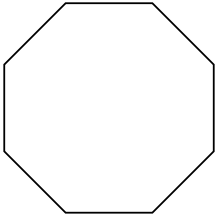
7. **Ottagono**

8. **Ennagono**

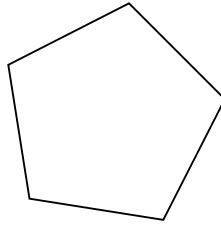


Identifica il tipo di forma rappresentata.

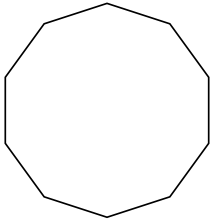
1)




2)



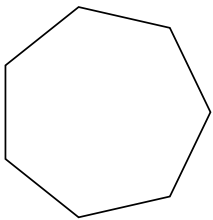
3)



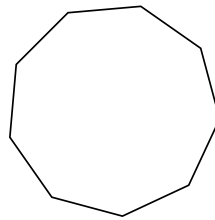
4)



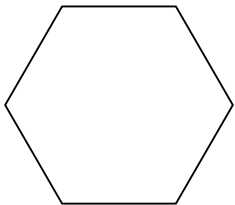
5)



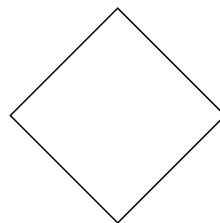
6)



7)



8)



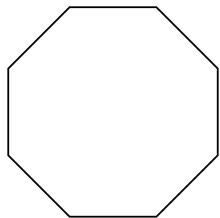
**Risposte**

- 1. \_\_\_\_\_
- 2. \_\_\_\_\_
- 3. \_\_\_\_\_
- 4. \_\_\_\_\_
- 5. \_\_\_\_\_
- 6. \_\_\_\_\_
- 7. \_\_\_\_\_
- 8. \_\_\_\_\_

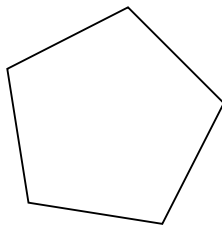


Identifica il tipo di forma rappresentata.

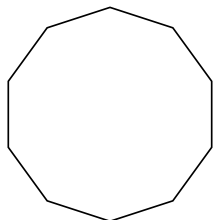
1)



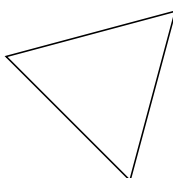
2)



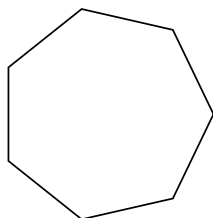
3)



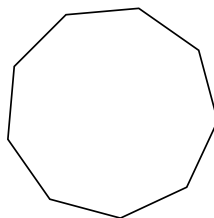
4)



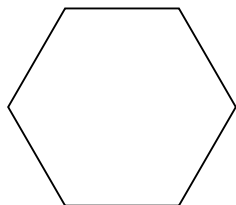
5)



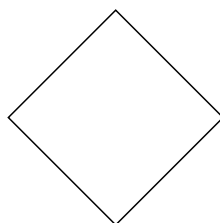
6)



7)



8)



**Risposte**

1. **Ottagono**

2. **Pentagono**

3. **Decagono**

4. **triangle**

5. **Ettagono**

6. **Ennagono**

7. **Esagono**

8. **Quadrilatero**