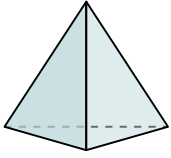




Determina quale scelta descrive CORREETTAMENTE la forma mostrata.


Risposte

1)



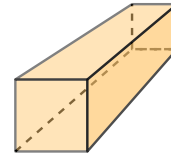
- A. cylinder
- B. triangular prism
- C. sphere
- D. triangular pyramid

2)




- A. cylinder
- B. cube
- C. rectangular prism
- D. cone

3)



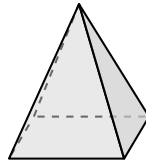
- A. triangular pyramid
- B. sphere
- C. rectangular prism
- D. cube

4)



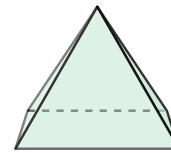
- A. rectangular prism
- B. sphere
- C. triangular prism
- D. cylinder

5)



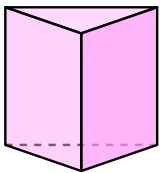
- A. cone
- B. cylinder
- C. triangular prism
- D. rectangular pyramid

6)



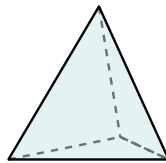
- A. cylinder
- B. sphere
- C. rectangular pyramid
- D. triangular prism

7)



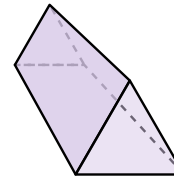
- A. triangular pyramid
- B. cone
- C. triangular prism
- D. rectangular pyramid

8)



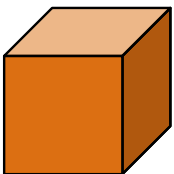
- A. rectangular prism
- B. cylinder
- C. triangular pyramid
- D. cone

9)



- A. sphere
- B. rectangular pyramid
- C. triangular prism
- D. cone

10)



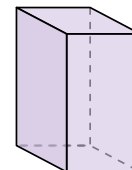
- A. cone
- B. sphere
- C. cube
- D. triangular prism

11)



- A. cone
- B. cylinder
- C. rectangular prism
- D. rectangular pyramid

12)



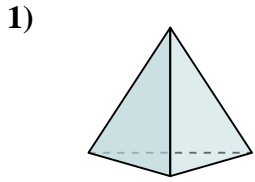
- A. cylinder
- B. triangular prism
- C. rectangular prism
- D. cone

- 1. _____
- 2. _____
- 3. _____
- 4. _____
- 5. _____
- 6. _____
- 7. _____
- 8. _____
- 9. _____
- 10. _____
- 11. _____
- 12. _____

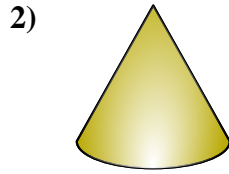


Determina quale scelta descrive CORREETTAMENTE la forma mostrata.

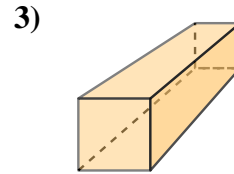
Risposte



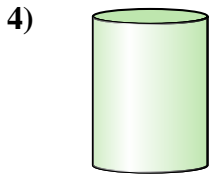
- A. cylinder
- B. triangular prism
- C. sphere
- D. triangular pyramid



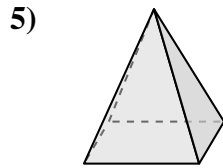
- A. cylinder
- B. cube
- C. rectangular prism
- D. cone



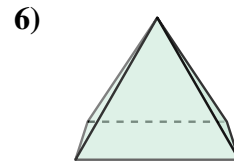
- A. triangular pyramid
- B. sphere
- C. rectangular prism
- D. cube



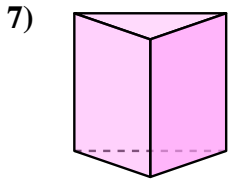
- A. rectangular prism
- B. sphere
- C. triangular prism
- D. cylinder



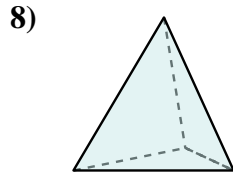
- A. cone
- B. cylinder
- C. triangular prism
- D. rectangular pyramid



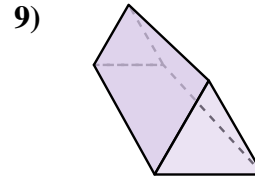
- A. cylinder
- B. sphere
- C. rectangular pyramid
- D. triangular prism



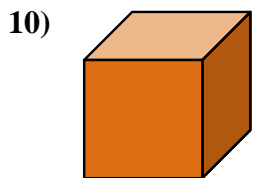
- A. triangular pyramid
- B. cone
- C. triangular prism
- D. rectangular pyramid



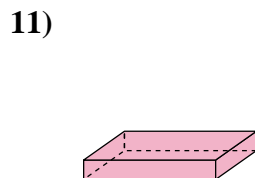
- A. rectangular prism
- B. cylinder
- C. triangular pyramid
- D. cone



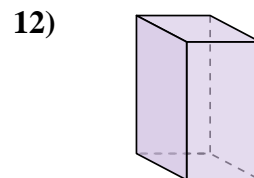
- A. sphere
- B. rectangular pyramid
- C. triangular prism
- D. cone



- A. cone
- B. sphere
- C. cube
- D. triangular prism



- A. cone
- B. cylinder
- C. rectangular prism
- D. rectangular pyramid



- A. cylinder
- B. triangular prism
- C. rectangular prism
- D. cone

- 1. **D**
- 2. **D**
- 3. **C**
- 4. **D**
- 5. **D**
- 6. **C**
- 7. **C**
- 8. **C**
- 9. **C**
- 10. **C**
- 11. **C**
- 12. **C**