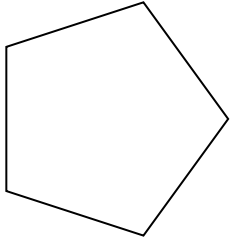


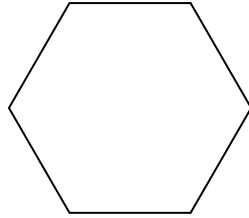


Determina se le forme rappresentate sono regolari o irregolari.

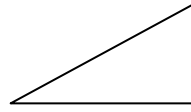
1)



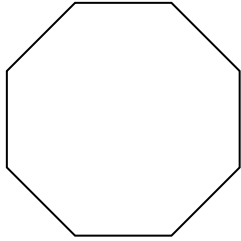
2)



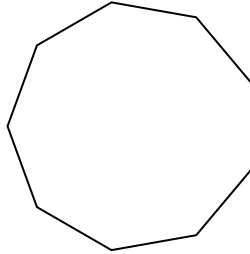
3)



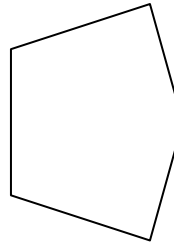
4)



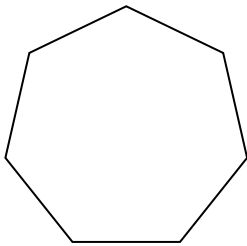
5)



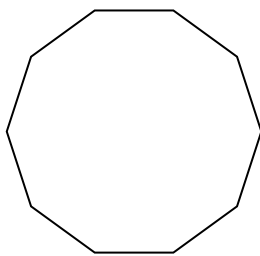
6)



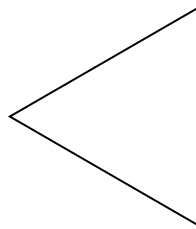
7)




8)




9)



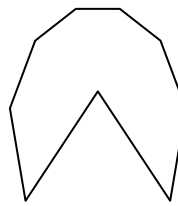
10)




11)




12)



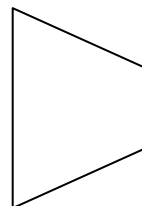
13)



14)



15)



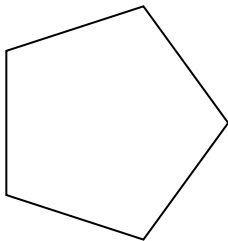
Risposte

- 1. _____
- 2. _____
- 3. _____
- 4. _____
- 5. _____
- 6. _____
- 7. _____
- 8. _____
- 9. _____
- 10. _____
- 11. _____
- 12. _____
- 13. _____
- 14. _____
- 15. _____

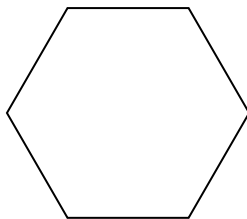


Determina se le forme rappresentate sono regolari o irregolari.

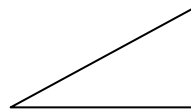
1)



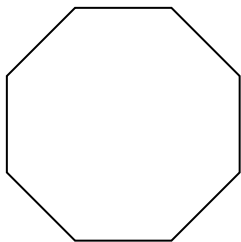
2)



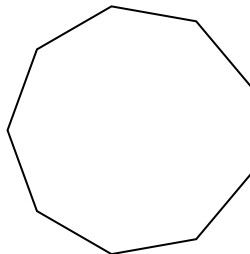
3)



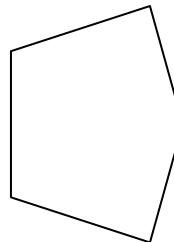
4)



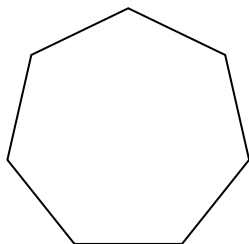
5)



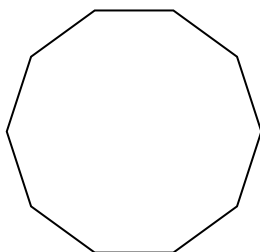
6)



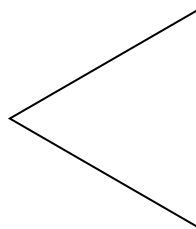
7)




8)




9)



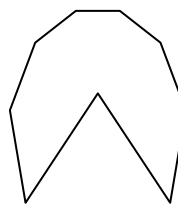
10)




11)




12)



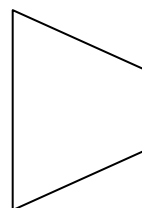
13)



14)



15)



Risposte

1. Regolare

2. Regolare

3. Irregolare

4. Regolare

5. Regolare

6. Irregolare

7. Regolare

8. Regolare

9. Regolare

10. Irregolare

11. Regolare

12. Irregolare

13. Irregolare

14. Irregolare

15. Irregolare