


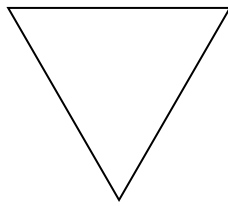


Determina se le forme rappresentate sono regolari o irregolari.

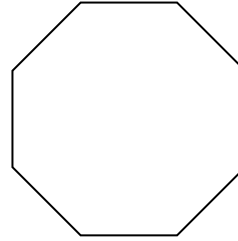
1)



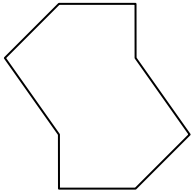
2)



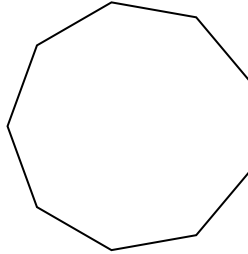
3)



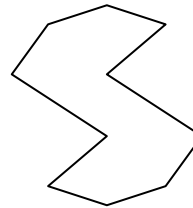
4)




5)




6)



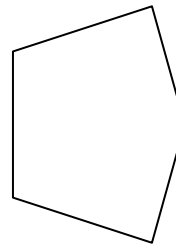
7)




8)



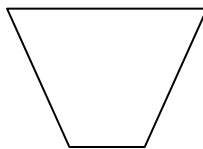
9)



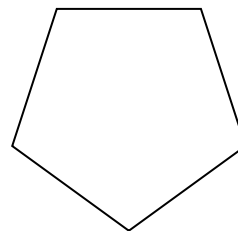
10)



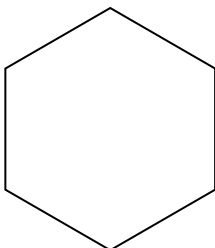
11)



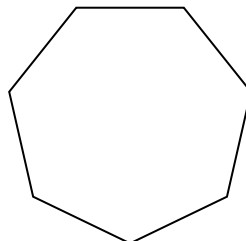
12)



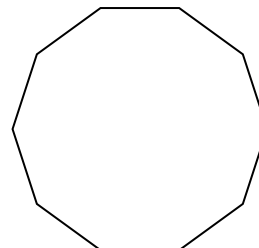
13)



14)



15)




Risposte

- 1. _____
- 2. _____
- 3. _____
- 4. _____
- 5. _____
- 6. _____
- 7. _____
- 8. _____
- 9. _____
- 10. _____
- 11. _____
- 12. _____
- 13. _____
- 14. _____
- 15. _____

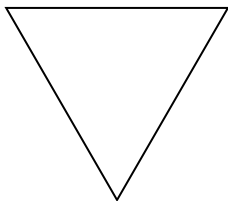


Determina se le forme rappresentate sono regolari o irregolari.

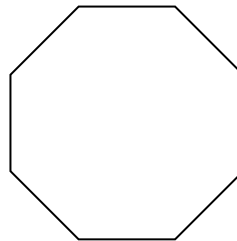
1)



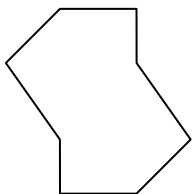
2)



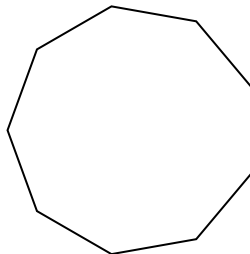
3)



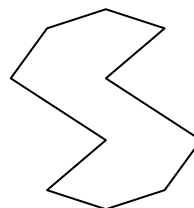
4)




5)




6)



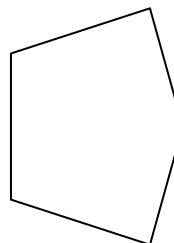
7)




8)



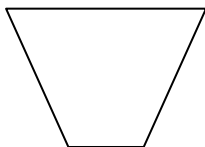
9)



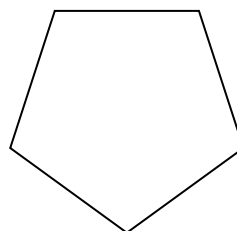
10)



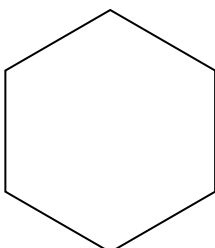
11)



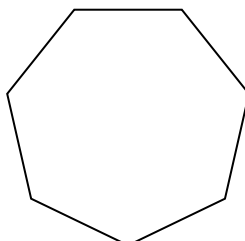
12)



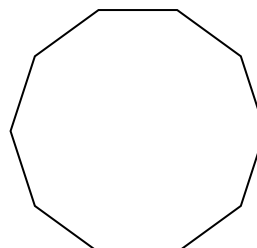
13)



14)



15)



Risposte

1. **Regolare**

2. **Regolare**

3. **Regolare**

4. **Irregolare**

5. **Regolare**

6. **Irregolare**

7. **Irregolare**

8. **Irregolare**

9. **Irregolare**

10. **Irregolare**

11. **Irregolare**

12. **Regolare**

13. **Regolare**

14. **Regolare**

15. **Regolare**