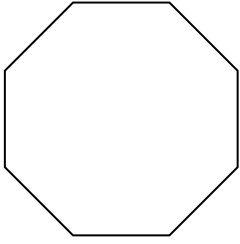





Determina se le forme rappresentate sono regolari o irregolari.

Risposte

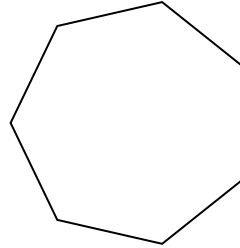
1)



2)



3)




1. _____

2. _____


3. _____

4. _____

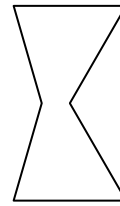
4)



5)



6)



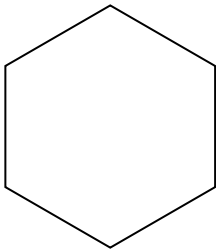
5. _____

6. _____

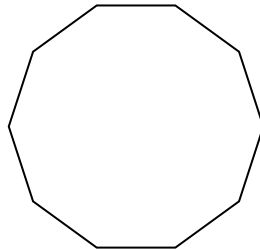
7. _____

8. _____


7)



8)



9)



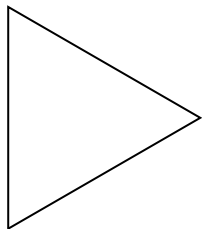
9. _____

10. _____


11. _____

12. _____

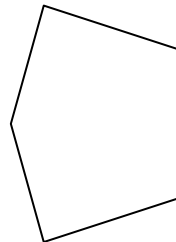
10)



11)



12)




13. _____

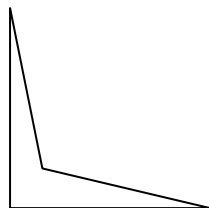
14. _____

15. _____

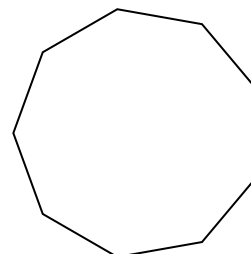
13)



14)



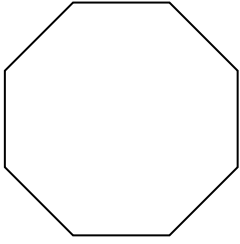
15)






Determina se le forme rappresentate sono regolari o irregolari.

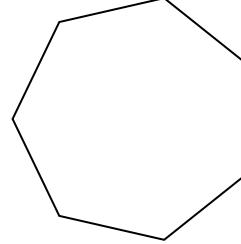
1)




2)




3)



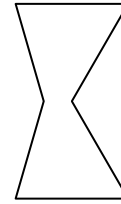
4)



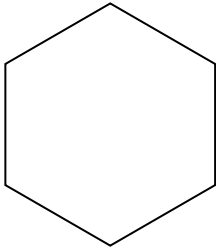
5)



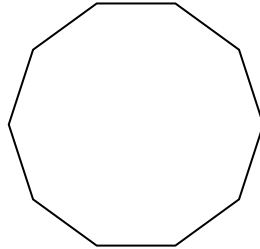
6)




7)



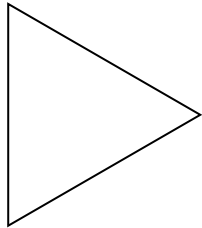
8)




9)



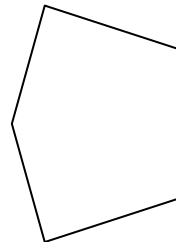
10)




11)



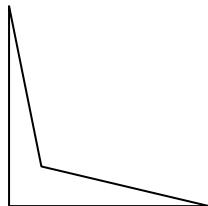
12)



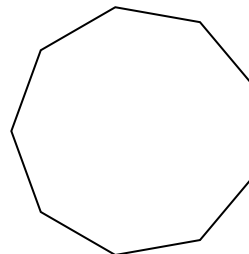
13)



14)



15)



Risposte

1. Regolare

2. Irregolare

3. Regolare

4. Irregolare

5. Irregolare

6. Irregolare

7. Regolare

8. Regolare

9. Irregolare

10. Regolare

11. Regolare

12. Irregolare

13. Irregolare

14. Irregolare

15. Regolare