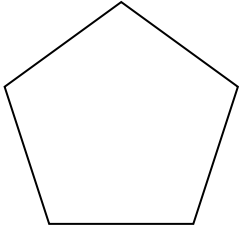




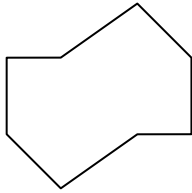
Determina se le forme rappresentate sono regolari o irregolari.

Risposte

1)



2)

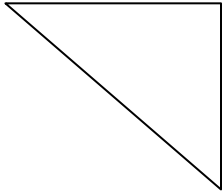


3)

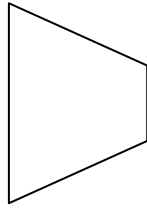


1. _____

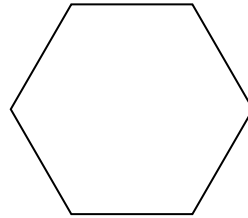
4)



5)




6)




2. _____

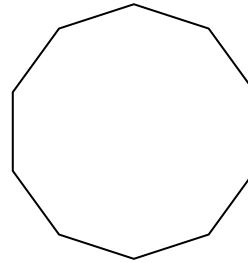
7)



8)



9)



3. _____

4. _____

5. _____

6. _____

7. _____

8. _____

9. _____

10. _____

11. _____

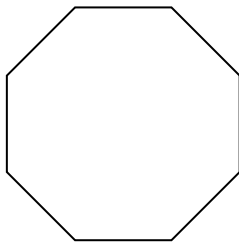
12. _____

13. _____


14. _____

15. _____

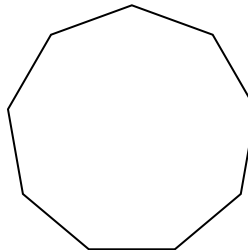
10)



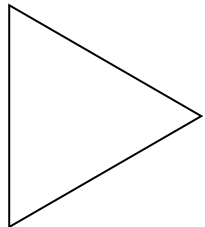
11)




12)



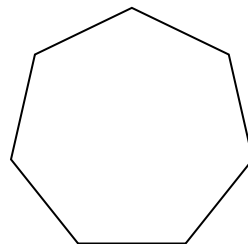
13)



14)



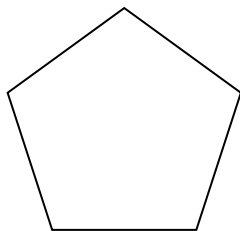
15)



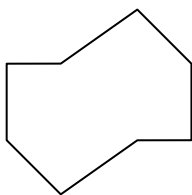


Determina se le forme rappresentate sono regolari o irregolari.

1)



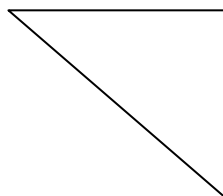
2)



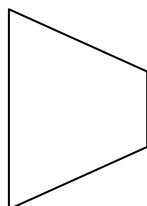
3)



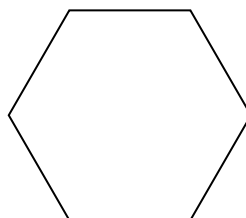
4)




5)




6)



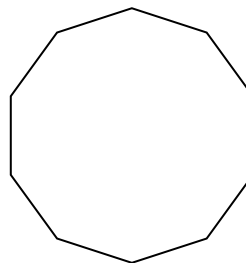
7)



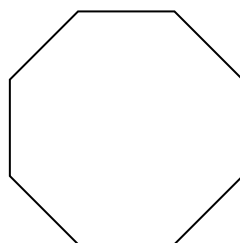
8)




9)



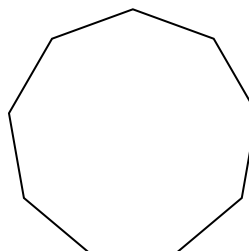
10)



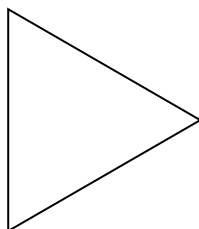
11)




12)



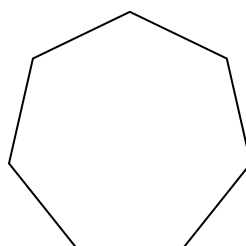
13)



14)



15)



Risposte

1. Regolare

2. Irregolare

3. Regolare

4. Irregolare

5. Irregolare

6. Regolare

7. Irregolare

8. Irregolare

9. Regolare

10. Regolare

11. Irregolare

12. Regolare

13. Regolare

14. Irregolare

15. Regolare