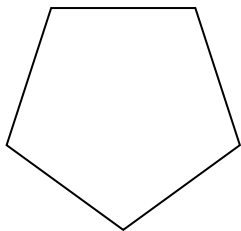


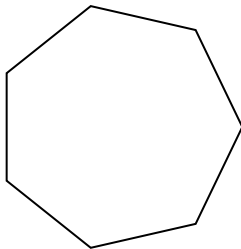


Determina se le forme rappresentate sono regolari o irregolari.

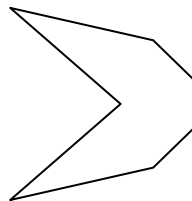
1)




2)



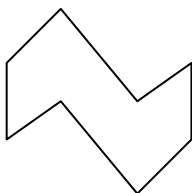
3)



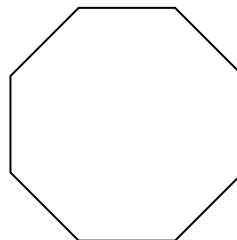
4)



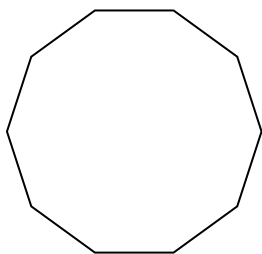
5)



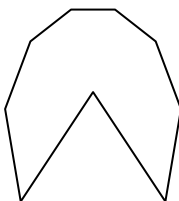
6)



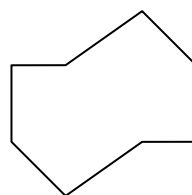
7)



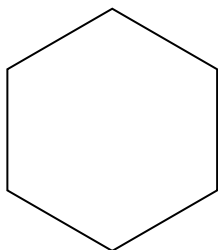
8)



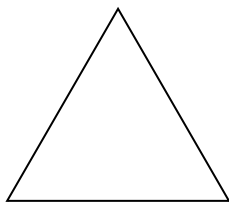
9)



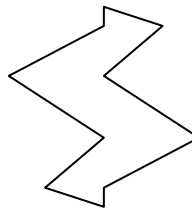
10)



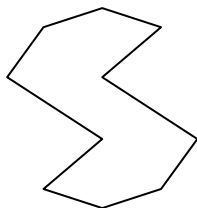
11)



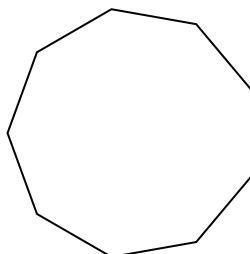
12)




13)



14)



15)


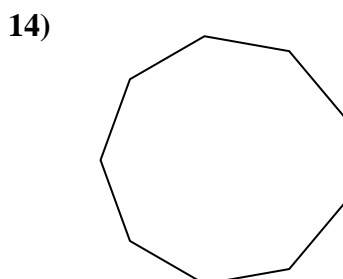
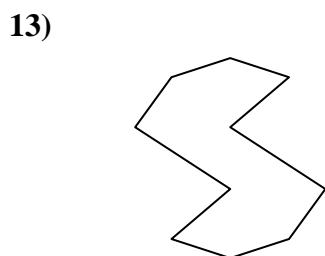
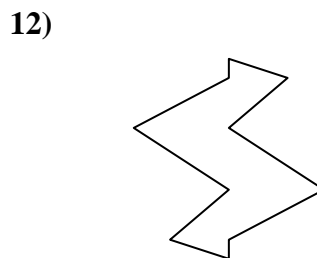
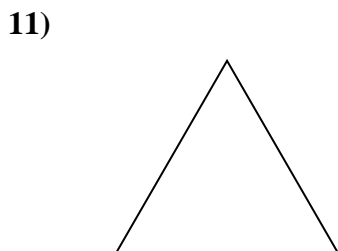
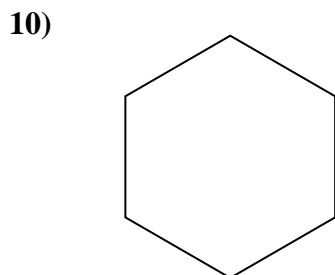
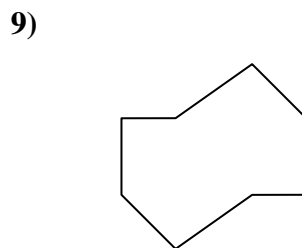
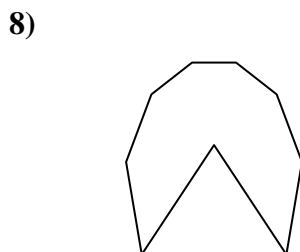
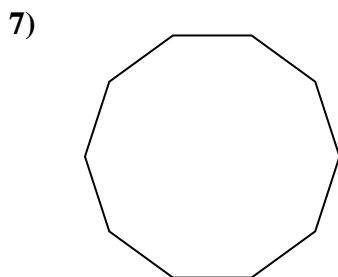
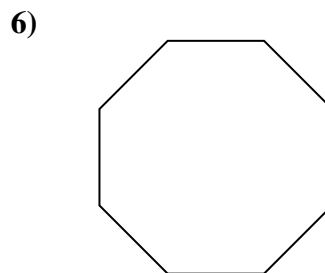
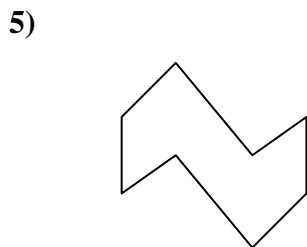
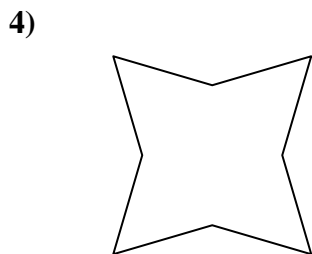
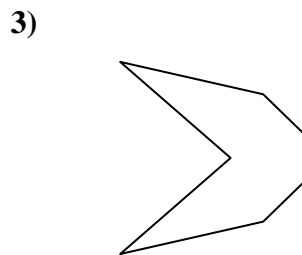
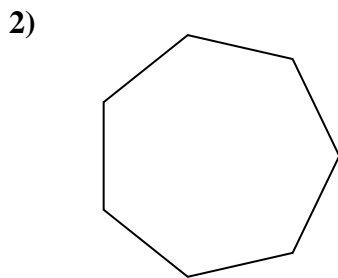
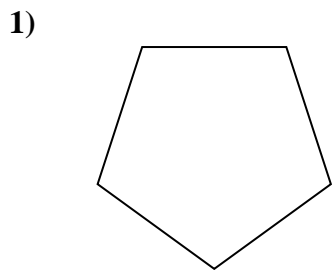


Risposte

- 1. _____
- 2. _____
- 3. _____
- 4. _____
- 5. _____
- 6. _____
- 7. _____
- 8. _____
- 9. _____
- 10. _____
- 11. _____
- 12. _____
- 13. _____
- 14. _____
- 15. _____



Determina se le forme rappresentate sono regolari o irregolari.



Risposte

1. Regolare

2. Regolare

3. Irregolare

4. Irregolare

5. Irregolare

6. Regolare

7. Regolare

8. Irregolare

9. Irregolare

10. Regolare

11. Regolare

12. Irregolare

13. Irregolare

14. Regolare

15. Irregolare