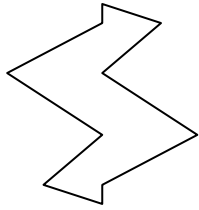




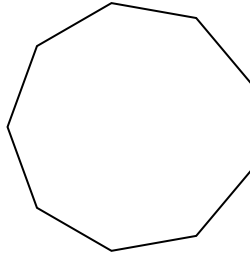
Determina se le forme rappresentate sono regolari o irregolari.

**Risposte**

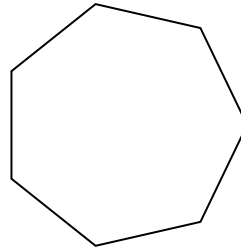
1)



2)

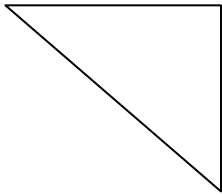


3)

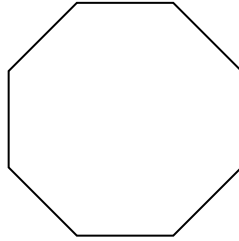


1. \_\_\_\_\_

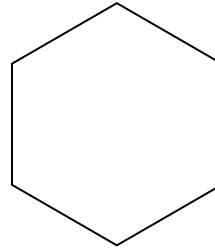
4)



5)



6)



2. \_\_\_\_\_

3. \_\_\_\_\_

4. \_\_\_\_\_


5. \_\_\_\_\_

6. \_\_\_\_\_

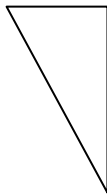
7. \_\_\_\_\_

8. \_\_\_\_\_

7)



8)



9)




9. \_\_\_\_\_

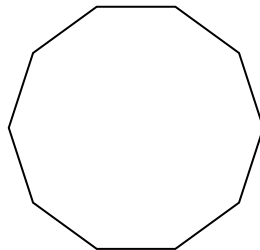
10. \_\_\_\_\_

11. \_\_\_\_\_

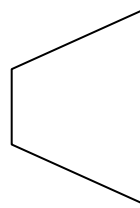
10)



11)



12)



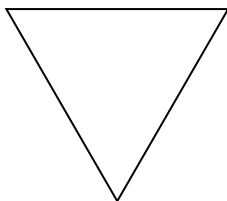
12. \_\_\_\_\_

13. \_\_\_\_\_

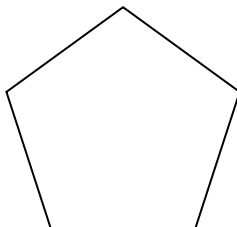
14. \_\_\_\_\_

15. \_\_\_\_\_

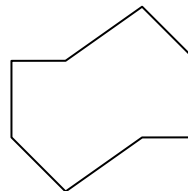
13)



14)




15)



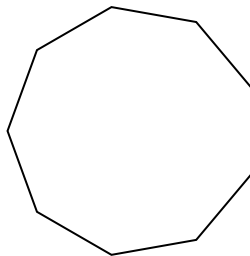


Determina se le forme rappresentate sono regolari o irregolari.

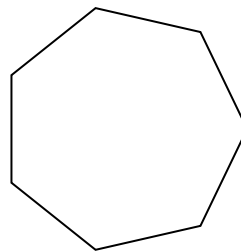
1)



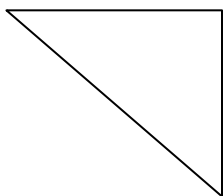
2)



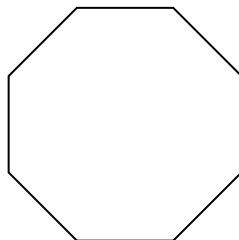
3)



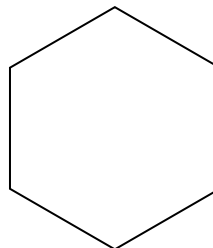
4)




5)



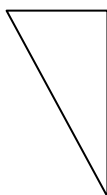
6)



7)




8)



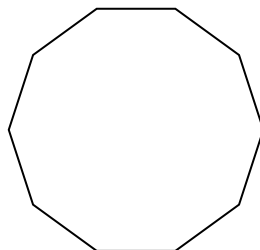
9)



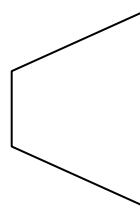
10)



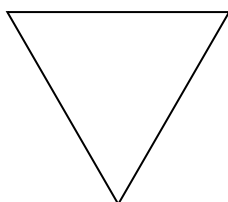
11)



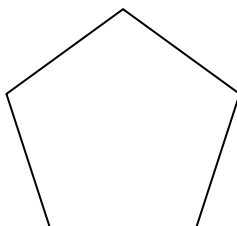
12)



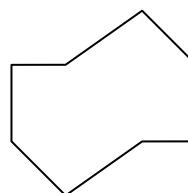
13)



14)



15)



**Risposte**

1. Irregolare

2. Regolare

3. Regolare

4. Irregolare

5. Regolare

6. Regolare

7. Regolare

8. Irregolare

9. Irregolare

10. Irregolare

11. Regolare

12. Irregolare

13. Regolare

14. Regolare

15. Irregolare