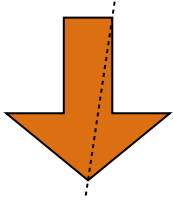


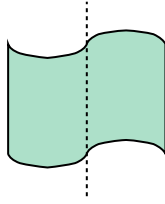


Determina se la linea che attraversa ogni figura è un linea di simmetria.

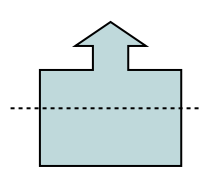
Es)



1)



2)



Risposte

Es. **no**

1. _____

2. _____

3. _____

4. _____

5. _____

6. _____

7. _____

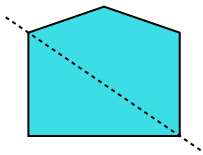
8. _____

9. _____

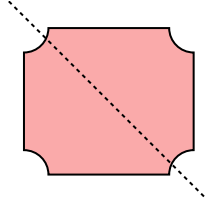
10. _____

11. _____

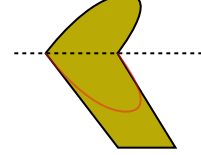
3)



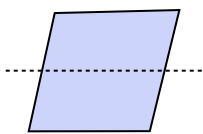
4)



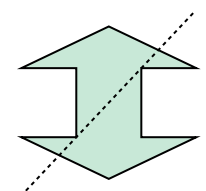
5)



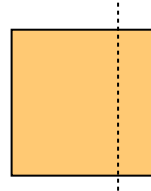
6)



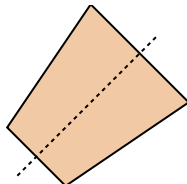
7)



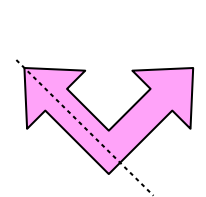
8)



9)



10)



11)

