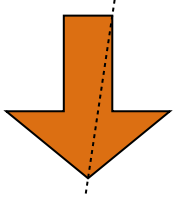


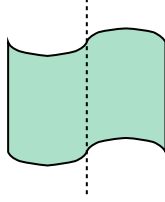


Determina se la linea che attraversa ogni figura è un linea di simmetria.

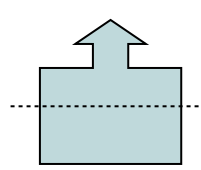
Es)



1)



2)



Risposte

Es. **no**

1. _____

2. _____

3. _____

4. _____

5. _____

6. _____

7. _____

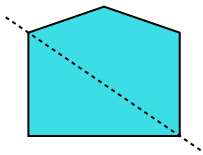
8. _____

9. _____

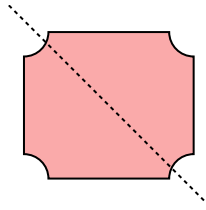
10. _____

11. _____

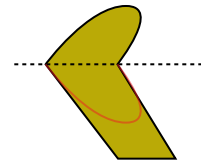
3)



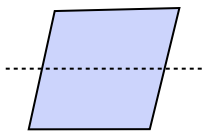
4)



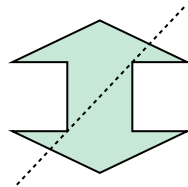
5)



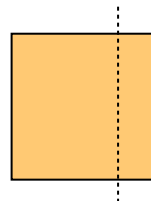
6)



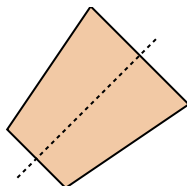
7)



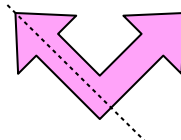
8)



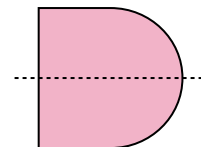
9)



10)



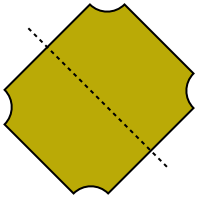
11)



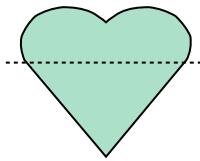


Determina se la linea che attraversa ogni figura è un linea di simmetria.

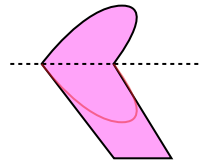
Es)



1)



2)



Risposte

Es. si

1. _____

2. _____

3. _____

4. _____

5. _____

6. _____

7. _____

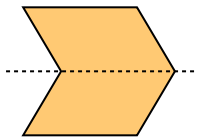
8. _____

9. _____


10. _____

11. _____

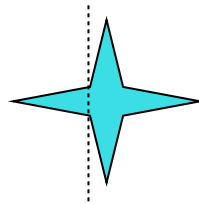
3)



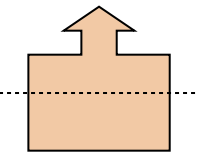
4)



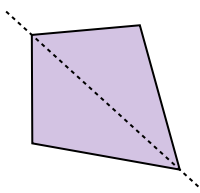
5)



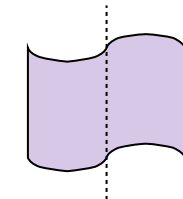
6)



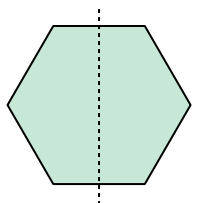
7)



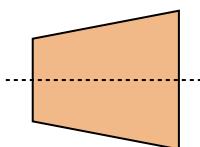
8)



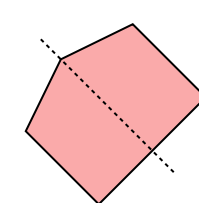
9)



10)



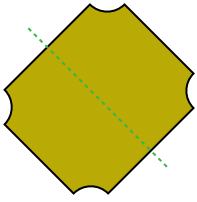
11)



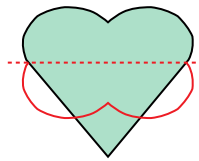


Determina se la linea che attraversa ogni figura è un linea di simmetria.

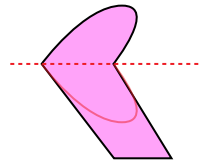
Es)



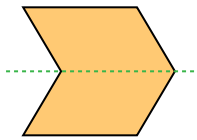
1)



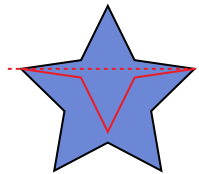
2)



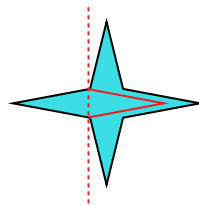
3)



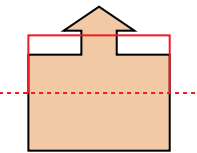
4)



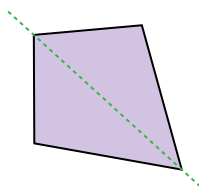
5)



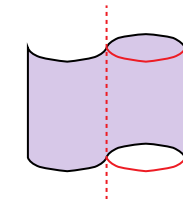
6)



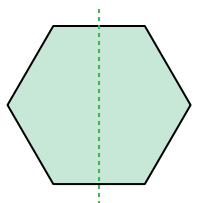
7)



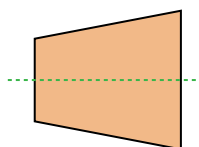
8)



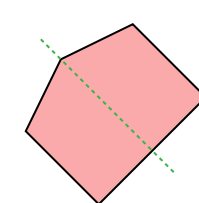
9)



10)



11)



Risposte

Es. **si**

1. **no**

2. **no**

3. **si**

4. **no**

5. **no**

6. **no**

7. **si**

8. **no**

9. **si**

10. **si**

11. **si**

