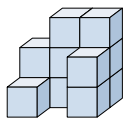




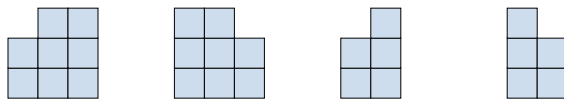
Risolvi ogni problema.

Risposte

1) Guardando la figura in 3d da dietro, cosa vedresti?

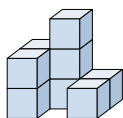


A. B. C. D.

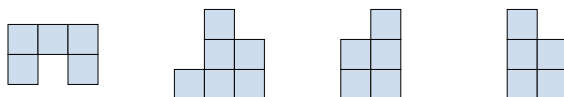


1. _____

2) Guardando la figura in 3d da dietro, cosa vedresti?

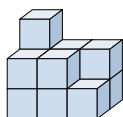


A. B. C. D.

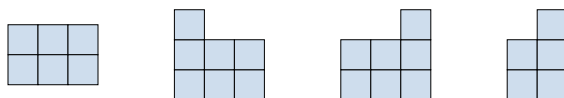


2. _____

3) Guardando la figura in 3d da dietro, cosa vedresti?

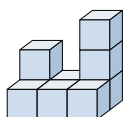


A. B. C. D.



3. _____

4) Guardando la figura in 3d dal lato sinistro, cosa vedresti?

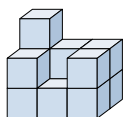


A. B. C. D.



4. _____

5) Guardando la figura in 3d da dietro, cosa vedresti?



A. B. C. D.



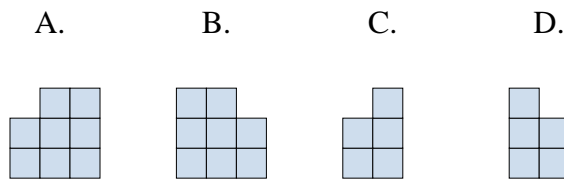
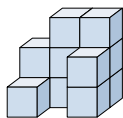
5. _____



Risolvi ogni problema.

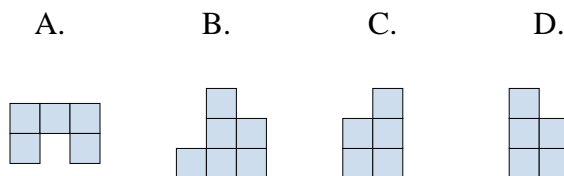
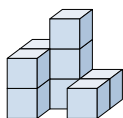
Risposte

1) Guardando la figura in 3d da dietro, cosa vedresti?



1. **B**

2) Guardando la figura in 3d da dietro, cosa vedresti?



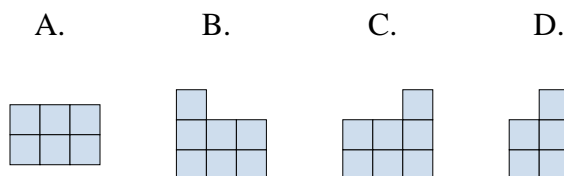
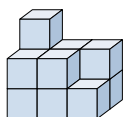
2. **B**

3. **C**

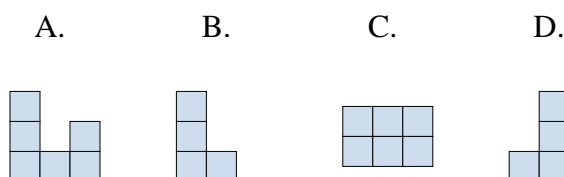
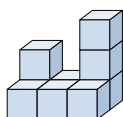
4. **B**

5. **C**

3) Guardando la figura in 3d da dietro, cosa vedresti?



4) Guardando la figura in 3d dal lato sinistro, cosa vedresti?



5) Guardando la figura in 3d da dietro, cosa vedresti?

