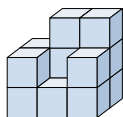








Risolvi ogni problema.

Risposte

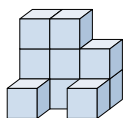
1) Guardando la figura in 3d dal lato sinistro, cosa vedresti?







- A.  B.  C.  D. 

1. _____

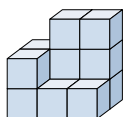
2) Guardando la figura in 3d dall'alto, cosa vedresti?







- A.  B.  C.  D. 

2. _____

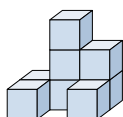
3) Guardando la figura in 3d da dietro, cosa vedresti?







- A.  B.  C.  D. 

3. _____

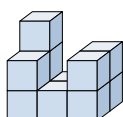
4) Guardando la figura in 3d dal lato sinistro, cosa vedresti?







- A.  B.  C.  D. 

4. _____

5) Guardando la figura in 3d dal lato sinistro, cosa vedresti?



- A.  B.  C.  D. 

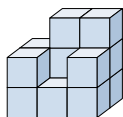
5. _____



Risolvi ogni problema.

Risposte

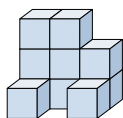
1) Guardando la figura in 3d dal lato sinistro, cosa vedresti?



- A.
- B.
- C.
- D.

1. **C**

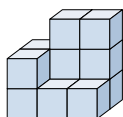
2) Guardando la figura in 3d dall'alto, cosa vedresti?



- A.
- B.
- C.
- D.

2. **A**

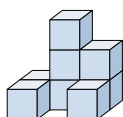
3) Guardando la figura in 3d da dietro, cosa vedresti?



- A.
- B.
- C.
- D.

3. **A**

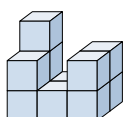
4) Guardando la figura in 3d dal lato sinistro, cosa vedresti?



- A.
- B.
- C.
- D.

4. **C**

5) Guardando la figura in 3d dal lato sinistro, cosa vedresti?



- A.
- B.
- C.
- D.

5. **D**