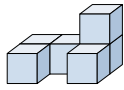




Risolvi ogni problema.

Risposte

1) Guardando la figura in 3d dal lato destro, cosa vedresti?



A.



B.



C.

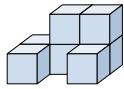


D.



1. _____

2) Guardando la figura in 3d dal lato destro, cosa vedresti?



A.



B.



C.

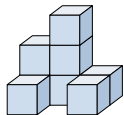


D.



2. _____

3) Guardando la figura in 3d da dietro, cosa vedresti?



A.



B.



C.

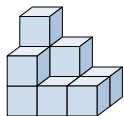


D.



3. _____

4) Guardando la figura in 3d dall'alto, cosa vedresti?



A.



B.



C.

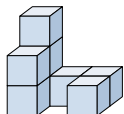


D.



4. _____

5) Guardando la figura in 3d dal lato destro, cosa vedresti?



A.



B.



C.



D.



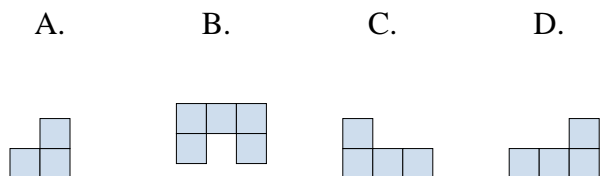
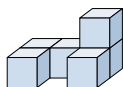
5. _____



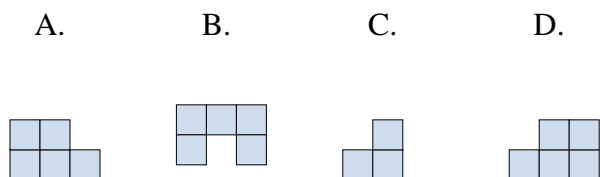
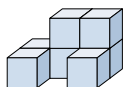
Risolvi ogni problema.

Risposte

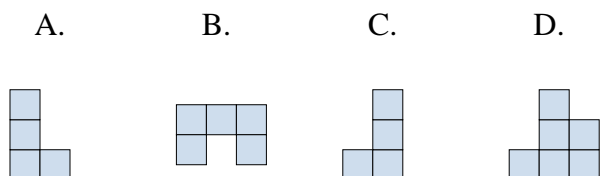
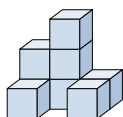
- 1) Guardando la figura in 3d dal lato destro, cosa vedresti?

1. **A**

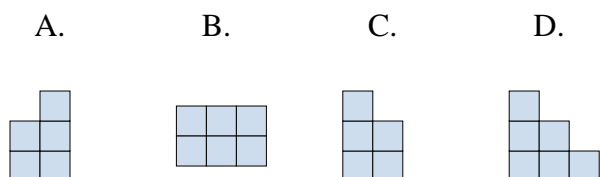
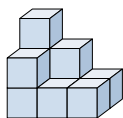
- 2) Guardando la figura in 3d dal lato destro, cosa vedresti?

2. **C** 3. **D** 4. **B** 5. **B**

- 3) Guardando la figura in 3d da dietro, cosa vedresti?



- 4) Guardando la figura in 3d dall'alto, cosa vedresti?



- 5) Guardando la figura in 3d dal lato destro, cosa vedresti?

