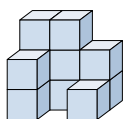




Risolvi ogni problema.

Risposte

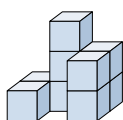
1) Guardando la figura in 3d dal lato destro, cosa vedresti?



- A.
- B.
- C.
- D.

1. _____

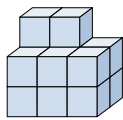
2) Guardando la figura in 3d dal lato destro, cosa vedresti?



- A.
- B.
- C.
- D.

2. _____

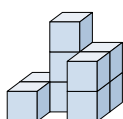
3) Guardando la figura in 3d dall'alto, cosa vedresti?



- A.
- B.
- C.
- D.

3. _____

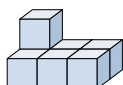
4) Guardando la figura in 3d dal lato sinistro, cosa vedresti?



- A.
- B.
- C.
- D.

4. _____

5) Guardando la figura in 3d dal lato sinistro, cosa vedresti?



- A.
- B.
- C.
- D.

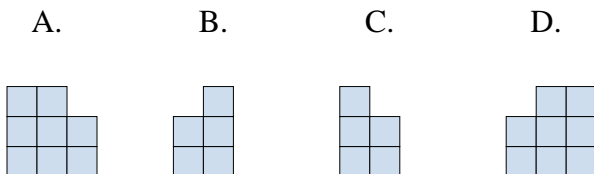
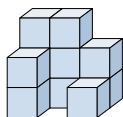
5. _____



Risolvi ogni problema.

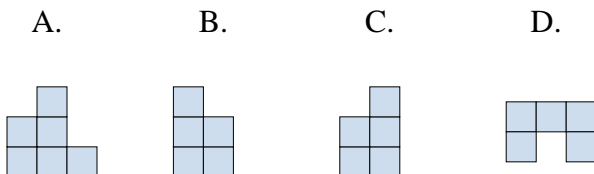
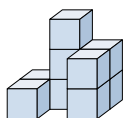
Risposte

1) Guardando la figura in 3d dal lato destro, cosa vedresti?



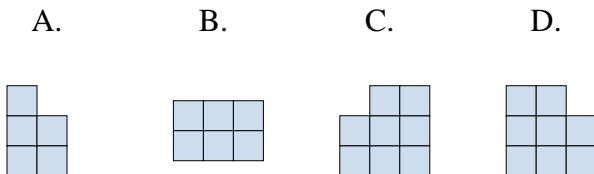
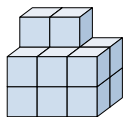
1. **B**

2) Guardando la figura in 3d dal lato destro, cosa vedresti?



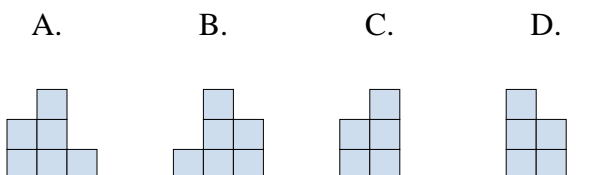
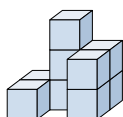
2. **C**

3) Guardando la figura in 3d dall'alto, cosa vedresti?



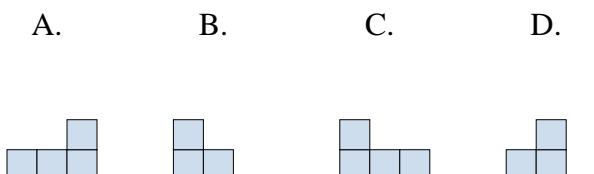
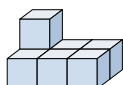
3. **B**

4) Guardando la figura in 3d dal lato sinistro, cosa vedresti?



4. **D**

5) Guardando la figura in 3d dal lato sinistro, cosa vedresti?



5. **B**