



Abbina ogni tabella al grafico appropriato.

**Risposte**

1)

Nome	Lattine Riciclate
Allen	
Beth	
Rick	
Andrea	
Dale	

2)

Nome	Lattine Riciclate
Allen	
Beth	
Rick	
Andrea	
Dale	

3)

Nome	Lattine Riciclate
Allen	
Beth	
Rick	
Andrea	
Dale	

4)

Nome	Lattine Riciclate
Allen	
Beth	
Rick	
Andrea	
Dale	

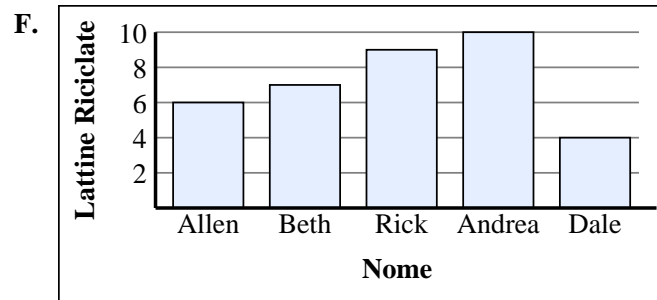
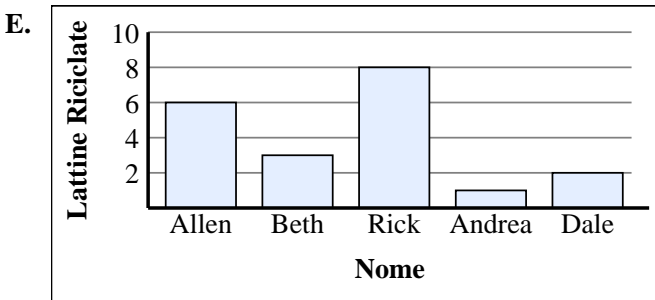
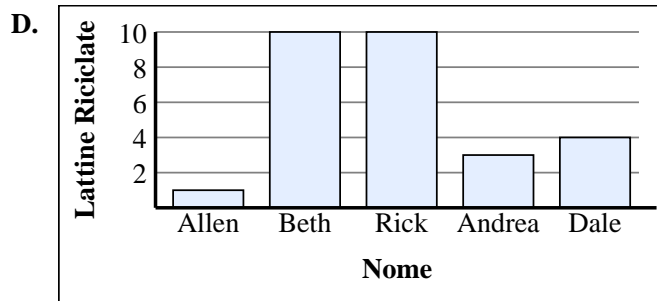
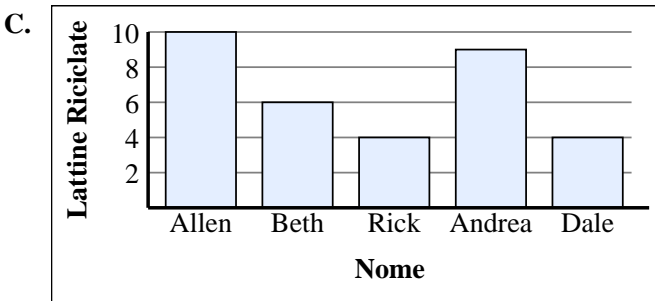
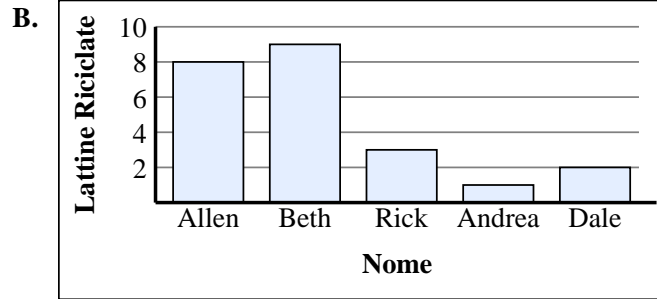
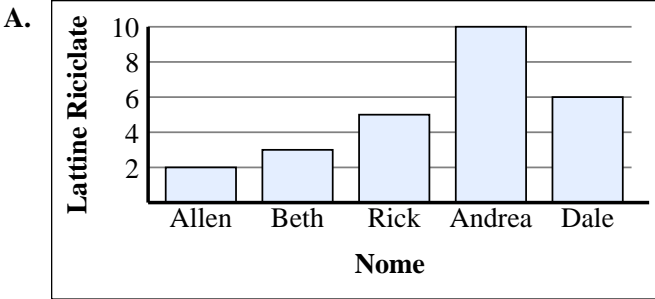
5)

Nome	Lattine Riciclate
Allen	
Beth	
Rick	
Andrea	
Dale	

6)

Nome	Lattine Riciclate
Allen	
Beth	
Rick	
Andrea	
Dale	

1. \_\_\_\_\_
2. \_\_\_\_\_
3. \_\_\_\_\_
4. \_\_\_\_\_
5. \_\_\_\_\_
6. \_\_\_\_\_





Abbina ogni tabella al grafico appropriato.

1)

Nome	Lattine Riciclate
Allen	
Beth	
Rick	
Andrea	
Dale	

2)

Nome	Lattine Riciclate
Allen	
Beth	
Rick	
Andrea	
Dale	

3)

Nome	Lattine Riciclate
Allen	
Beth	
Rick	
Andrea	
Dale	

4)

Nome	Lattine Riciclate
Allen	
Beth	
Rick	
Andrea	
Dale	

5)

Nome	Lattine Riciclate
Allen	
Beth	
Rick	
Andrea	
Dale	

6)

Nome	Lattine Riciclate
Allen	
Beth	
Rick	
Andrea	
Dale	

**Risposte**

1. **A**
2. **B**
3. **F**
4. **E**
5. **C**
6. **D**

