



Indica quale lettera risponde correttamente ad ogni domanda.

**Risposte**

- 1) Quale termometro rappresenta correttamente la temperatura di  $39^\circ$ ?
- 2) Quale termometro rappresenta correttamente la temperatura di  $12^\circ$ ?
- 3) Quale termometro rappresenta correttamente la temperatura di  $75^\circ$ ?
- 4) Quale termometro rappresenta correttamente la temperatura di  $100^\circ$ ?
- 5) Quale termometro rappresenta correttamente la temperatura di  $33^\circ$ ?
- 6) Quale termometro rappresenta correttamente la temperatura di  $15^\circ$ ?
- 7) Quale termometro rappresenta correttamente la temperatura di  $94^\circ$ ?
- 8) Quale termometro rappresenta correttamente la temperatura di  $54^\circ$ ?
- 9) Quale termometro rappresenta correttamente la temperatura di  $62^\circ$ ?
- 10) Quale termometro rappresenta correttamente la temperatura di  $41^\circ$ ?

1. \_\_\_\_\_

2. \_\_\_\_\_

3. \_\_\_\_\_

4. \_\_\_\_\_

5. \_\_\_\_\_

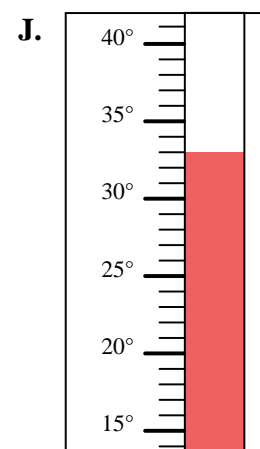
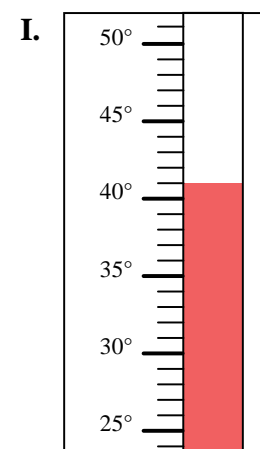
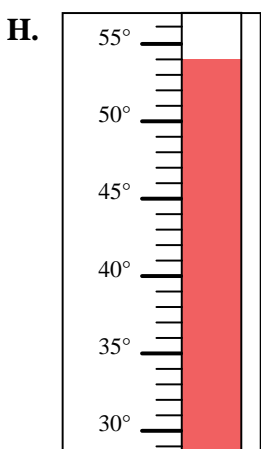
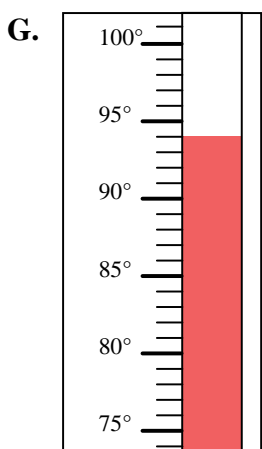
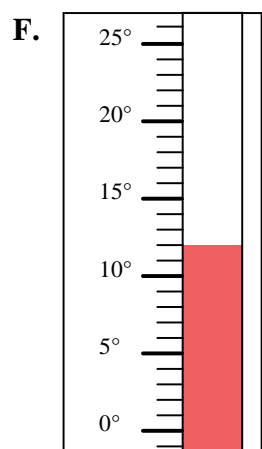
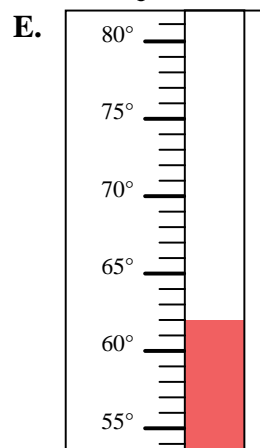
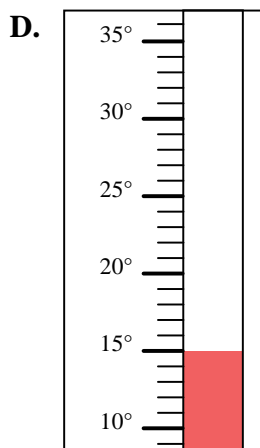
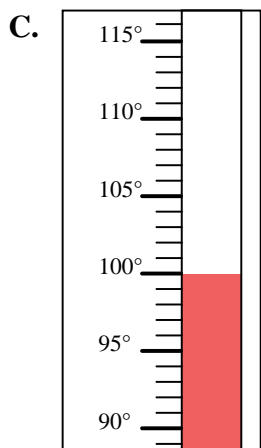
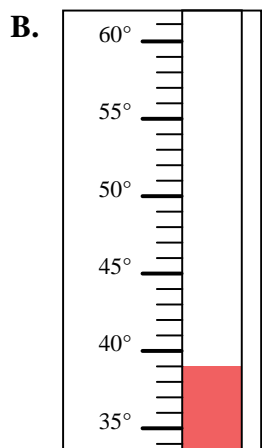
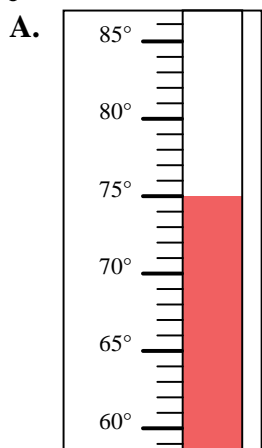
6. \_\_\_\_\_

7. \_\_\_\_\_

8. \_\_\_\_\_

9. \_\_\_\_\_

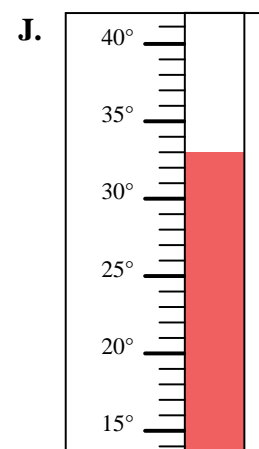
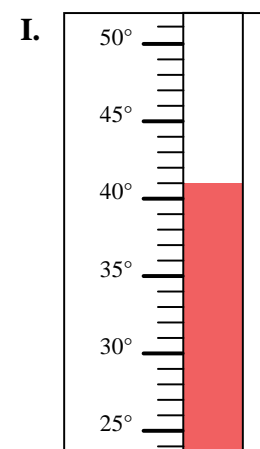
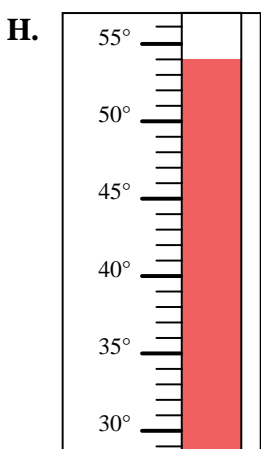
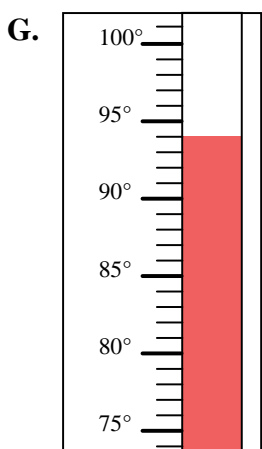
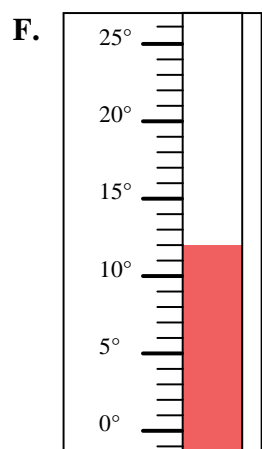
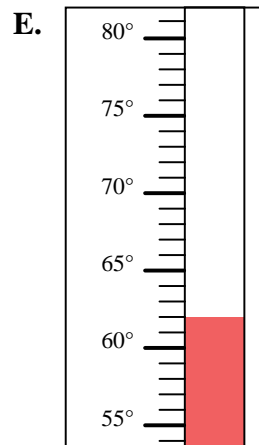
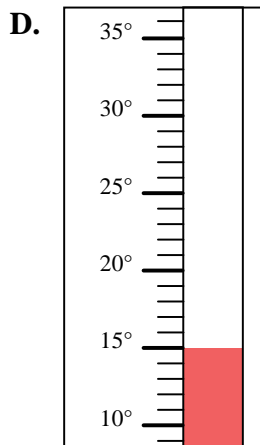
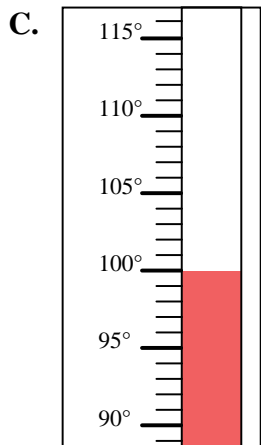
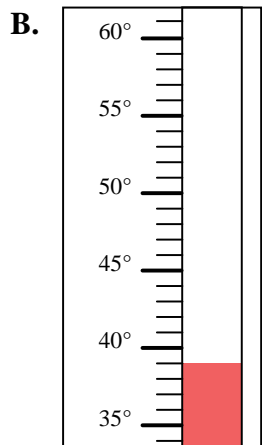
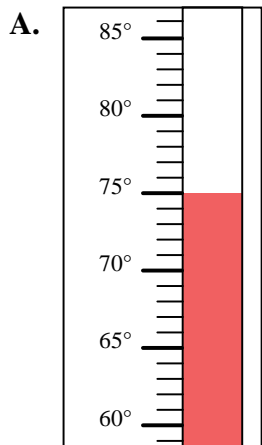
10. \_\_\_\_\_





Indica quale lettera risponde correttamente ad ogni domanda.

- 1) Quale termometro rappresenta correttamente la temperatura di  $39^\circ$ ?
- 2) Quale termometro rappresenta correttamente la temperatura di  $12^\circ$ ?
- 3) Quale termometro rappresenta correttamente la temperatura di  $75^\circ$ ?
- 4) Quale termometro rappresenta correttamente la temperatura di  $100^\circ$ ?
- 5) Quale termometro rappresenta correttamente la temperatura di  $33^\circ$ ?
- 6) Quale termometro rappresenta correttamente la temperatura di  $15^\circ$ ?
- 7) Quale termometro rappresenta correttamente la temperatura di  $94^\circ$ ?
- 8) Quale termometro rappresenta correttamente la temperatura di  $54^\circ$ ?
- 9) Quale termometro rappresenta correttamente la temperatura di  $62^\circ$ ?
- 10) Quale termometro rappresenta correttamente la temperatura di  $41^\circ$ ?

**Risposte**

1. **B**
2. **F**
3. **A**
4. **C**
5. **J**
6. **D**
7. **G**
8. **H**
9. **E**
10. **I**