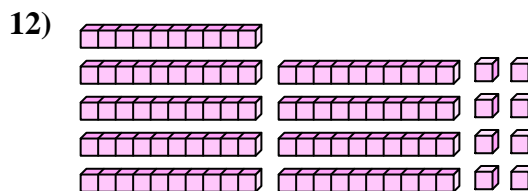
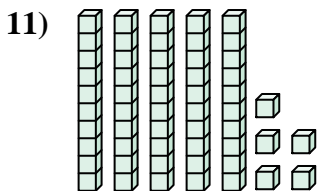
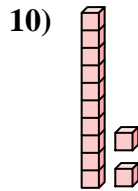
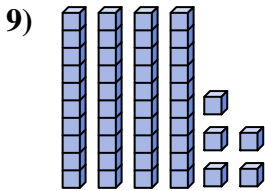
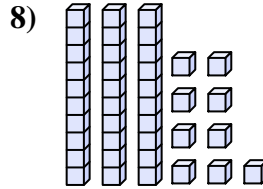
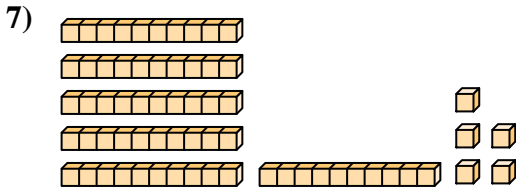
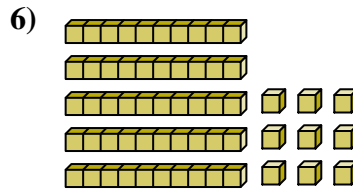
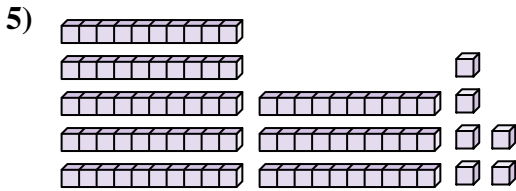

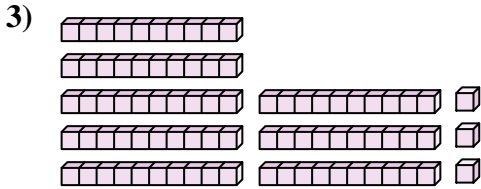
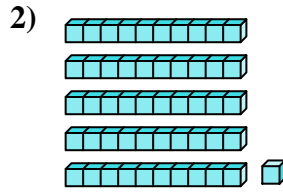
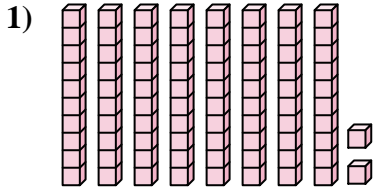




Conta il numero totale dei blocchi.



Risposte

1. _____

2. _____

3. _____

4. _____

5. _____

6. _____

7. _____

8. _____

9. _____

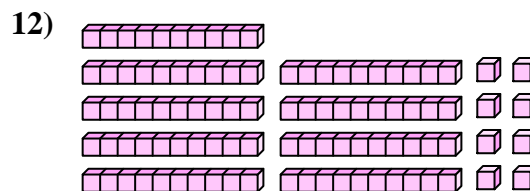
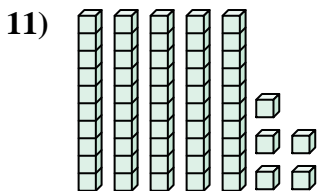
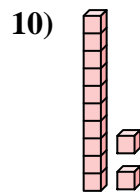
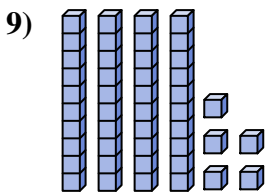
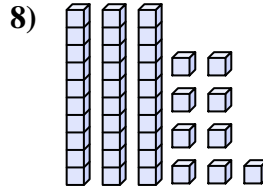
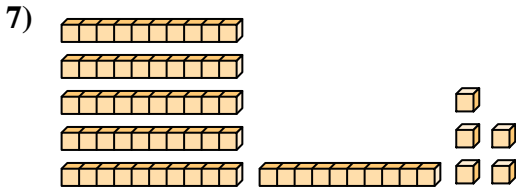
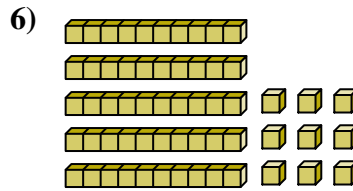
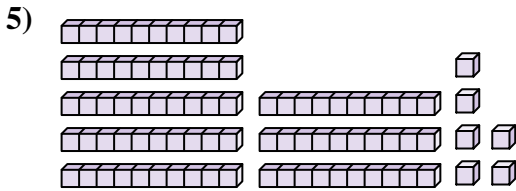

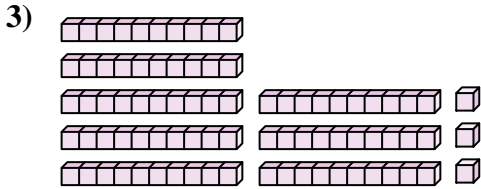
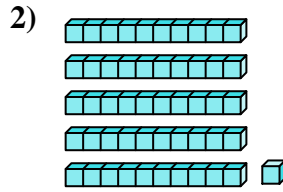
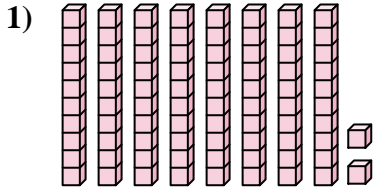
10. _____

11. _____

12. _____



Conta il numero totale dei blocchi.



Risposte

1. **82**

2. **51**

3. **83**

4. **54**

5. **86**

6. **59**

7. **65**

8. **39**

9. **45**

10. **12**

11. **55**

12. **98**



Conta il numero totale dei blocchi.

51	45	54	39	65
86	59	82	12	83

Risposte

1. _____
2. _____
3. _____
4. _____
5. _____
6. _____
7. _____
8. _____
9. _____
10. _____

