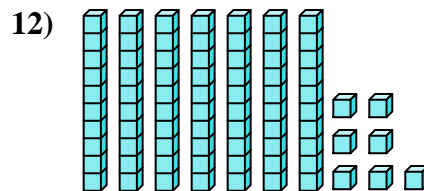
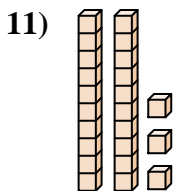
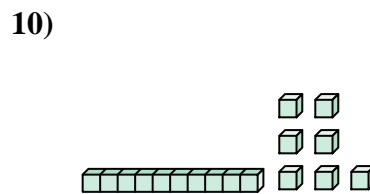
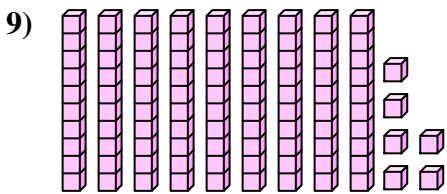
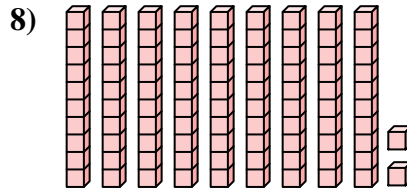
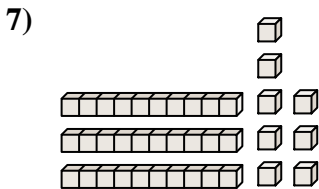
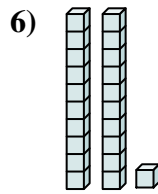
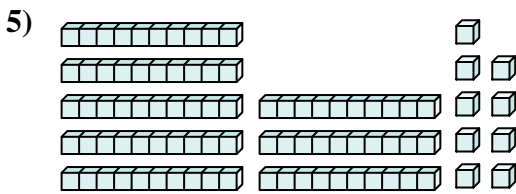
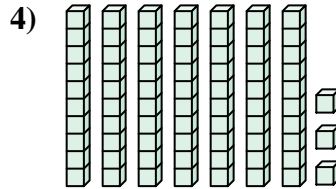
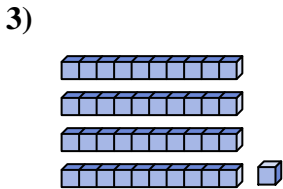
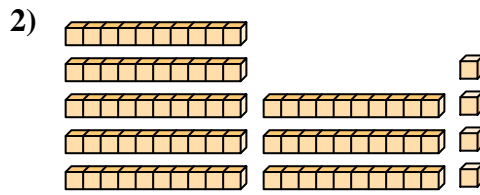
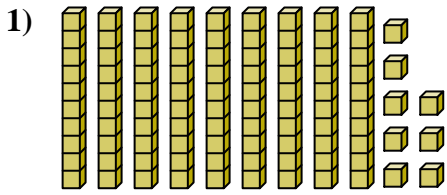




Conta il numero totale dei blocchi.



**Risposte**

1. \_\_\_\_\_

2. \_\_\_\_\_

3. \_\_\_\_\_

4. \_\_\_\_\_

5. \_\_\_\_\_

6. \_\_\_\_\_

7. \_\_\_\_\_

8. \_\_\_\_\_

9. \_\_\_\_\_

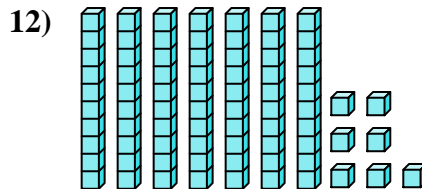
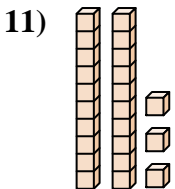
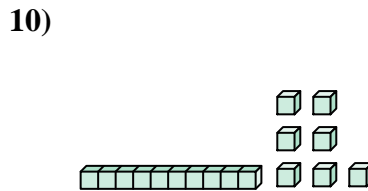
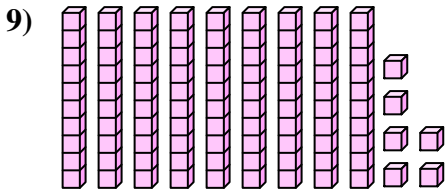
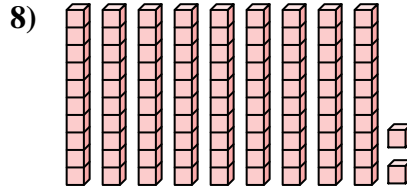
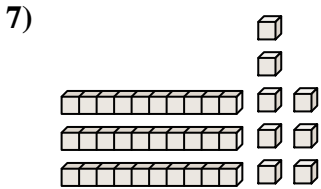
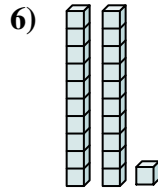
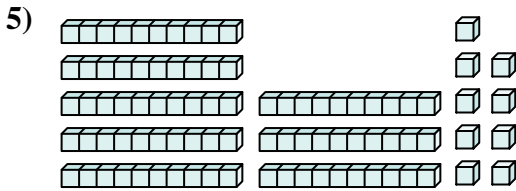
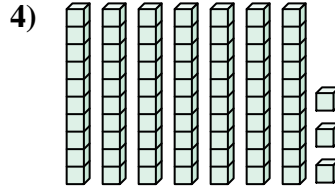
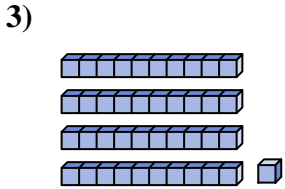
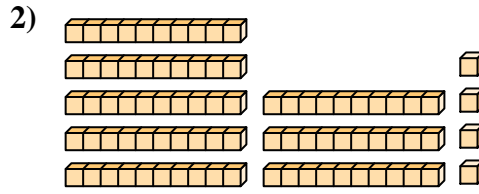
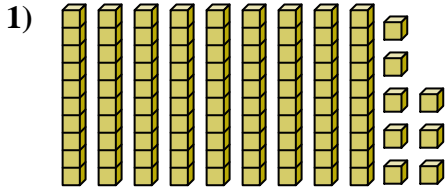
10. \_\_\_\_\_

11. \_\_\_\_\_

12. \_\_\_\_\_



Conta il numero totale dei blocchi.



**Risposte**

1. 98

2. 84

3. 41

4. 73

5. 89

6. 21

7. 38

8. 92

9. 96

10. 17

11. 23

12. 77



Conta il numero totale dei blocchi.

38

96

98

92

21

41

89

84

73

17

**Risposte**

- 1. \_\_\_\_\_
- 2. \_\_\_\_\_
- 3. \_\_\_\_\_
- 4. \_\_\_\_\_
- 5. \_\_\_\_\_
- 6. \_\_\_\_\_
- 7. \_\_\_\_\_
- 8. \_\_\_\_\_
- 9. \_\_\_\_\_
- 10. \_\_\_\_\_

