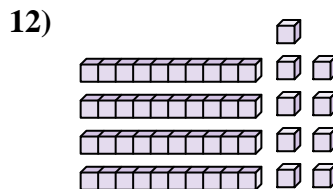
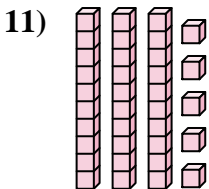
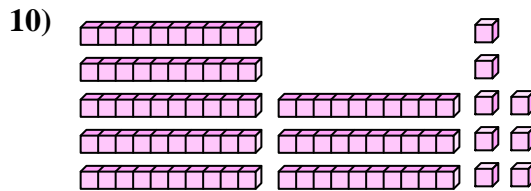
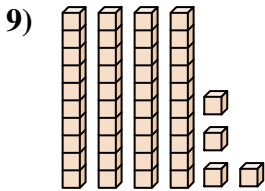
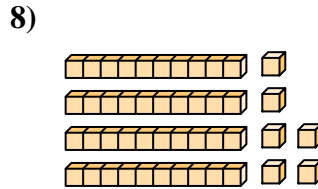
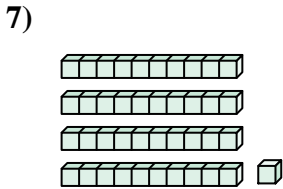
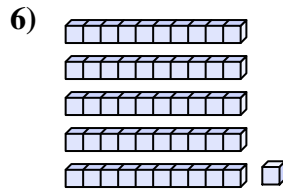
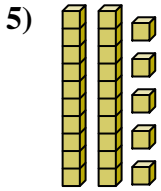
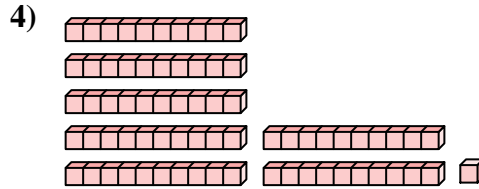
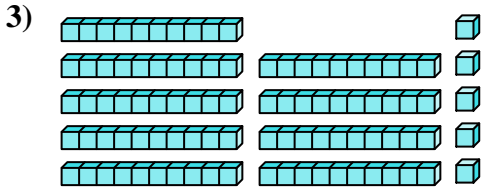
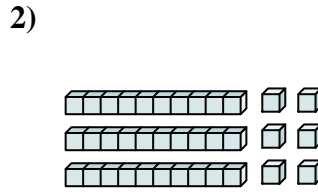
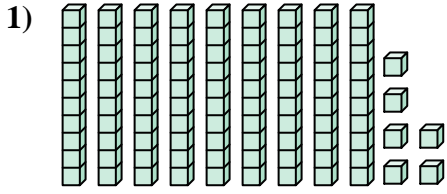




Conta il numero totale dei blocchi.



**Risposte**

1. \_\_\_\_\_

2. \_\_\_\_\_

3. \_\_\_\_\_

4. \_\_\_\_\_

5. \_\_\_\_\_

6. \_\_\_\_\_

7. \_\_\_\_\_

8. \_\_\_\_\_

9. \_\_\_\_\_

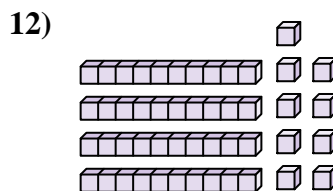
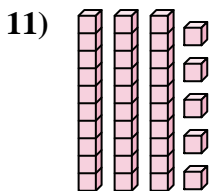
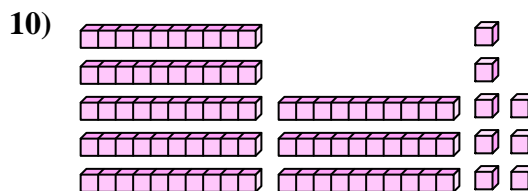
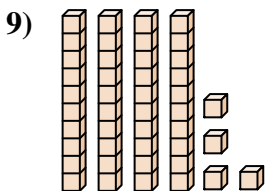
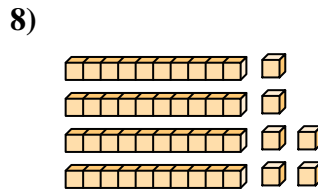
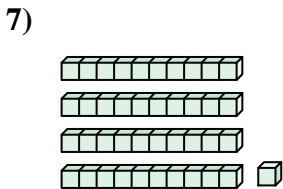
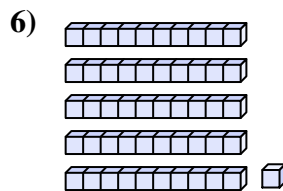
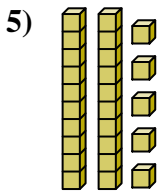
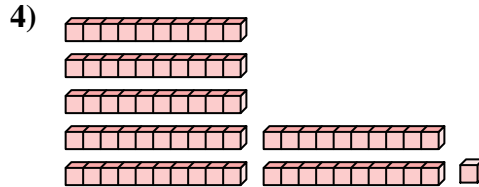
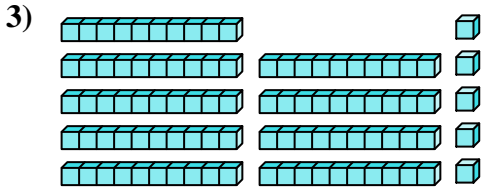
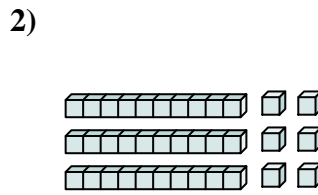
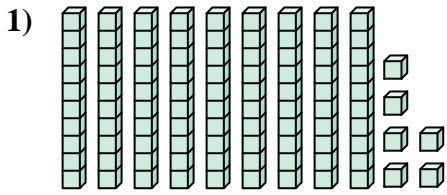
10. \_\_\_\_\_

11. \_\_\_\_\_

12. \_\_\_\_\_



Conta il numero totale dei blocchi.



**Risposte**

1. 96

2. 36

3. 95

4. 71

5. 25

6. 51

7. 41

8. 46

9. 44

10. 88

11. 35

12. 49



Conta il numero totale dei blocchi.

88	25	36	44	46
41	51	96	71	95

**Risposte**

1. \_\_\_\_\_
2. \_\_\_\_\_
3. \_\_\_\_\_
4. \_\_\_\_\_
5. \_\_\_\_\_
6. \_\_\_\_\_
7. \_\_\_\_\_
8. \_\_\_\_\_
9. \_\_\_\_\_
10. \_\_\_\_\_

