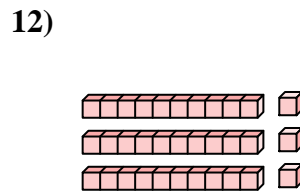
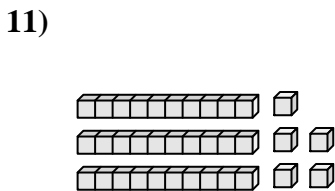
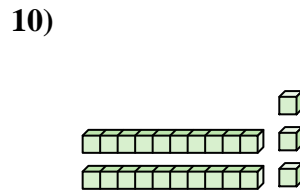
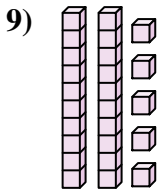
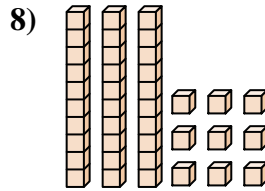
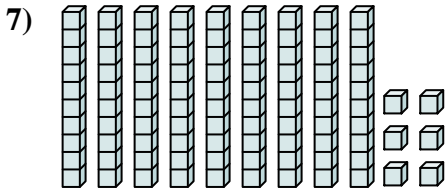
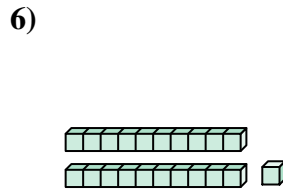
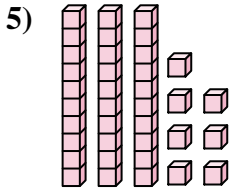
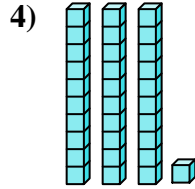
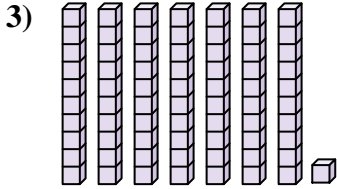
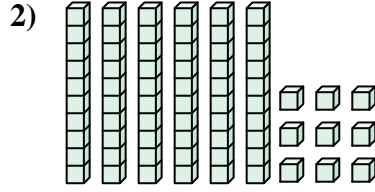
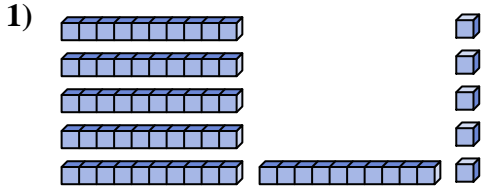




Conta il numero totale dei blocchi.



**Risposte**

1. \_\_\_\_\_

2. \_\_\_\_\_

3. \_\_\_\_\_

4. \_\_\_\_\_

5. \_\_\_\_\_

6. \_\_\_\_\_

7. \_\_\_\_\_

8. \_\_\_\_\_

9. \_\_\_\_\_

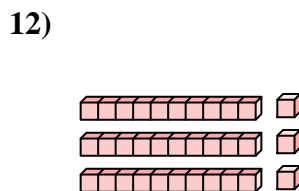
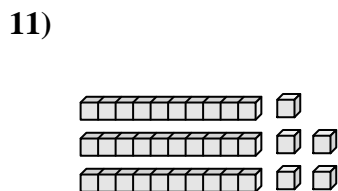
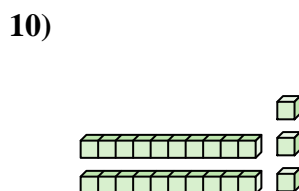
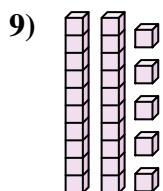
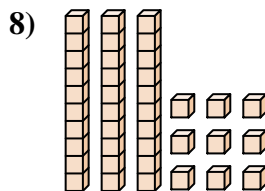
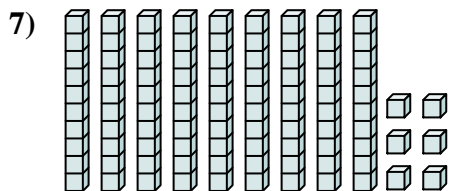
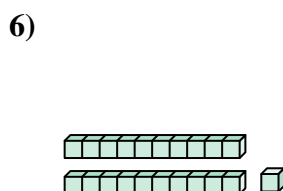
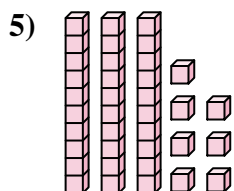
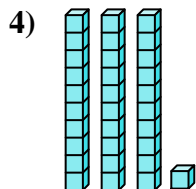
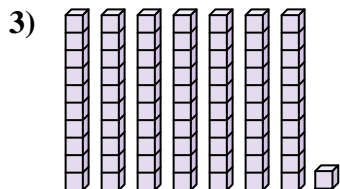
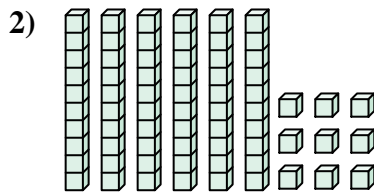
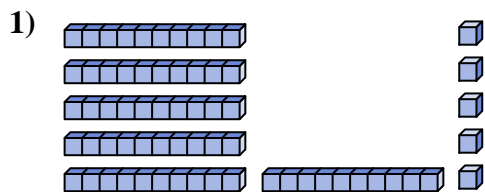
10. \_\_\_\_\_

11. \_\_\_\_\_

12. \_\_\_\_\_



Conta il numero totale dei blocchi.



**Risposte**

1. 65

2. 69

3. 71

4. 31

5. 37

6. 21

7. 96

8. 39

9. 25

10. 23

11. 35

12. 33



Conta il numero totale dei blocchi.

23

71

65

31

69

96

21

37

39

25

**Risposte**

1. \_\_\_\_\_

2. \_\_\_\_\_

3. \_\_\_\_\_

4. \_\_\_\_\_

5. \_\_\_\_\_

6. \_\_\_\_\_

7. \_\_\_\_\_

8. \_\_\_\_\_

9. \_\_\_\_\_

10. \_\_\_\_\_

