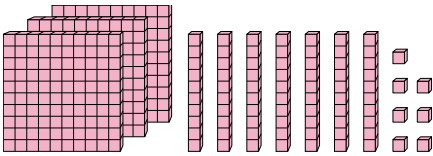




Trova il valore rappresentato da ogni set di blocchi.

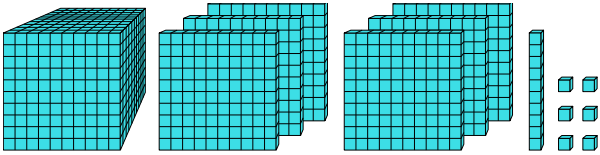
Risposte

1)



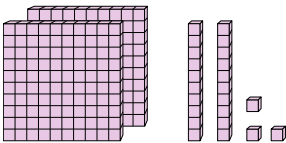
1. _____

2)



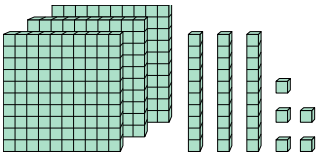
2. _____

3)



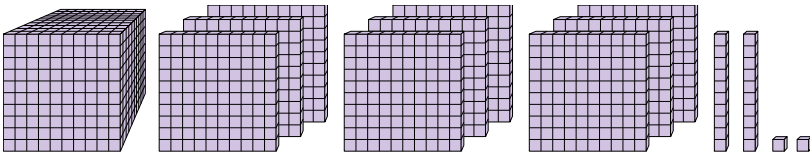
3. _____

4)



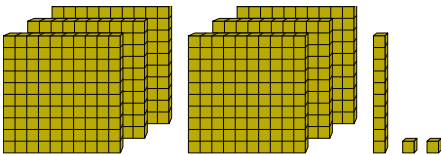
4. _____

5)



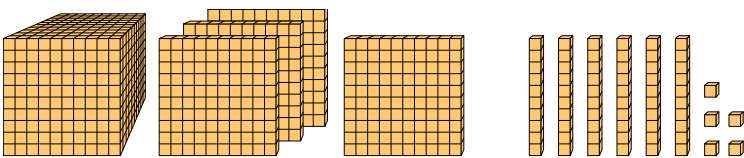
5. _____

6)



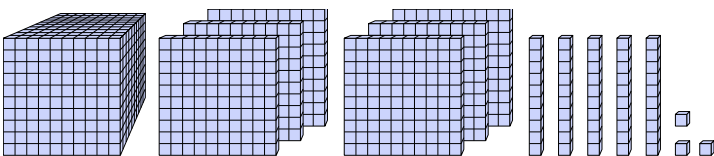
6. _____

7)



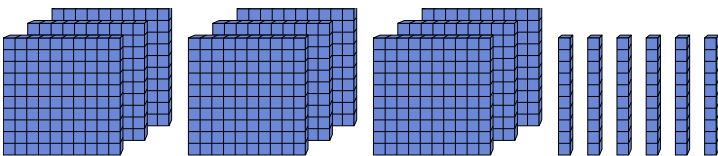
7. _____

8)



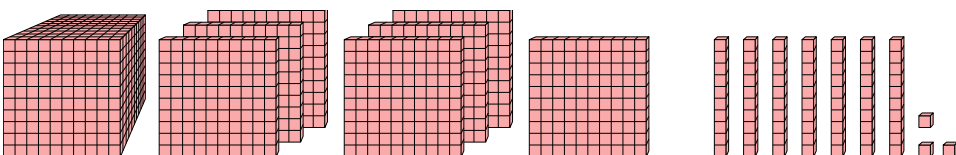
8. _____

9)



9. _____

10)



10. _____



Trova il valore rappresentato da ogni set di blocchi.

1)

2)

3)

4)

5)

6)

7)

8)

9)

10)

Risposte

1. 377
2. 1.616
3. 223
4. 335
5. 1.922
6. 612
7. 1.465
8. 1.653
9. 960
10. 1.773