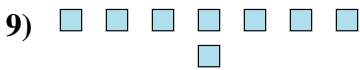
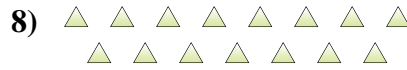
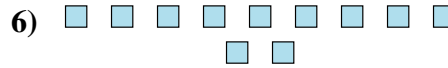
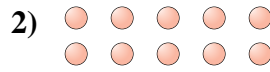





Determina se il numero delle figure all'interno di ogni rettangolo è pari o dispari.


Risposte

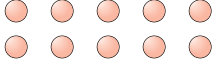



- 1. _____
- 2. _____
- 3. _____
- 4. _____
- 5. _____
- 6. _____
- 7. _____
- 8. _____
- 9. _____
- 10. _____



Determina se il numero delle figure all'interno di ogni rettangolo è pari o dispari.

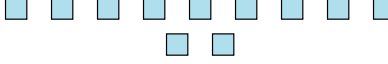
1) 
18

2) 
10

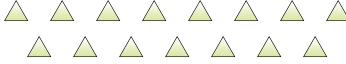
3) 
6

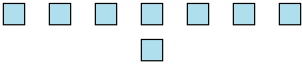
4) 
13


5) 
6

6) 
11

7) 
12

8) 
15

9) 
8

10) 
16

Risposte

1. Pari

2. Pari

3. Pari

4. Dispari

5. Pari

6. Dispari

7. Pari

8. Dispari

9. Pari

10. Pari